



Maha Bodhi School
2009 Semestral Assessment 1
Mathematics

Name : _____ ()

Class: Pr 1 _____

Duration : 1 h 30 min

Date : 5 May 2009

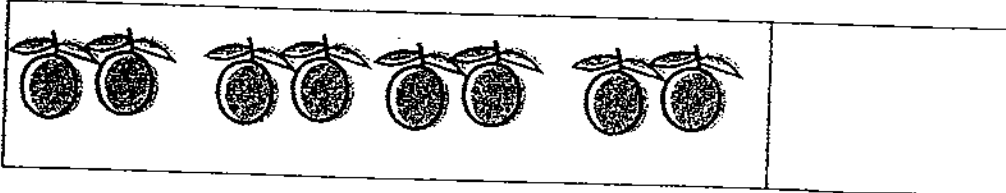
Parent's Signature : _____

Section A (80 marks)	
Section B (20 marks)	
Total (100 marks)	

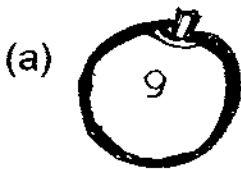
Section A (80 marks)

Questions 1 to 40 carry 2 marks each.

1. Count and write the number.





2. Write in words.



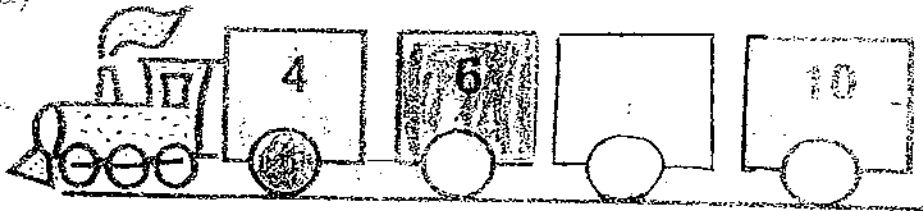


3. Put a tick (\checkmark) in the box for the set that has fewer cars.

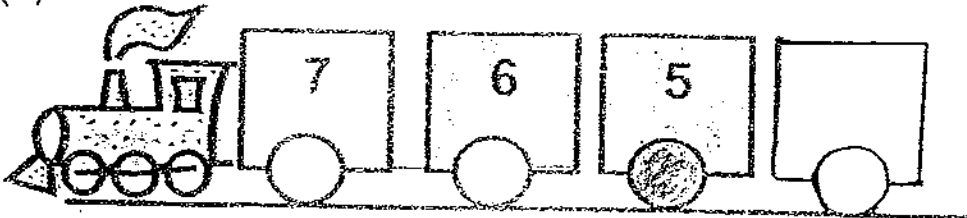
A		
B		

4. Fill in the missing numbers.

(a)



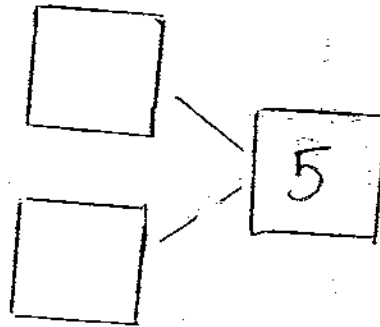
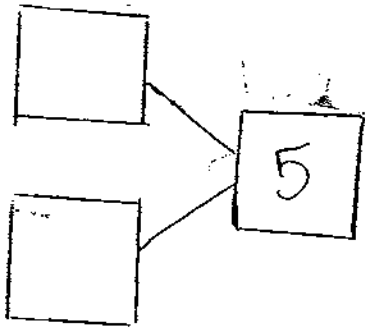
(b)



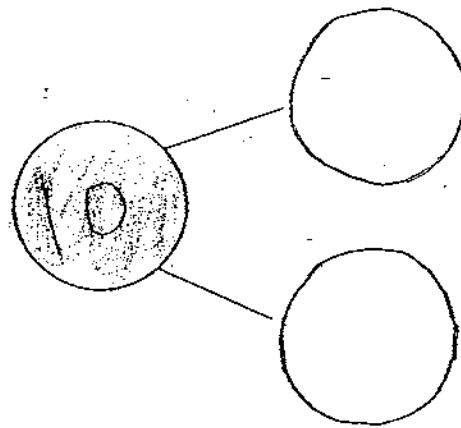
5. Fill in the missing number in the number bond below.



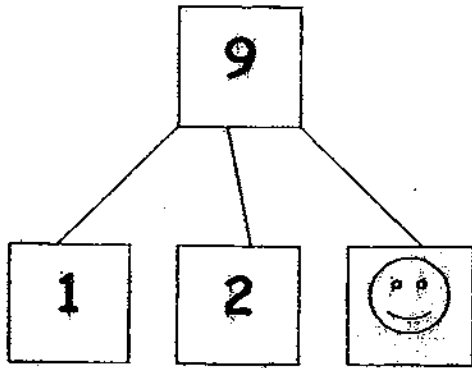
6. Complete the number bonds below. Use each number once only.




7. Pick **three** numbers to complete the number bond below.



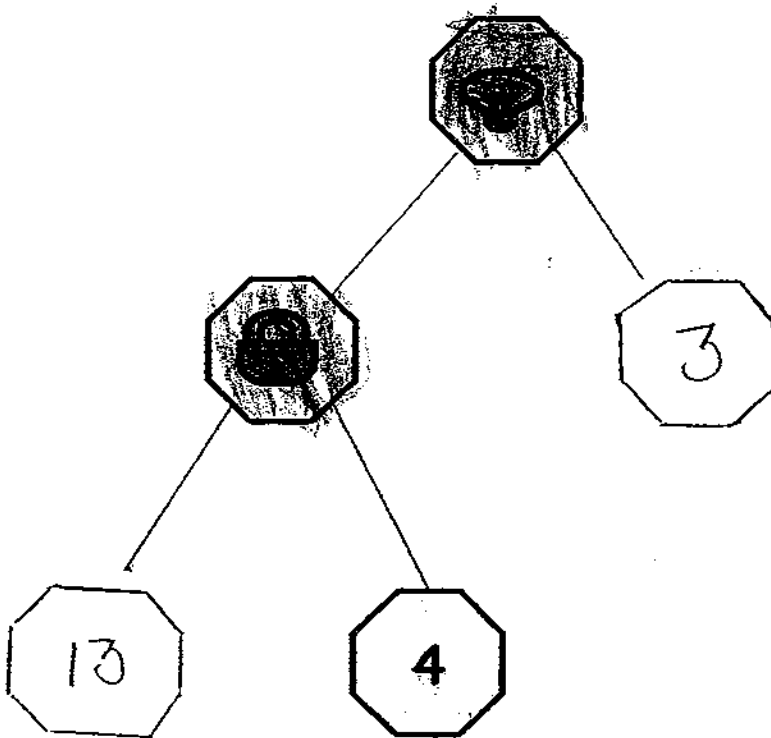
8. What does  stand for?




 stands for _____

9. Study the number bonds.

What numbers do  and  stand for ?



 stands for _____

 stands for _____

10. Fill in the blanks.

a) $3 + 3 =$ _____

b) $2 + 2 + 6 =$ _____

11. Fill in the blanks.

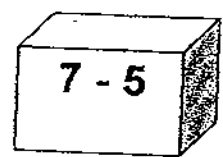

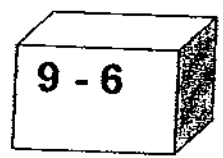
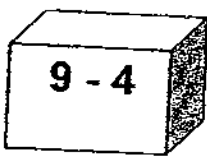
$4 + 1 +$ _____ $= 7$

12. There are 4 eggs in Basket A and 2 eggs in Basket B.








There are _____ eggs altogether.



13. Colour the box that gives the answer 4.



14.

If  +  = 8

and  +  +  = 9

then  +  = _____

15. Subtract.

a) $7 - 2 =$ _____

b) $8 - 7 =$ _____

16.

_____ is 3 less than 9.

17.



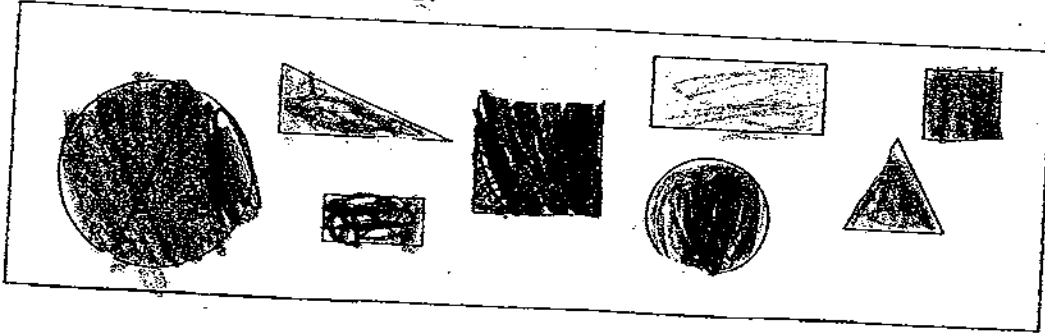
Mr Lee has 6 pets.

4 of them are dogs and the rest are cats.


The cats are in the basket.

He has _____ cats.

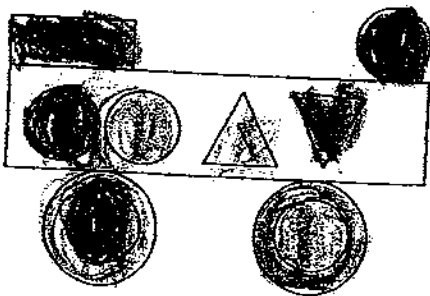
8. Cross out all the circles.



19. Ring the shape that comes next in the pattern.




20. Study the picture. Fill in the blanks with the names of the shapes.



There are 7 _____, 2 _____ and 2 rectangles.

21. Study the pattern.
- (a) Circle the mistake.
- (b) Tick the correct shape.



22. Draw a flag  on the 3rd boat.




23. Circle the sixth cat from the right.




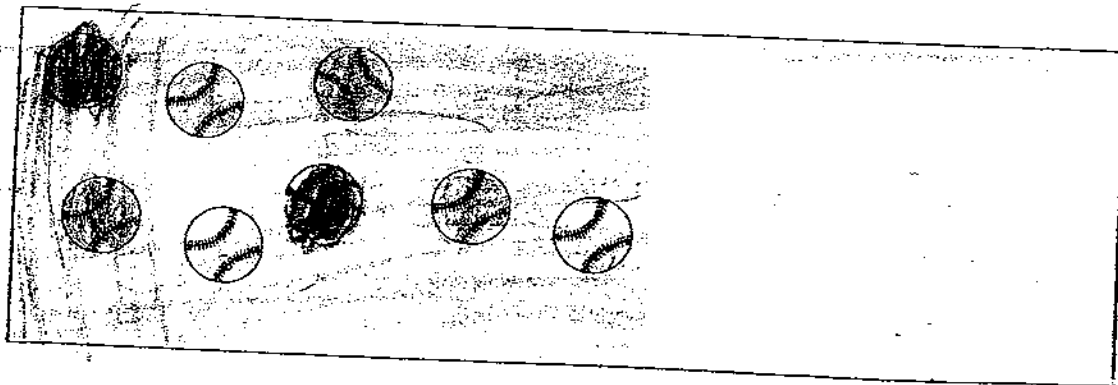
24. Roy is not 1st from the left.
 He is not 3rd from the right.
 He is standing between two boys.
 Where is Roy?
 Write "Roy" in the correct box.

A B C D



Below the boys are four empty rectangular boxes for labeling.

25. Draw more  in the box to make 13.

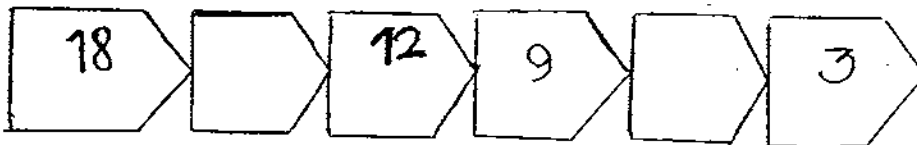


26. Write the number.
- (a) twenty _____
- (b) eleven _____

27. Arrange the numbers in order.
Begin with the **greatest** number.



28. Complete the number pattern.




29. I am greater than 3 but smaller than 7.
What number can I be?

30. The number on each card is the same.
The two numbers make 18.

The two numbers are _____ and _____.

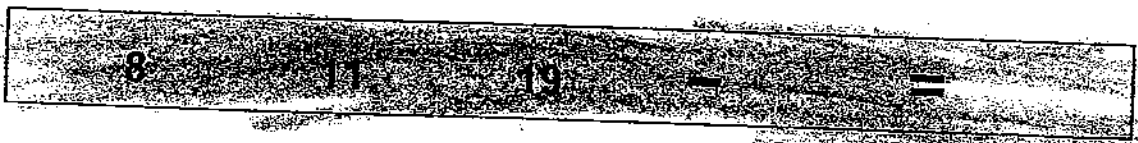
--	--

31. Complete the addition sentence.

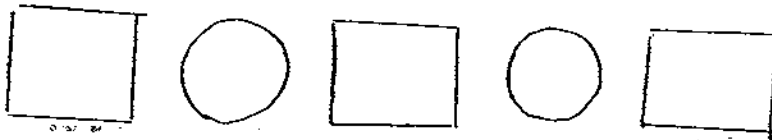


$$12 + \underline{\quad\quad} = \underline{\quad\quad}$$

32.



Use the numbers and signs given above to make a number sentence.



33. What is the missing number in the box?

(a) $15 + \square = 15$


(b) $\square - 9 = 4$

34. If  +  +  = 17 ,



 +  = 10

then  =

35. Circle the tallest tree.

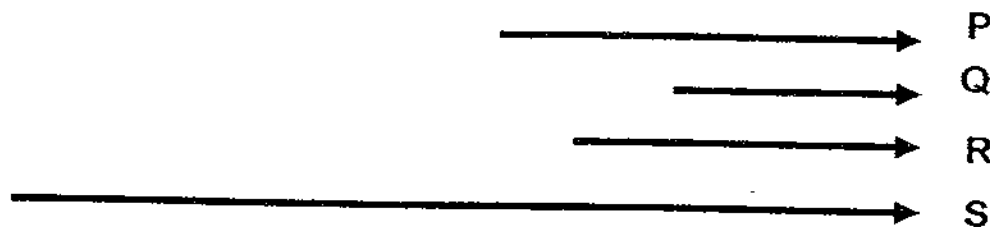


36. Study the pictures. Then fill in the blank.



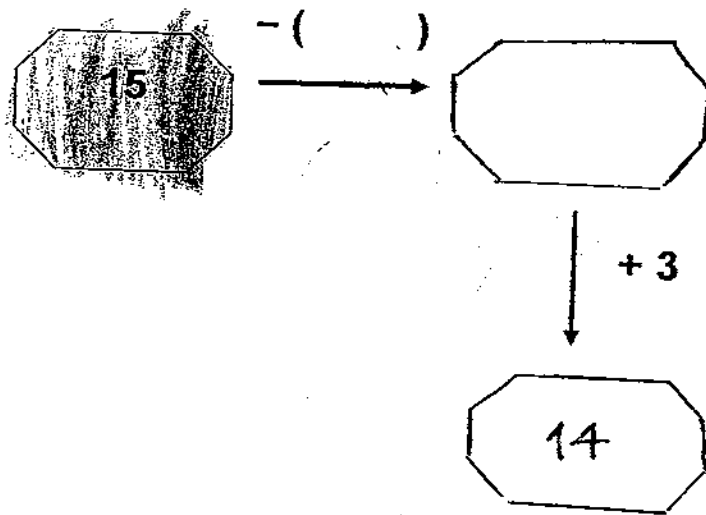
The green crayon is about _____ paper clips longer than the purple crayon.

37. Study the arrows below.




Arrow _____ is longer than Arrow R but shorter than Arrow S.

38. Fill in the blanks with the correct numbers.



39. Study the picture. Then fill in the blank.



There are _____ rectangles.

40

6 animals are in a queue to drink water from the tub as shown below. If the rooster walks away, the _____ will be the third animal in the queue



zebra



bear



horse

squirrel



rooster



cat



tub of water


Section B (20 marks)

Questions 41 to 45 carry 4 marks each. Fill in the blanks and the statements carefully.

41. After 6 children left the playground, 2 girls stayed on to play on the see-saw.

How many children were at the playground at first ?

$$\square \bigcirc \square = \square$$



There were _____ children at the playground at first.

42. Sally picks 10 shells.
3 of them are big and the rest are small.

How many small shells are there?

$$\square \bigcirc \square = \square$$



_____ shells are small.

43. Calvin bought 7 toy cars.
He bought 2 toy cars more than Denis.
How many toy cars did Denis buy ?

$$\square \ominus \square = \square$$



Denis bought _____ toy cars.

44. Mrs Han had 11 pens.
She gave 3 of them to Jim.
How many pens had she left?

$$\square \ominus \square = \square$$

She had _____ pens left.

45. Muthu reads 13 books.
Neil reads 9 fewer books than Muthu.

(a) How many books does Neil read?

$$\square \ominus \square = \square$$



Neil reads _____ books.

(b) How many books do the two boys read in all ?


$$\square \oplus \square = \square$$

They read _____ books in all.



Remember to check your work !
Every mark counts.

End of paper




ANSWER SHEET

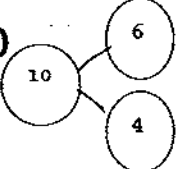
EXAM PAPER 2009

**SCHOOL : MAHA BODHI PRIMARY
SUBJECT : PRIMARY 1 MATHEMATICS**


TERM : SA1




1)8 2)a)nine b)Three 3)A 4)a)8 b)4 5)3 6)3,2,4,1

7)  8)6 9)20, 17 10)a)6 b)10 11)2 12)6
13)7-3 14)7 15)a)5 b)1 16)6 17)2 18)

19) 20)circles , triangles 21)a)  b) 

22)  23)☆○☆☆☆☆☆
7th

24)C 25)  26)a)20 b)11 27)17,14,12,9,7

28)15,6 29)6 30)9 and 9 31)12+6=18 32)19+11=8

33)a)0 b)13 34)7 35)C 36)2 37)P 38)4,11 39)5

40)horse 41)6+2=8 42)10-3=7 43)7-2=5 44)11-3=8

45)a)13-9=4 b)13+4=17