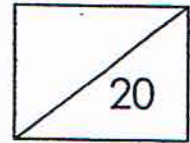


**KONG HWA SCHOOL
TOPICAL TEST TWO 2011
MATHEMATICS
PRIMARY ONE**

Name: _____ ()

Marks:



Class: Pr 1 (_____)

Date: 11 August 2011

Duration: 45 minutes



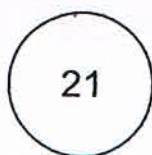
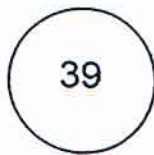
Parent's Signature: _____

Section A (14 x 1 mark)

Do Questions 1 to 14 carefully.


Fill in the blanks


1. Arrange the numbers below in order, starting from the smallest.



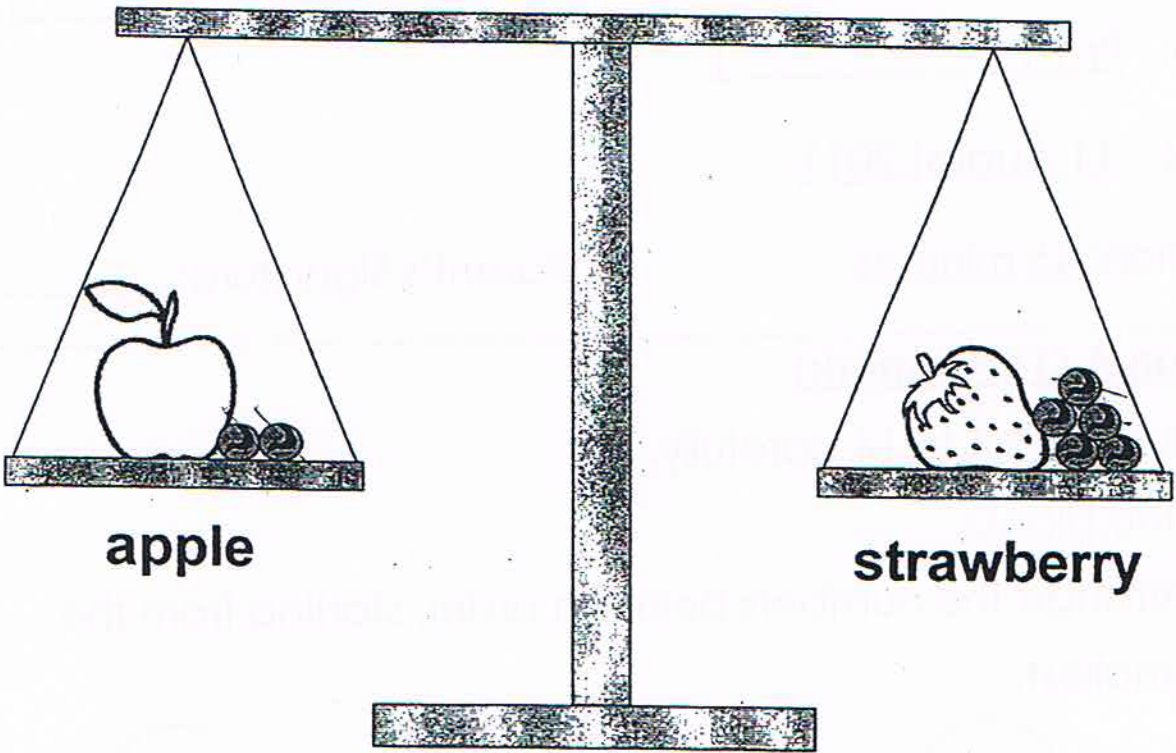
_____ , _____ , _____ , _____
smallest

2. $19 + 17 =$ _____

3.  is 2 more than 20.

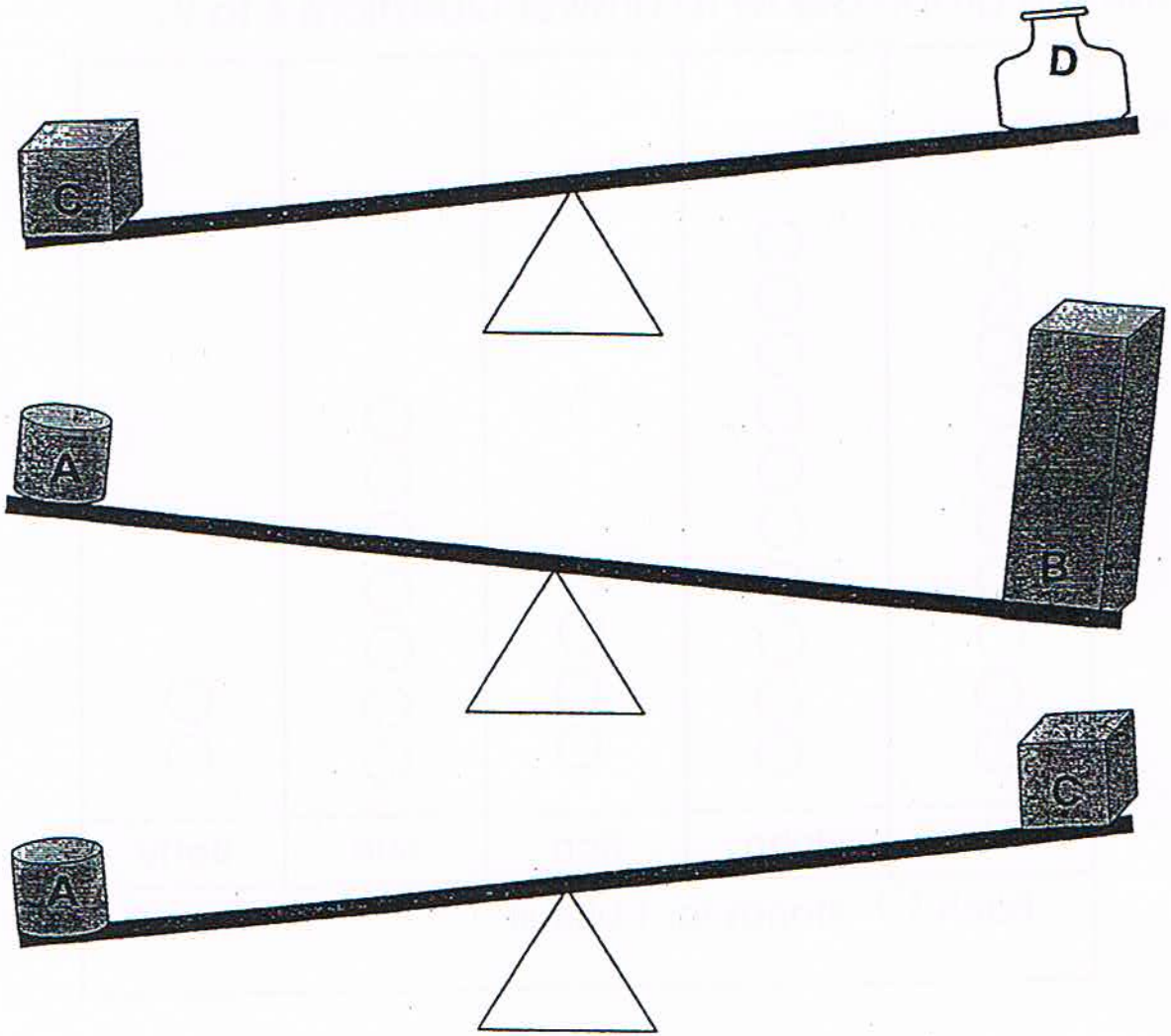
 + 4 = _____

4.



The _____ is heavier than the _____.

5.

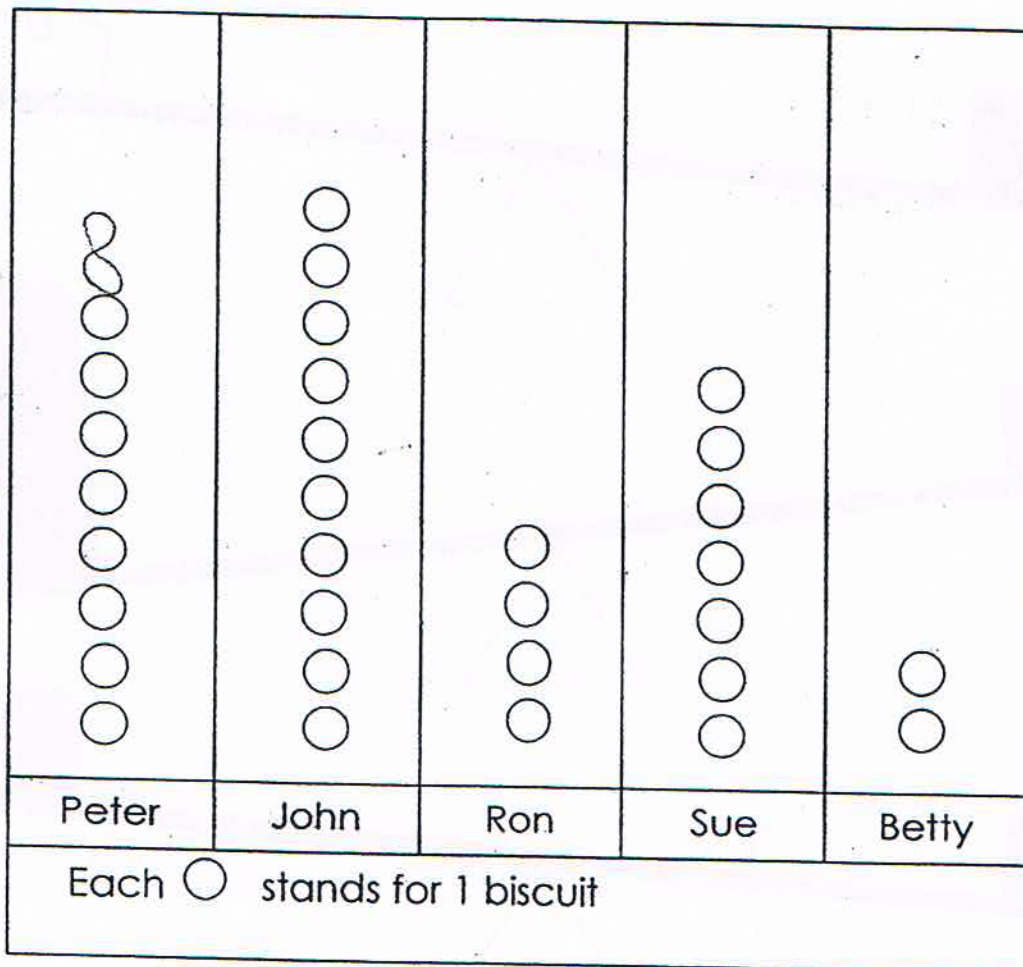


Arrange the objects **A**, **B**, **C** and **D** in order, beginning with the heaviest.

heaviest

The picture graph shows the number of biscuits 5 children have.

Use the graph below to answer Questions 6 to 9.

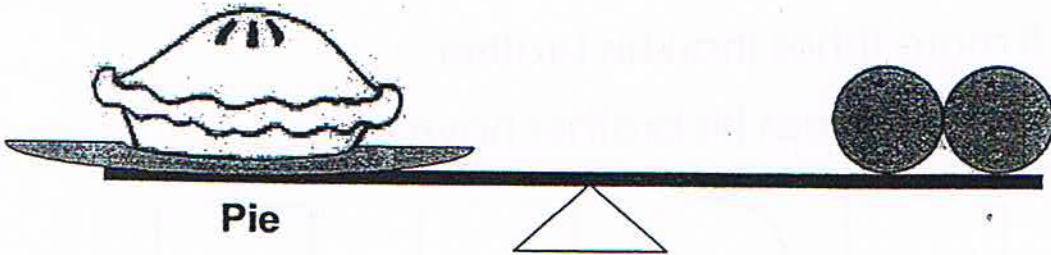
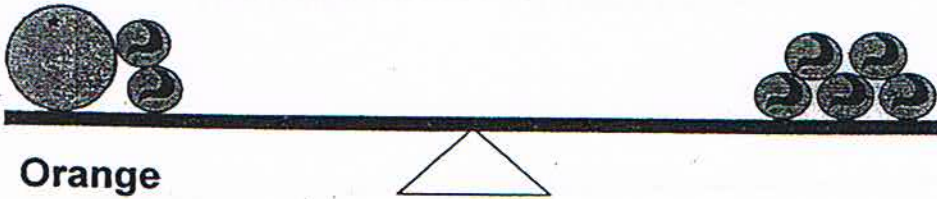


6. _____ has the most number of biscuits.
 7. _____ has 2 fewer biscuits than John.
 8. The children have _____ biscuits altogether.
 9. Betty needs to get _____ more biscuits if she wants to have 1 more biscuit than Sue.
-

10. Colour **two** of the numbers below that add up to **3 tens 4 ones**.



11. 40 , 39 , 37 , _____ , 30 , _____



12. The mass of the orange is _____ ●.

13. The mass of the pie is _____ ●.

14. The mass of 2 pies are _____ ●

Section B (2 x 3 marks)

Do the sum below carefully. Show your working clearly.

15. Mandy gave away 13 pens:

She has 26 pens left.

How many pens does she have at first?

$$\square \quad \bigcirc \quad \square = \square$$

Mandy has _____ pens altogether.

16. Tom has 34 fishes.

He has 15 more fishes than his brother.

How many fishes does his brother have?

$$\square \quad \bigcirc \quad \square = \square$$

His brother has _____ fishes.

End - of - Paper

Please remember to check your answers.





ANSWER SHEET

EXAM PAPER 2011

SCHOOL : KONG HWA
SUBJECT : PRIMARY 1 MATHEMATICS

TERM : TEST 2

1)11, 21, 29, 39 2)36 3)26 4)apple , strawberry 5)B, A, C, D

6)john 7)Peter 8)31 9)6 10)16, 18 11)34, 25

12)3 13)6 14)12

15) $13 + 26 = 39$
Mandy has 39 pens altogether.

16) $34 - 15 = 19$
His brother has 19 fishes.