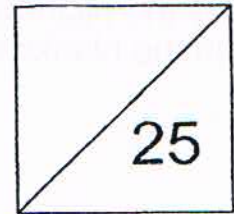


Nan Hua Primary School
Topical Test 5 - 2011
Mathematics
Primary One



Name: _____ ()

Class: P 1 _____

Marks:

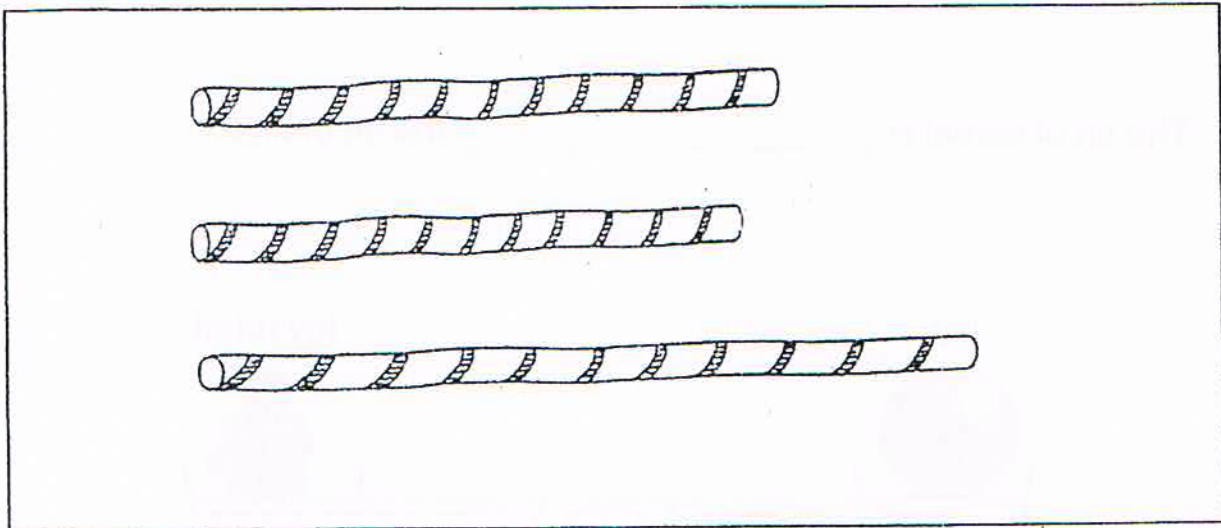
Date: _____

Duration: 40 min

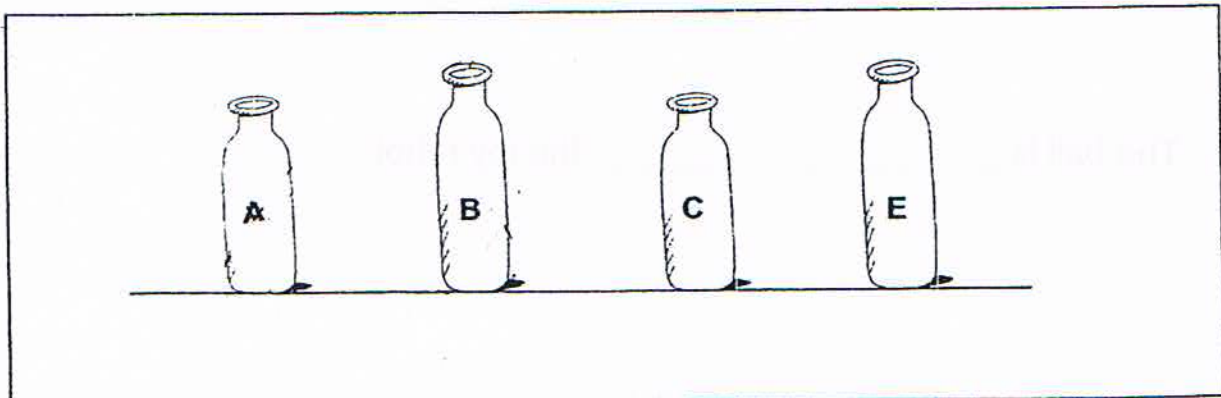
Parent's Signature: _____

Section A (2 × 1 mark)

1. Circle the **shortest** straw.



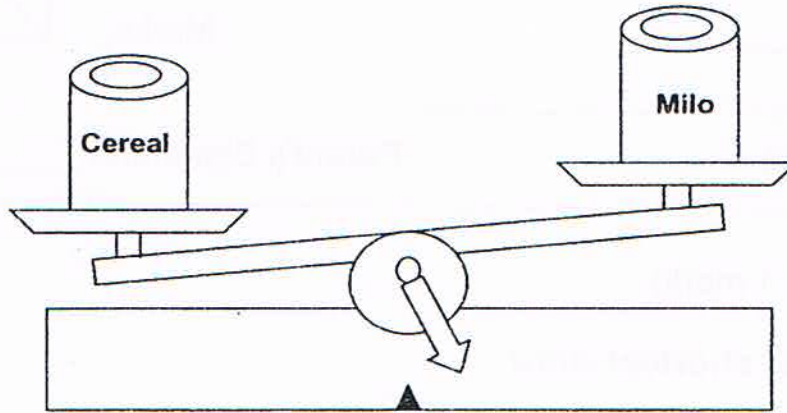
2. Cross out (x) the bottle which is as tall as **Bottle C**.



Section B (10 × 2 marks)

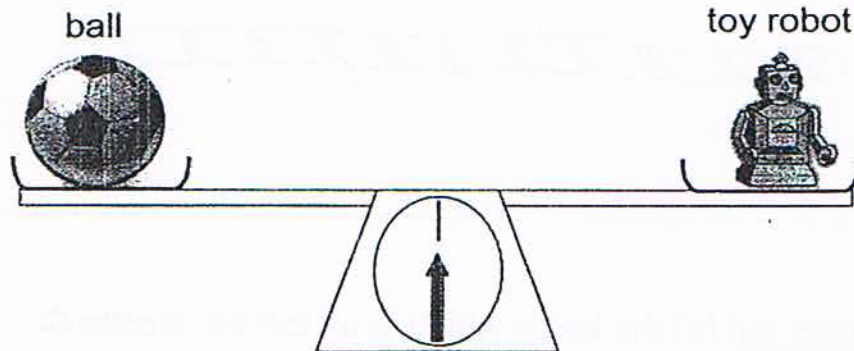
Study the pictures below carefully and answer Questions 3 and 4.
Fill in the blanks with 'as heavy as', 'heavier than' or 'lighter than'.

3.



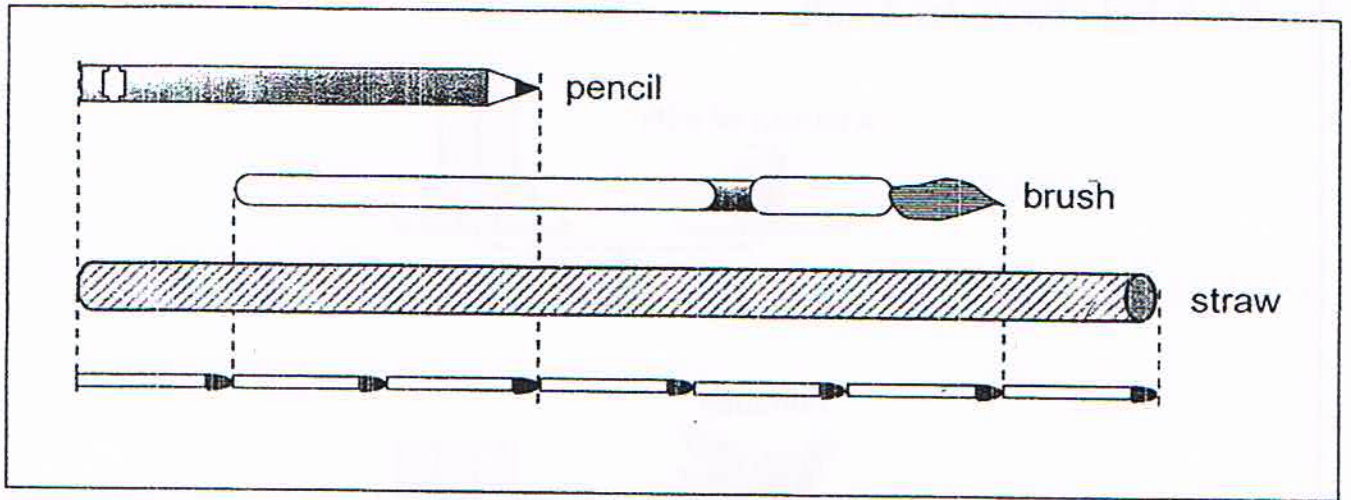
The tin of cereal is _____ the tin of Milo.


4.



The ball is _____ the toy robot.

Study the picture below carefully and answer Questions 5, 6 and 7.



5 The pencil is about  long.

6 The brush is about  **shorter than** the straw.

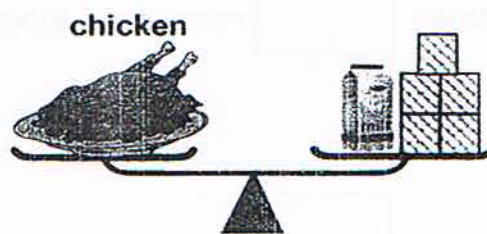

7 Arrange the pencil, brush and straw in order. Begin with the **longest**.

, ,

longest

Study the picture below carefully and answer Questions 8, 9 and 10.

Each  stands for 1 unit.




8 The mass of the carton of milk is units.

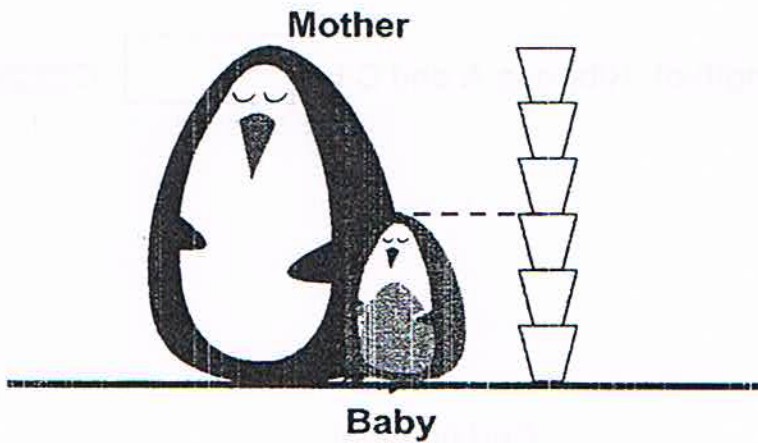
9 The mass of the chicken is units.

10 The mass of the chicken is units heavier than the bananas.

11 In the picture below, the skateboard is as long as shoes.

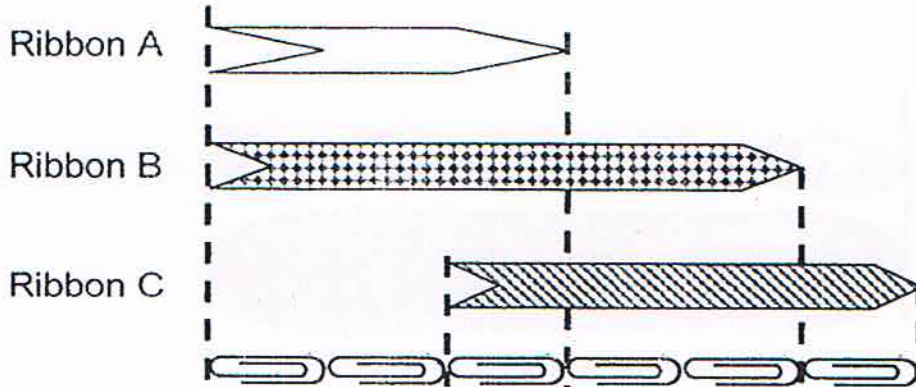


12. The mother penguin is about _____ taller than the baby penguin.



Section C (3 × 1 marks)

13. Study the picture below and answer the following questions.



a) Ribbon B is paper clips long.

b) Ribbon B is paper clips longer than Ribbon A.

c) The total length of Ribbons A and C is paper clips

End of paper




ANSWER SHEET

EXAM PAPER 2011

SCHOOL : NAN HUA
SUBJECT : PRIMARY 1 MATHEMATICS

TERM : Test 5



2)A

3)heavier than

4)as heavy as

5)3

6)2

7)straw, brush, pencil

8)7

9)12

10)6

11)5

12)3

13)a)5

b)2

c)7