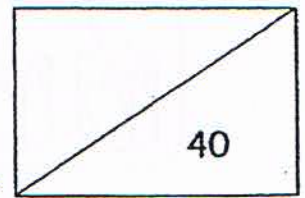


ROSYTH SCHOOL
PRIMARY 1 MATHEMATICS
Multiplication and Division
Term 4 - Topical Test 2



Name: _____ ()

Marks:

Class: P1 - _____

Date: 1st November 2011

Time: 40 minutes

Parent's Signature: _____

Section A - 10 marks

Questions 1 to 5 carry 2 marks each. For each question, four options are given. Choose the correct answer. Write its number 1, 2, 3 or 4 in the brackets provided.

1)



There are groups of 4.

(1) 12

(2) 2

(3) 3

(4) 4

()

2) 2 threes is the same as .

(1) $2 + 3$


(2) $2 \times 2 \times 2$

(3) 2×3

(4) 3×3

()

3) Share 8 drinks equally among 4 children.



Each child gets drinks.





(1) 8


(2) 2

(3) 12

(4) 4

()

4)  +  +  +  = 20

What is  ?

(1) 5

(2) 2

(3) 16

(4) 4

()

5) Some children have 18 erasers altogether.

If each child has 3 erasers, how many children are there altogether?



(1) 6

(2) 15

(3) 3

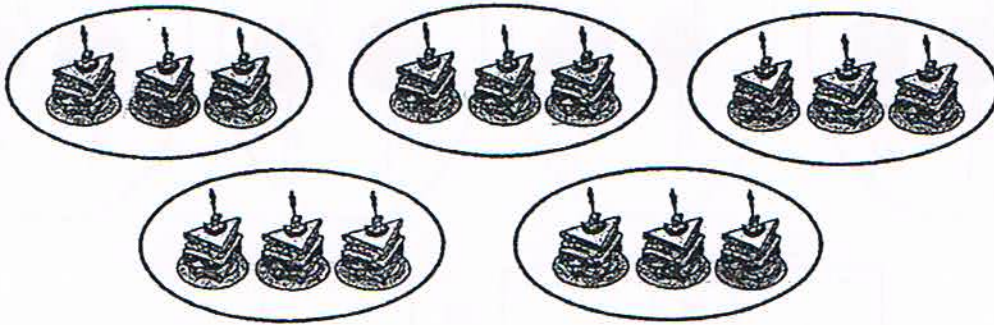
(4) 21

()

Section B - 22 marks


Questions 6 to 16 carry 2 marks each. Read the questions carefully. Write your answer in the space provided.

6)



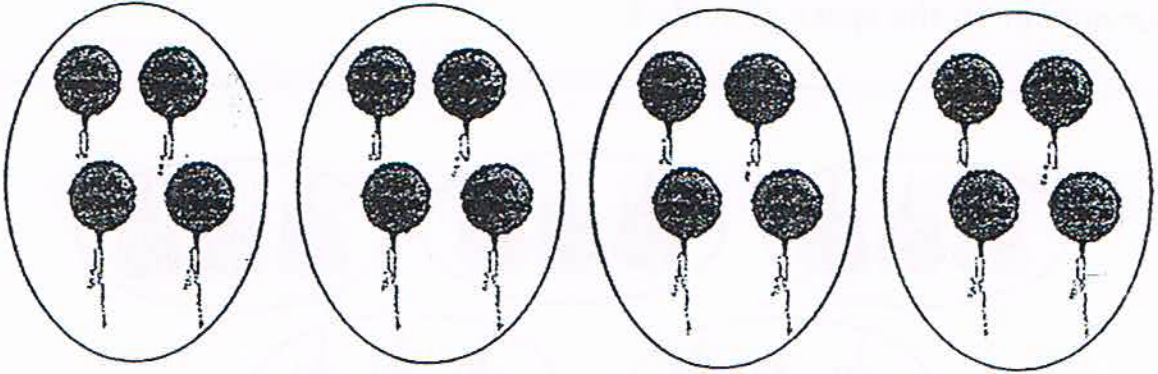
There are groups of sandwiches.

7) Look at the pictures below and fill in the blanks provided.



$$\square + \square + \square + \square + \square + \square = 12$$

8) Write a multiplication sentence based on the picture shown below.



$$\square \times \square = \square$$

9) Circle the trophies into groups of 2.



There are groups of 2.


10) There are 14 giraffes.

Circle them equally into 2 groups.





There are giraffes in each group.

11) Write 2 multiplication sentences based on the picture shown below.



<input type="text"/>	<input type="text"/>	<input type="text"/>	<input type="text"/>	<input type="text"/>
<input type="text"/>	<input type="text"/>	<input type="text"/>	<input type="text"/>	<input type="text"/>

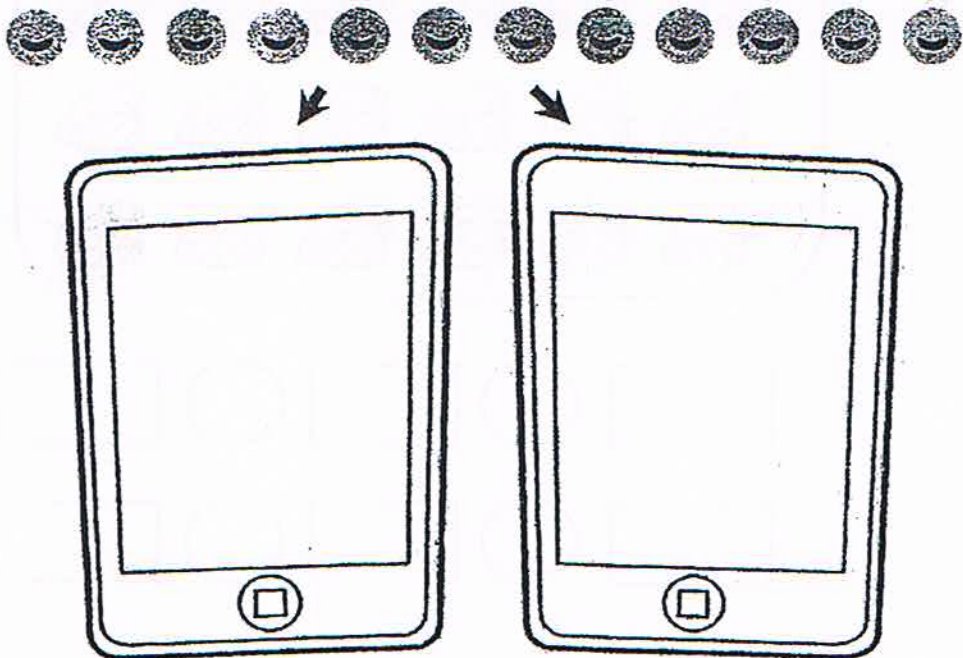
12) Draw  to show 2 groups of 5 in the space provided below.



13) Look at the picture below.

There are 12 stickers  altogether.

Draw an equal number of stickers  on each phone.



There are stickers  on each phone.

14) $10 \times 4 = \square + 10 + 10 + 10$

15) 1 ant has 6 legs.

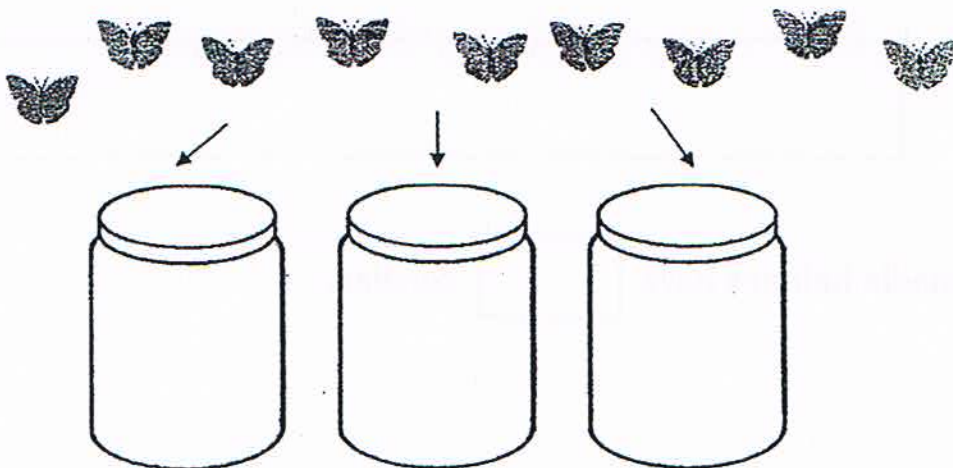
How many legs do 3 ants have altogether?



3 ants have legs altogether.

16) Siti caught 9 butterflies  and put them equally into 3 bottles.

How many butterflies did she put in each bottle?



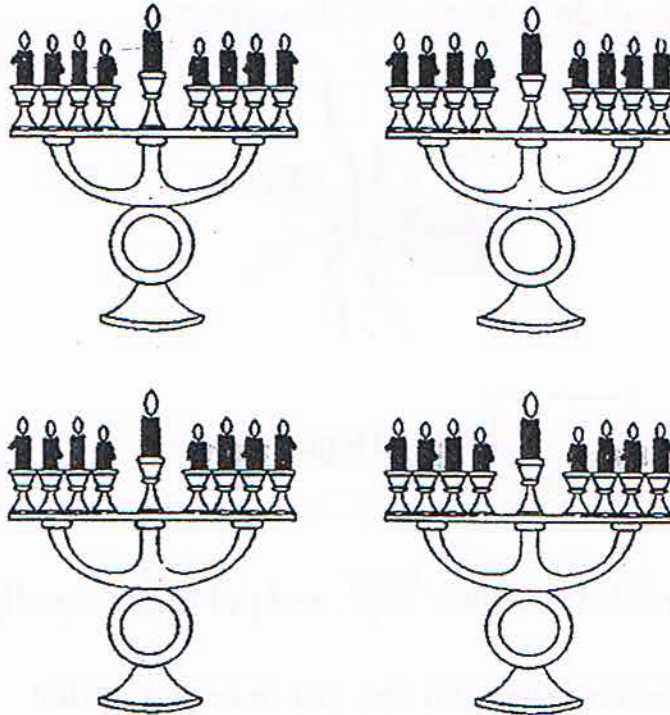
She put butterflies in each bottle.

Section C - 8 marks

For questions 17 to 20, show your working clearly. Write your answer in the space provided.

17) A candle holder has 9 candles.


How many candles do 4 candle holders have?



4 candle holders have candles.

18) Timothy and his 3 friends each bought a box of 6 colour pencils.

How many colour pencils did they buy altogether?



They bought colour pencils altogether.

19) Ali has 12 sweets which are put equally into 3 jars.

How many more sweets must he buy to have 7 sweets in each jar?



He must buy more sweets.

20) Susan had 20 stickers.

She pasted her stickers equally onto 5 pages of the sticker album.

How many stickers did she paste on each page of the album?



She pasted stickers on each page of the album.

- End of paper -

Please remember to check your work!



ANSWER SHEET


EXAM PAPER 2011

SCHOOL : ROSYTH
SUBJECT : PRIMARY 1 MATHEMATICS

TERM : SA2

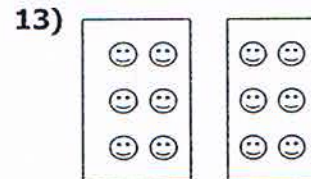
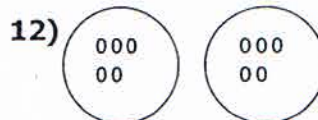
Q1	Q2	Q3	Q4	Q5
3	3	2	1	1

6)5, 3 7) $2+2+2+2+2+2=12$ 8) $4 \times 4 = 15$ 9)9 groups



There are 7 giraffes in each group

11) $6 \times 4 = 24$
 $1 \times 24 = 24$



There are 6 stickers 😊 on each phone.

14)10 15)18 16)3

17) $4 \times 9 = 36$
4 candle holders have 36 candles.

18) $4 \times 6 = 24$
They bought 24 colour pencils altogether.

19)He must buy 9 more sweets.

20)She pasted 4 stickers on each page of the album.