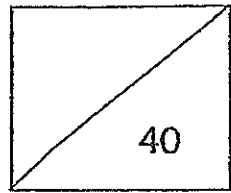



Parent's signature: _____
Date: _____



Anglo-Chinese School (Primary)
Holistic Assessment 2014
Primary 1
Review Test 2

Name: _____ () Date: _____
Class: P1() Duration: 1 hour

Addition & Subtraction within 100

Section A : Multiple-Choice Questions (7 marks)

Choose the correct answer for each question and write its number in the brackets provided.

1. $69 + 21 =$ _____

(1) 38

(2) 48

(3) 80

(4) 90

()

2. Which pair of numbers make 60?

(1) 18 and 22

(2) 22 and 28

(3) 18 and 32

(4) 22 and 38

()

3. $62 - 24 =$ _____

(1) 38

(2) 42

(3) 48

(4) 86

()

4. I am a number between 20 and 30. If you add 5 to me, the number will be 32. I am _____.

(1) 82

(2) 50

(3) 37

(4) 27

()

5. 5 less than 84 is _____.

(1) 89

(2) 81

(3) 79

(4) 34

()

6.

23	21	19	17		13	11	9
----	----	----	----	--	----	----	---

The missing number in the box is _____.

(1) 12

(2) 14

(3) 15

(4) 16

()

7 Mrs Goh had 26 doughnuts. She gave 7 doughnuts to her children. She has _____ doughnuts left.

(1) 19

(2) 21

(3) 29

(4) 33

()

Section B: Short Answer Questions (12 marks)

8 Circle the set with the smallest answer. (1m)

$$9 + 7$$

$$12 + 18$$

$$54 + 17$$

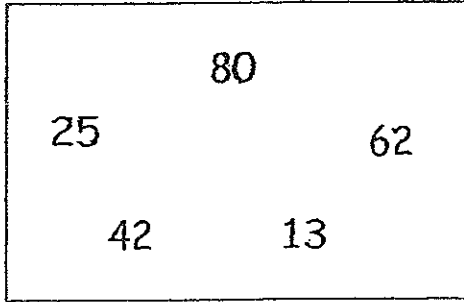
$$84 - 75$$

9. Use three of the numbers below to form an addition equation. (1m)

13, 52, 49, 62

$$\square + \square = \square$$

10. Look at the numbers in the box below.



(a) _____ and _____ add up to 87. (1m)

(b) The smallest number is _____. (1m)

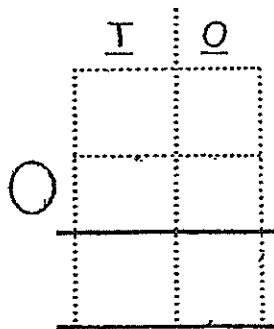
(c) The greatest number is _____. (1m)

(d) _____ is smaller than 62 but greater than 25. (1m)

11. Add the following set of numbers.

Show your working in the space provided. (1m)

Add 35 and 49.



12. Read the problem.
How would you solve the problem?
Tick (✓) the correct box. (1m)

Paul has 19 toy aeroplanes.
Samuel has 14 fewer toy aeroplanes.
How many aeroplanes does Samuel have?

Add

Subtract

13. Mrs Lee gave out 2 stars for every 10 correct answers for a Mathematics test. Alan had 30 questions correct in the test.
How many stars did Mrs Lee give Alan? (2m)

Number of correct answers obtained in the test	10		
Number of stars given by Mrs Lee	2		

Mrs Lee gave Alan _____ stars.

14. Joe has 3 shirts and 2 pairs of shorts.
How many different ways can he wear his clothes? (2m)


Shirt A




Shirt B



Shirt C



Shorts W



Shorts Z

Joe can wear his clothes in _____ ways.

Section C : Word Problems (6 marks)

Do the following story sums. Write your answers on the lines given.

15. Ahmad has 20 marbles.
Jane has 16 marbles.
How many more marbles does Ahmad have than Jane?(2m)

Ahmad has _____ more marbles than Jane.

16. Sulin had 18 stickers in an album.
She gave 8 stickers to her brother.
How many stickers does she have now?(2m)

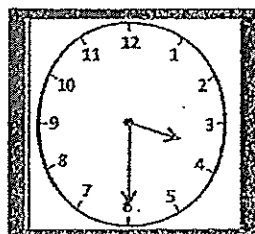

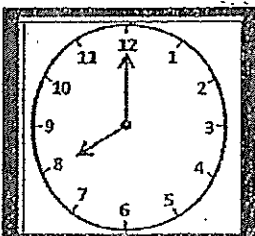
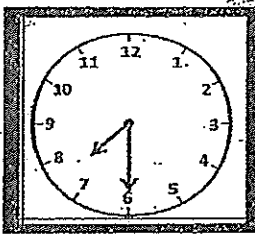

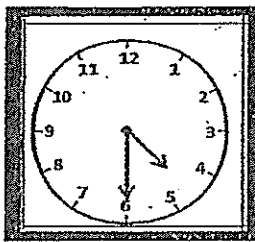
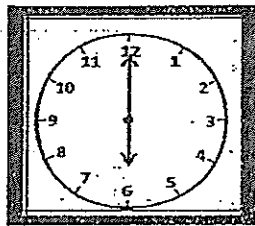

Sulin has _____ stickers now.

17. Lily bought 12 mangoes.
Gary bought 5 more mangoes than Lily.
How many mangoes did Gary buy?(2m)

Gary bought _____ mangoes.

3. The pictures below show what Paul did last Monday.
 Read the time next to each picture and order the pictures.
 Write 1st, 2nd, 3rd, 4th and 5th in each box. The first one has been
 done for you. (2m)

1st



Money

Section A : Multiple-Choice Questions (3 marks)

Choose the correct answer for each question and write its number in the brackets provided.

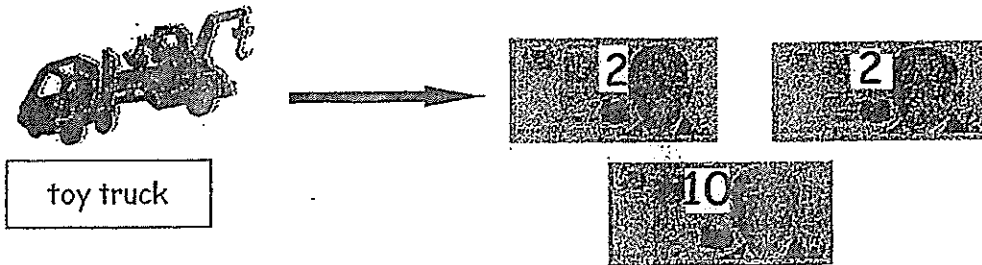
1. Tom has 5 twenty-cent coins in his wallet.
How much money does he have?



- (1) 20¢
(2) 60¢
(3) 90¢
(4) 100¢

()

2.

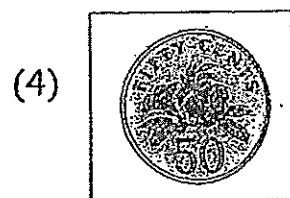
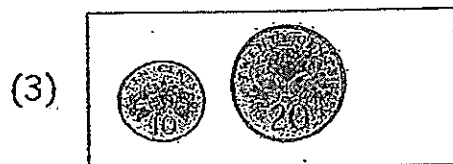
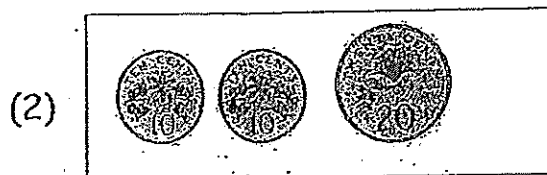
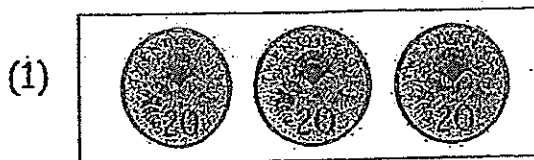


The toy truck costs _____.

- (1) \$2
(2) \$4
(3) \$10
(4) \$14

()

3. Which set of coins has the largest value?



()

Section B : Short Answer Questions (3 marks)

Fill in the blanks with the correct answers.

4. 1 fifty-cent coin = _____ ten-cent coins (1m)

5. 1 fifty-dollar note = 4 ten-dollar notes and _____ two-dollar notes (1m)

6. Siti has \$23.


Using all the money she has, which two things can she buy? (1m)



water bottle
\$8



storybook
\$10



calculator
\$15

She can buy a _____ and a _____.

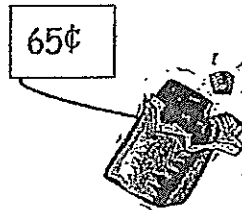
Section C : Word Problems (4 marks)

Do the following story sums. Write your answers on the lines given.

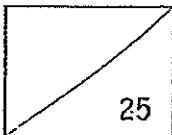
7. Daniel wants to buy a pair of school shoes that costs \$18.
He has \$5.
How much more money does he need? (2m)

He needs \$ _____ more.

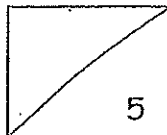
8. Devi has 20¢ left after paying for bar of chocolate.
How much money did she have at first? (2m)



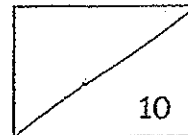
Devi had _____ ¢ at first.



Addition & Subtraction



Time



Money

End-of-Paper

Year: 2014

Level: P1

School: Anglo-Chinese School (Primary)

Subject: English

Semester: Review Test 2

Q1	Q2	Q3	Q4	Q5	Q6	Q7
4	4	1	4	3	3	1

Q8) 84-75

Q9) $49 + 13 = 62$

Q10a) 25 and 62 add up to 87

Q10b) 13

Q10c) 80

Q10d) 42

Q11)

T

O

3	5
4	9
8	4

+

Q12) Subtract

Q13)

10	20	30
2	4	6

Mrs Lee gave Alan 6 stars.

Q14) 6

Q15) $20 - 16 = 4$

Ahmad has 4 more marbles than Jane.

Q16) $18 - 8 = 10$

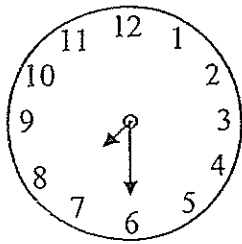
Sulin has 10 stickers now.

Q17) $12 + 5 = 17$

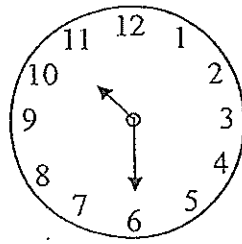
Gary bought 17 mangoes.

Q1) 4

Q2)



half past seven



half past ten

Q3) 1st

4th

2nd

5th

3rd

Q1	Q2	Q3
4	4	1

Q4) 5

Q5) 5

Q6) She can buy a water bottle and a calculator.

Q7) $18 - 5 = 13$

He needs \$13 more.

Q8) $65 + 20 = 85$

Devi had 85□ at first.

