



Maha Bodhi School
2006 Semestral Assessment 1
Mathematics

Name : _____

Class : Pr 1 _____

Duration : 1 h 30 min

Date : 9 May 2006

Parent's Signature : _____

Section A (80 marks)	
Section C (20 marks)	
Total (100 marks)	

Section A (80 marks)

Questions 1 to 40 carry 2 marks each.

1. Spell the number.

2	
8	

2. Circle the **smallest** number.

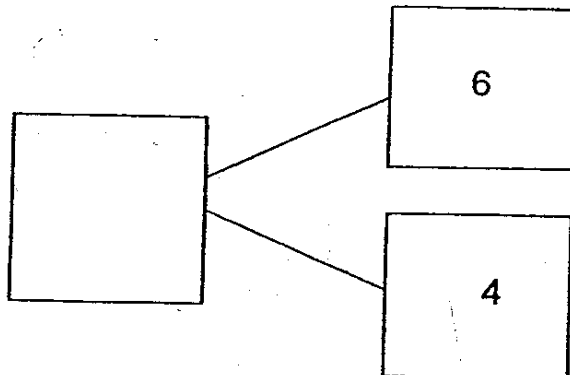
3

6


1

5

3. What is the missing number in the number bond below?

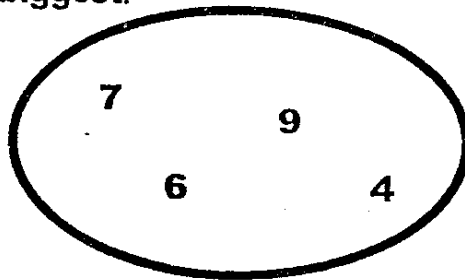


4.



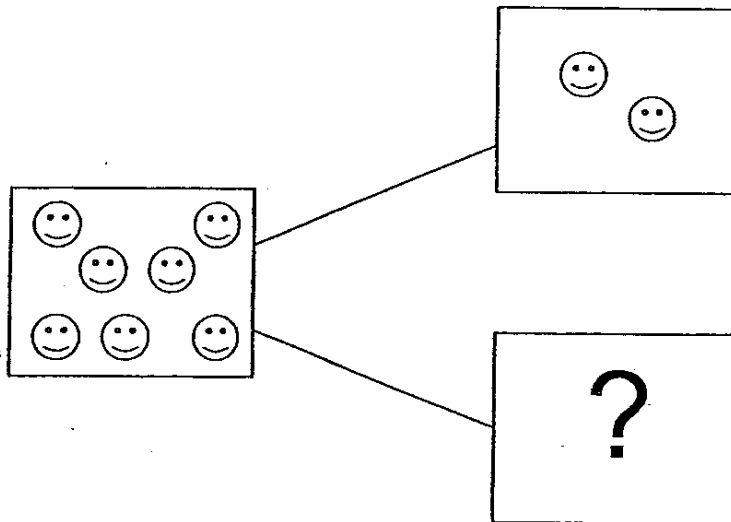
The nail is about _____ * long.

5. Arrange the numbers in order.
Begin with the **biggest**.



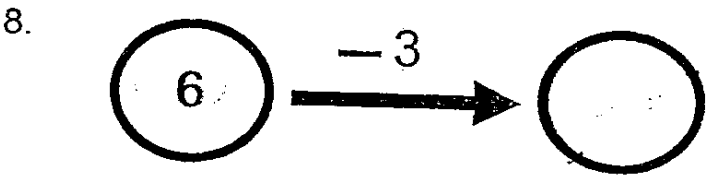
--	--	--	--

6.




The missing number in the number bond is _____.

7. $5 + 2 + 1 =$ _____

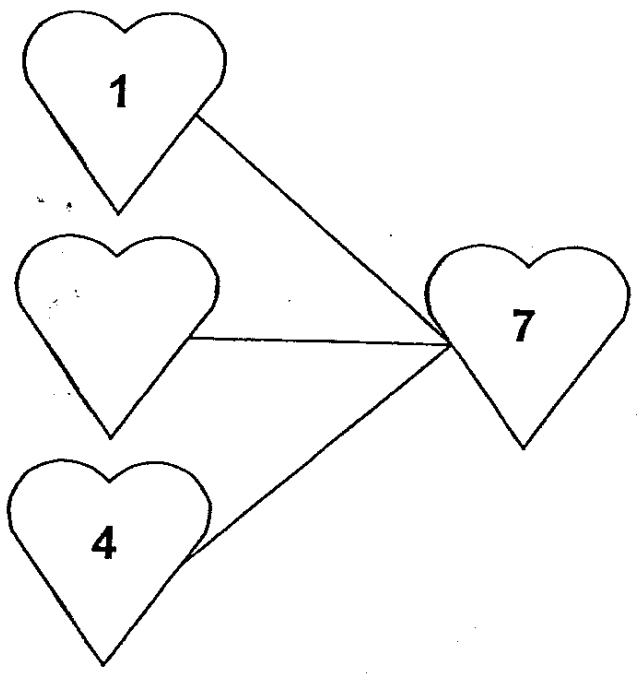


9. Cross (X) out the fourth cup from the left.




10. 37 is between 36 and _____.


11. Write the missing number in the number bond.



12. Mandy makes a pattern by using some coloured rectangles.



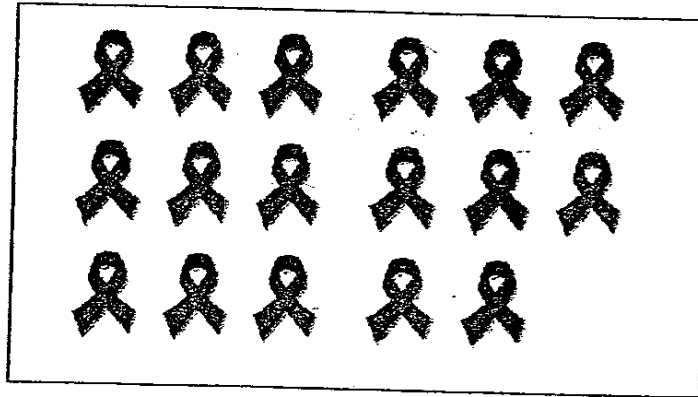
Circle one group of rectangles that Mandy uses to make the pattern above.



13. Write a number sentence using the following :

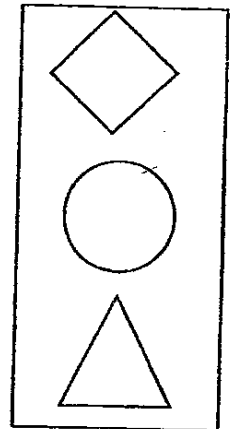
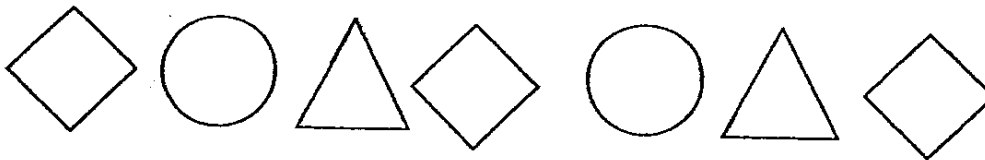
$\boxed{6} \quad \boxed{2} \quad \boxed{4} \quad \boxed{+} \quad \boxed{=}$

14. Count the number of ribbons and write down the answer in the box provided.


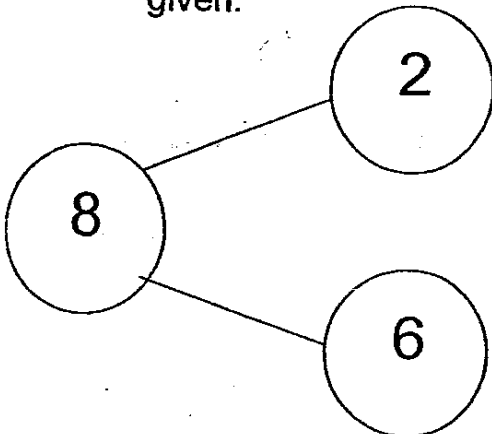


There are ribbons.

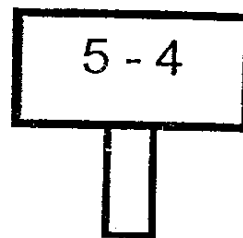
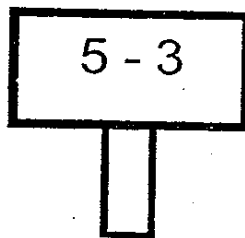
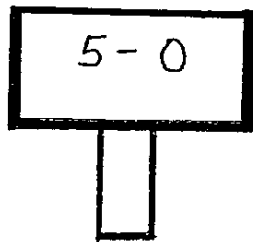
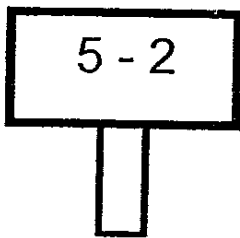
15. Study the pattern below and circle the correct shape in the box provided to complete the pattern.



16. Draw a line to divide the set into two parts to show the number bond given.

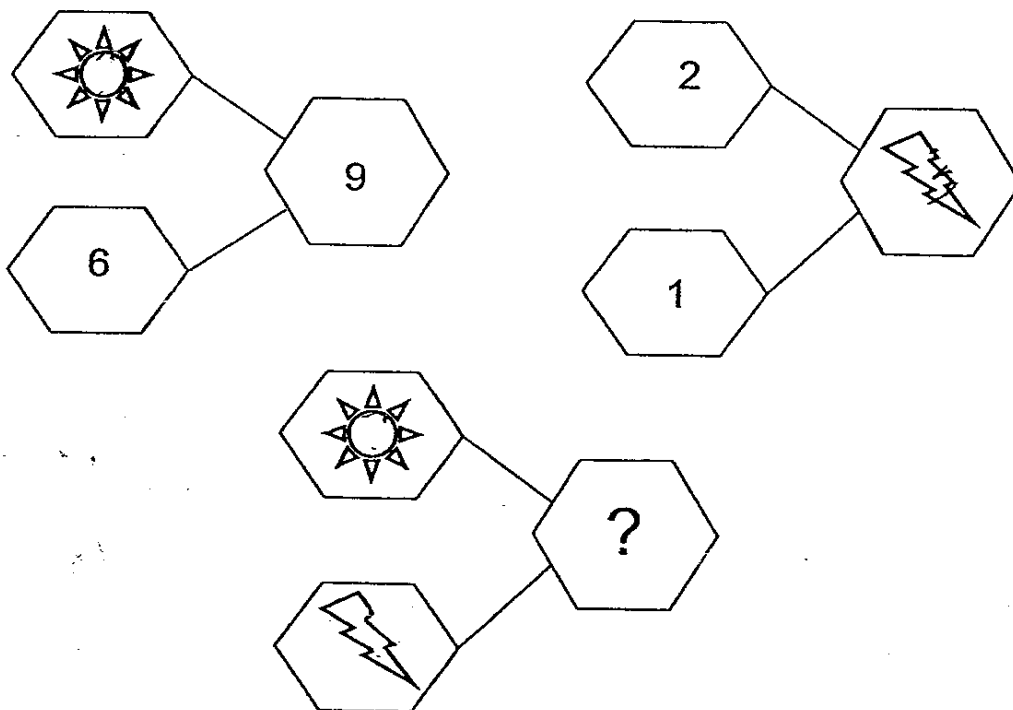


17. Colour the picture that gives the answer 5.



18. I am more than 3 but less than 5.
What number am I?
Write the number in the box provided.

19.



The missing number in the number bond is _____.

20. Colour the apple on the 5th plate.



21. $17 + 2 =$


22. Circle the biggest number in the set.

16	1 ten 10 ones	15	1 ten 2 ones
----	--------------------------	----	--------------

23. Circle the 3 numbers that make 20.

9	3	14
6	8	

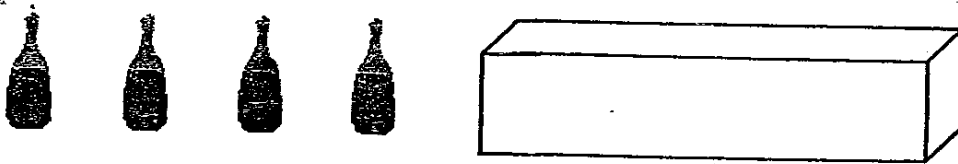
Look at the picture below. Answer questions 24 and 25.



24. There are _____ more rectangles than squares.

25. There are _____ circles and triangles altogether.

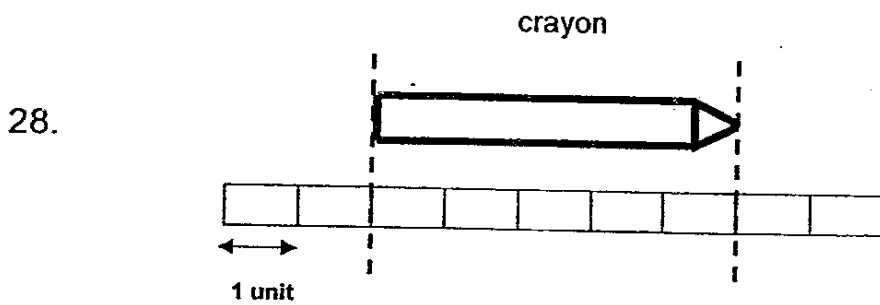
26. There are 3 bottles in the box.
How many bottles are there altogether?



There are _____ bottles altogether.

27.

$$\begin{array}{r}
 3 \square \\
 + \quad 4 \\
 \hline
 \square 5 \\
 \hline
 \end{array}$$



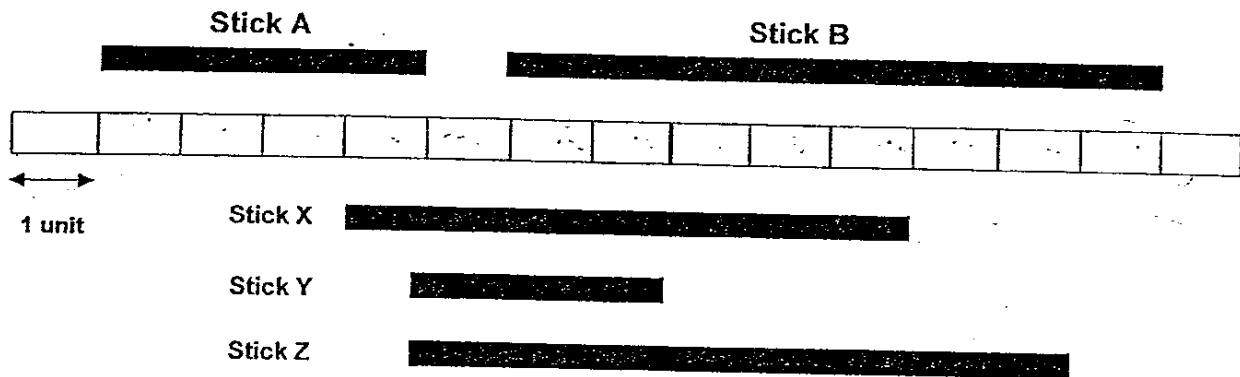
The crayon is about _____ units long.

29.

$$\triangle \triangle \triangle \triangle + \triangle \triangle \triangle \triangle \triangle = \text{thought bubble}$$

$$\text{thought bubble} = \underline{\hspace{2cm}} \triangle$$

30. Which stick is longer than A but shorter than B?



Stick _____ is longer than A but shorter than B.

31. 16 comes after _____

32. Janet added 26 to 16.
She then subtracted 12 from the answer.

The answer is

33. Tick the set that has fewer items.

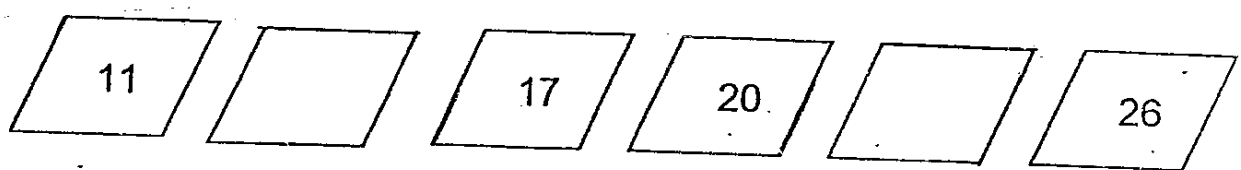
	A
	B

34. Bryan has 8 toy cars.
Dylan has 6 toy cars fewer than Bryan.
How many toy cars does Dylan have?



Dylan has _____ toy cars.

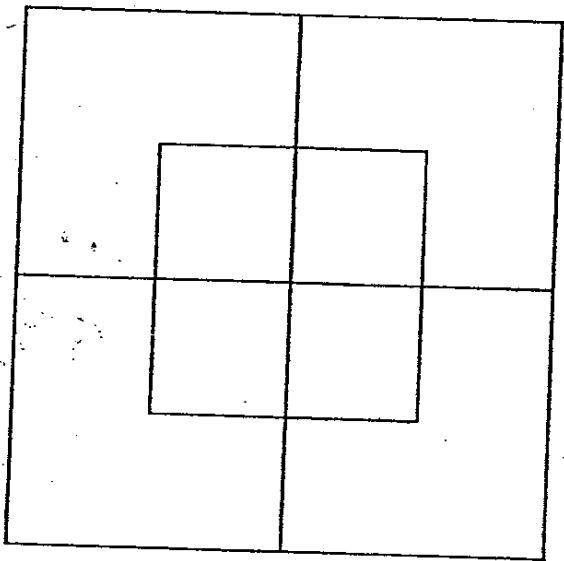
35. Fill in the missing numbers.



36. Mrs Chen is standing in a row with some children.
She is 3rd from the right and 5th from the left.
How many children are there in the row?

There are _____ children in the row.

37. Look at the figure below.



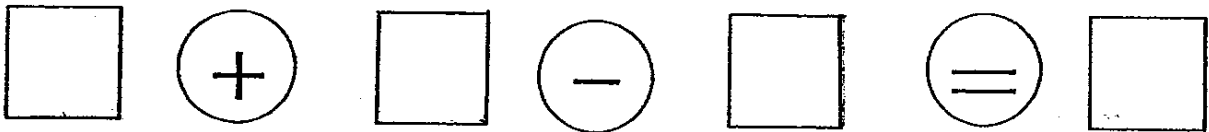
There are _____ squares in the figure.

38. Fill in the answer in the blank below.

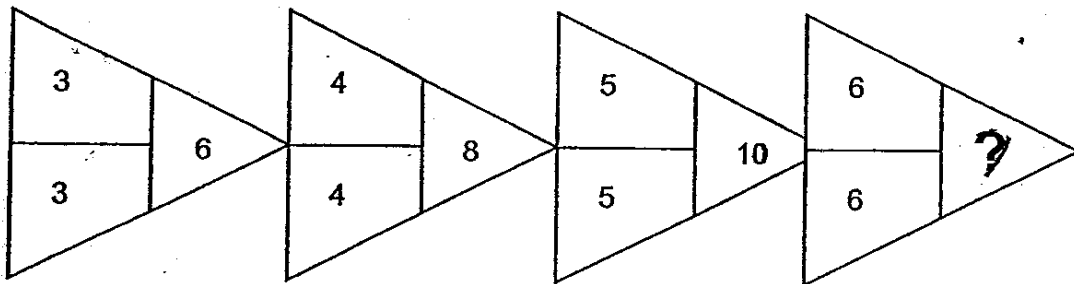
0 ten 14 ones	4 tens 4 ones
0 ten 4 ones	1 ten 14 ones

1 ten 4 ones is the same as _____

39. Fill in the numbers 10 5 25 20 correctly in the boxes provided.



40.



The answer is _____.

Section B (20 marks)

Questions 41 to 45 carry 4 marks each. Fill in the blanks and the statements carefully.

41. Mr Lin collects some stamps.

6 stamps have stars on them.

3 stamps have no stars on them.

How many stamps does he collect altogether?

$$\square \quad \bigcirc \quad \square = \square$$

He collects _____ stamps altogether.

42. Mother buys 7 cookies on Saturday.

Tim eats 3 cookies on Sunday.

How many cookies are left?



$$\square \quad \bigcirc \quad \square = \square$$

There are _____ cookies left.

43. There are 40 passengers on a train.
Some passengers got off the train at a train station.
There are 16 passengers left on the train.
How many passengers got off the train?



$$\square \ominus \square = \square$$

_____ passengers got off the train.

44. Sally has 14 dolls. She has 6 dolls fewer than May.
How many dolls does May have?

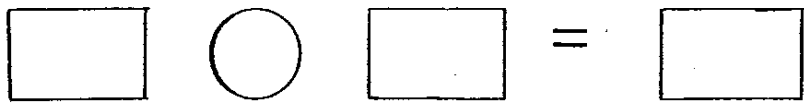


$$\square \ominus \square = \square$$

May has _____ dolls.

45. Jim has 21 stickers.
 Meiling has 6 stickers.
 Alex has 9 stickers fewer than Jim.

(a) How many stickers does Alex have?




Alex has _____ stickers.

Meiling?

more stickers does Alex have than

(b) How many stickers does Jim have than Alex?



Alex
 Jim has _____ more stickers than *Meiling* Alex.



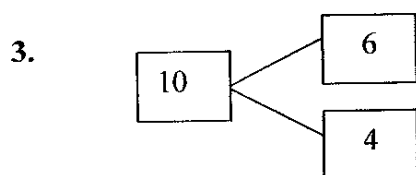
Remember to check your work!
 Every mark counts.

End of paper

Answer Sheets

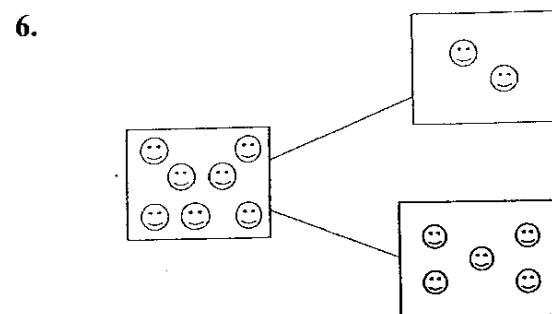
Maha Bodhi Pri 1 SAI / 2006 Mathematics

1. 2 = Two
8 = Eight



4. Snail = 13 *

5. 9, 7, 6, 4



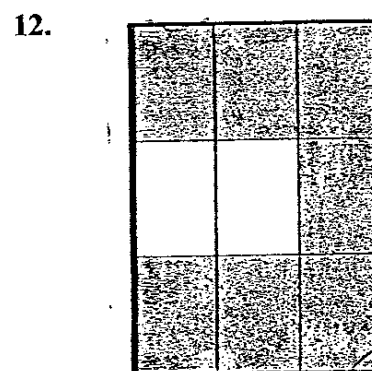
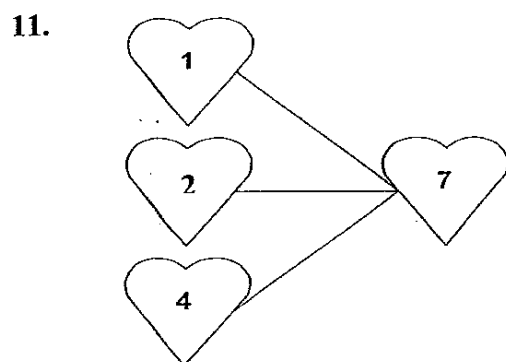
The missing number in the number bond is 5

7. $5 + 2 + 1 = \underline{8}$

8. $6 - 3 = \underline{3}$

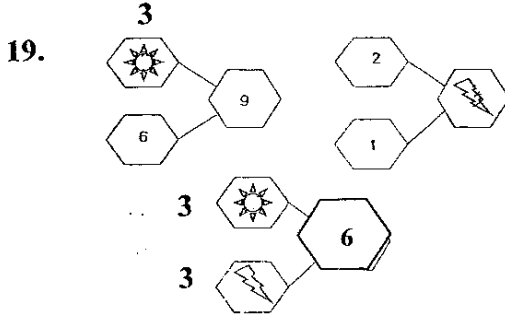
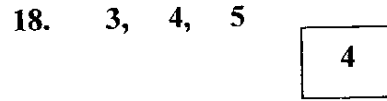
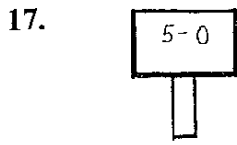
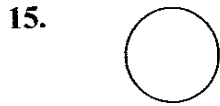


10. 36 37 38



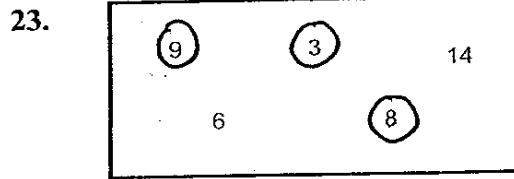
13. $2 + 4 = 6$

14. 17 ribbons



21. $17 + 2 = 19$

22. 1 ten 10 ones = 20




24. Rectangles = 4 Squares = 1
 $4 - 1 = 3$ more rectangles

25. Circles = 7 Triangles = 2
 $7 + 2 = 9$ altogether



26. $4 + 3 = 7$ bottles together

27. $31 + 4 = 35$

28. Crayon = 5 units long

29. $4 + 5 =$ 


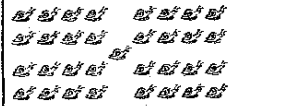
30. Stick A = 4
 Stick B = 8
 Stick X = 9

 = 9 

31. 15

32. $26 + 16 = 42$
 $42 - 12 = 30$

33.

	A <input checked="" type="checkbox"/>
	B <input type="checkbox"/>

34. $8 - 6 = 2$
Dylan has 2 toy cars

35.

11		17	20		25
14		23			

36. $5 + 3 = 8$
 $5 - 3 = 2$
 $8 - 2 = 6$
There are 6 children in the row

37. **10 squares**

38. $1 \text{ tens } 4 \text{ ones} = 10 + 4$
 $= 14$

39. $10 + 20 - 5 = 25$

40. $6 + 6 = 12$

41. $6 + 3 = 9$
He collects 9 stamps altogether.

42. $7 - 3 = 4$
There are 4 cookies left.

43. $40 - 16 = 24$
24 passengers got off the train.

44. $14 + 6 = 20$
May has 20 dolls.

45a. $21 - 9 = 12$
Alex has 12 stickers

45b. $12 - 6 = 6$
Alex has 6 more stickers than Meiling.