

Pei Chun Public School
Semestral Examination 1 – 2006
Mathematics
Primary One

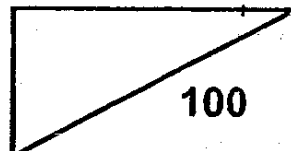
Name : _____ () Date : 5 May 2006

Class : Pri 1()

Parent's signature: _____

Time : 1 h 45 mins



Marks :



Maths Teacher : _____

Section A (38 x 2 marks)

Count and write the correct number in each box.

1.  <input data-bbox="630 1207 743 1314" type="text"/>	2.  <input data-bbox="1169 1207 1279 1314" type="text"/>
--	---


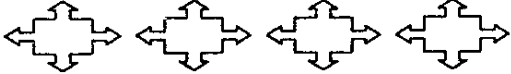
3. Write the number in words.

12 _____



4. Write in numbers.

twenty _____


5. Tick (✓) the set that has more.

6. Tick (✓) the set that has less.

7. Colour 9 triangles.


--

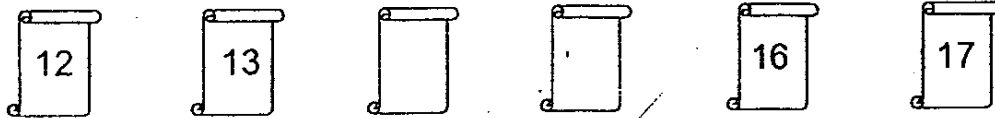
8. Arrange these numbers in order.
Begin with the greatest number.

	15
7	
	6
19	
	2

_____ greatest

2

9. Fill in the missing numbers.



10. Colour the two boxes that have the same answers.


$$15 - 9$$

$$7 + 12$$

$$13 - 7$$

$$11 + 6$$

11.

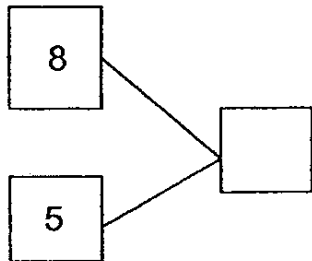


a) Ali must add _____ more stars to make 13 stars.

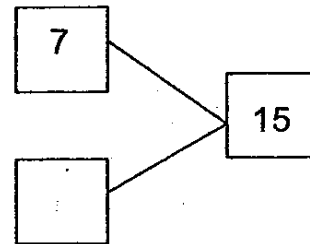
b) Draw the missing stars in the box.

Write the missing numbers in the boxes.

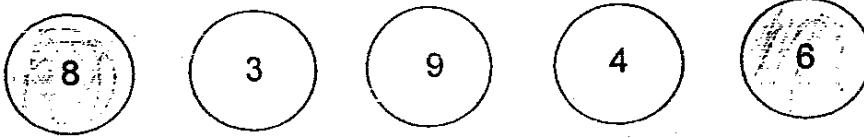
12.



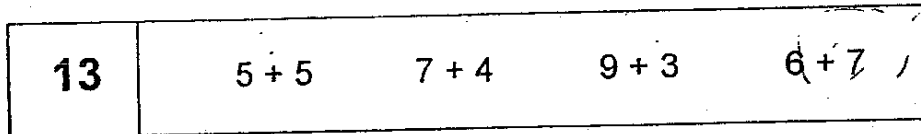
13.



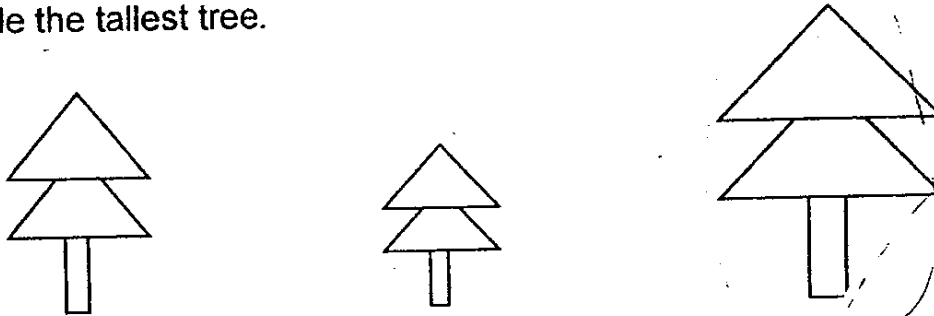
14. Colour the numbers that add up to 14.



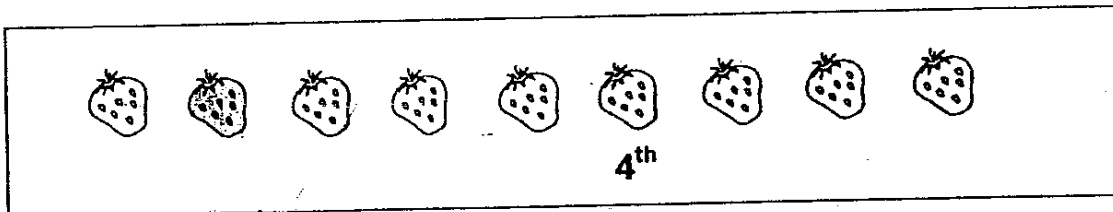
15. Circle the sum that matches the number on the left.




16. Circle the tallest tree.



17. Colour the 8th strawberry.



18. Colour the 6th mouse from the left.



Do these sums.

19. comes just after 19.




20. comes just before 18.

21. 10 is between and ~~12~~ ¹¹

22. 8 less than 11 is .

23. is 3 more than 16.


Look at the pictures and answer questions 24 & 25.

Set A	Set B	Set C
		

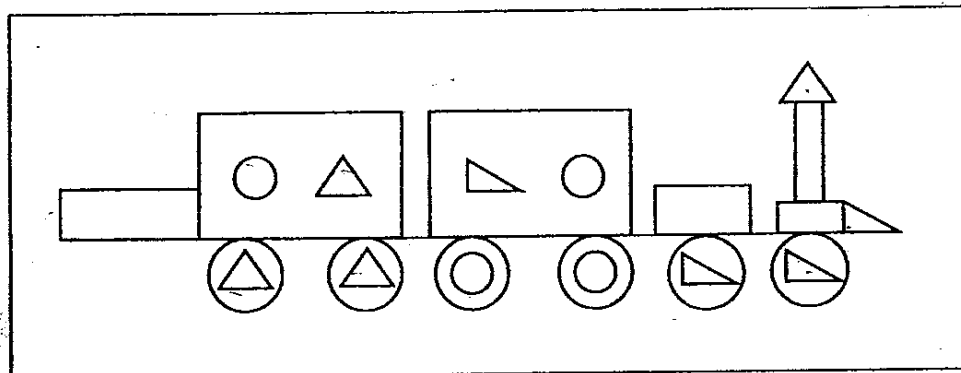
24. Set _____ has 2 fewer ants than Set C.

25. Set _____ has the least number of ants.

26. Write down the missing numbers.



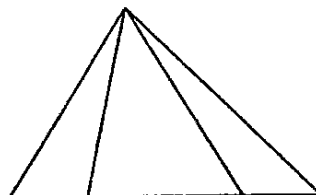
Look at the picture and answer questions 27 and 28.



27. There are _____ circles.


28. There are _____ more triangles than rectangles.

29. What is the greatest number of triangles below?



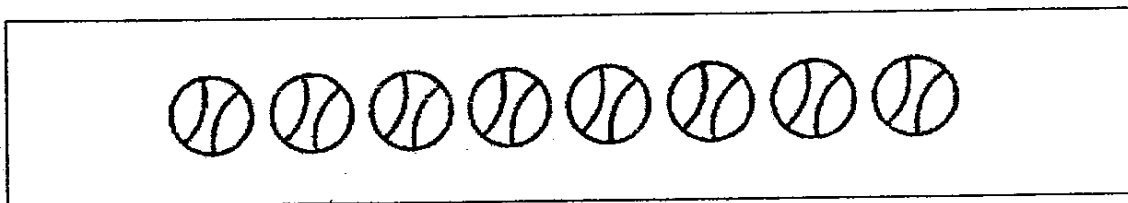
The answer is _____

Look at the picture and answer questions 30, 31 and 32.



30. Fish _____ is the shortest.
31. Fish _____ is longer than Fish B.
32. Fish _____ is as long as Fish _____.

Look at the picture below and answer question 33.



33. There are _____ marbles between the 2nd marble and the 5th marble.
34. Jack is waiting for the bus.
He is standing 4th from the left and 7th from the right in the queue.
How many people are there in the queue?

There are _____ people.

35. $\heartsuit + \heartsuit = 12$
 $\star - \heartsuit = 4$
 $\star = ?$

What number does \star stand for?

It stands for _____

36. Circle the sums that give the answer less than $2+7$.

$4 + 6$

$3 + 5$

$17 - 8$

$13 - 6$

37. After Ali gave Raju 2 stickers, they had 5 stickers each.
 How many stickers had Ali at first?

Ali had _____ stickers at first.

38. Circle the correct answer to complete the pattern.

Section B: (6 x 4 marks)

Work out the problem sums below. All working, statements and answers must be clearly shown.

39. Ali has 10 marbles.
His friend gives him 7 more.
How many marbles does he have now?



He has _____



40. Samy has 18 sweets.
He gives 5 of them to Devi.
How many sweets has he left?


He has _____.


41. Meimei bakes 19 cookies.
She eats 4 cookies and gives 6 of them to her sister.
How many cookies has she left?

She has _____

42. A red pencil is 6  long.
A blue pencil is 11  long.

- a) How many  longer is the blue pencil than the red pencil?
- b) How many  long are the pencils altogether?

a) The blue pencil is _____  longer.

b) The length of the 2 pencils is _____  long.

43. A stick is 6 \longleftrightarrow long.
A ribbon is 8 \longleftrightarrow longer.
What is the total length of the stick and the ribbon?

The total length is _____ \longleftrightarrow long.

44. Ben has 11 story books.
He has 4 more story books than Jill.
How many story books do they have altogether?

They have _____

End of Paper

Set by : Mdm Koh S I
Vetted by : P1 Maths Committee Teachers

Answer Sheets

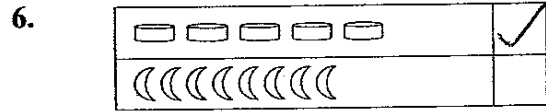
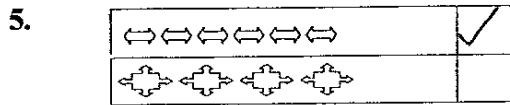
Pei Chun Pri 1 SA1 / 2006 Mathematics

1. 14

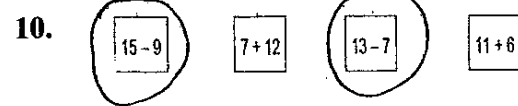
2. 18

3. twelve

4. 20



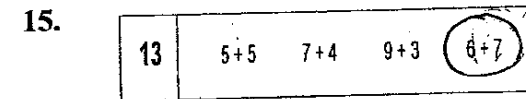
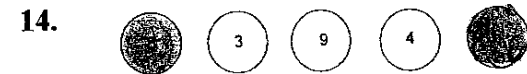
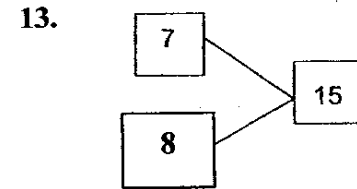
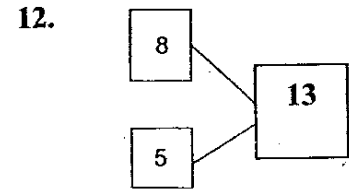



8. 19, 15, 7, 6, 2



14 15

11. $13 - 9 = 4$ stars



19. 20 comes just after 19.

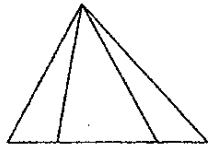
21. 17 comes just before 18.

23. $16 + 3 = \underline{19}$

25. Set A has the least number of ants.

27. Circles = 10

29.



6 triangles

31. Fish C is longer than Fish B

33. $5 - 2 - 1 = 2$

35. $6 - 4 = \underline{2}$

37. $5 + 2 = 7$ stickers

Ali had 7 stickers at first.

22. $11 - 8 = \underline{3}$

24. Set A = 9 ants
Set B = 10 ants
Set C = 12 ants
 $12 - 2 = 2$ ants
Set B has 2 fewer ants than Set C

26. 18, 15, 12, 9, ~~6~~, 3

28. Triangles = 8 Rectangles = 6
 $8 - 6 = \underline{2}$ more triangles

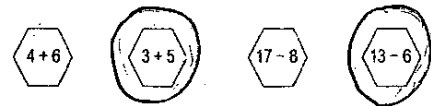
30. Fish A is the shortest.

32. Fish B is as long as Fish D

34. $7 - 4 = 3$




$3 + 7 = \underline{10}$ people

36.



38.



39. $10 + 7 = 17$
He had 17 marbles now.
40. $18 - 5 = 13$
He had 13 sweets left.
41. $19 - 4 - 6 = 9$
She had 9 cookies left.
- 42a. Blue = 11 Red = 6
 $11 - 6 = 5$
There are 5  longer blue pencils.
- 42b. $11 + 6 = 17$
There are 17  long pencils altogether.
43. $8 + 6 = 14$
 $14 + 6 = 20$
The total length is 20 
44. $11 + 4 = 15$
 $15 + 11 = 26$
They have 26 story books altogether