



RAFFLES GIRLS' PRIMARY SCHOOL
Primary One Mathematics 2018
Review Assessment 3- 2
Addition & Subtraction Within 40

Name: _____ () Pri 1 ()

Date: _____

Your score out of 20 marks	
Parent's Signature	

Section A: (4 x 1 mark)

Choose the correct answer and write its number in the brackets provided.

1. $3 + 6 + 7 =$ _____

(1) 9

(3) 16

(2) 13

(4) 17

()

2. $31 - 7 =$ _____

(1) 24

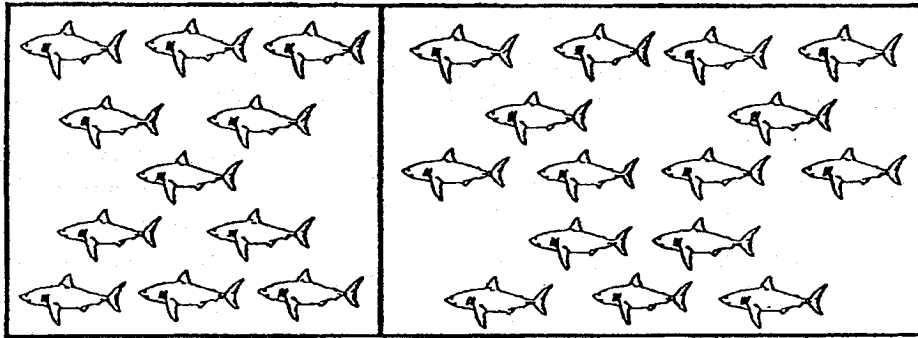
(3) 36

(2) 26

(4) 38

()


3. Which is the correct addition equation for the picture below?



- (1) $10 + 14 = 24$ (3) $11 + 15 = 26$
 (2) $10 + 15 = 25$ (4) $11 + 16 = 27$

()

4. Which is the correct subtraction equation for the picture below?



- (1) $31 - 12 = 19$ (3) $30 - 13 = 17$
 (2) $30 - 12 = 18$ (4) $31 - 13 = 18$

()

Section B: (3 x 2 marks)

Work out these questions carefully and write the answers in the blanks provided.

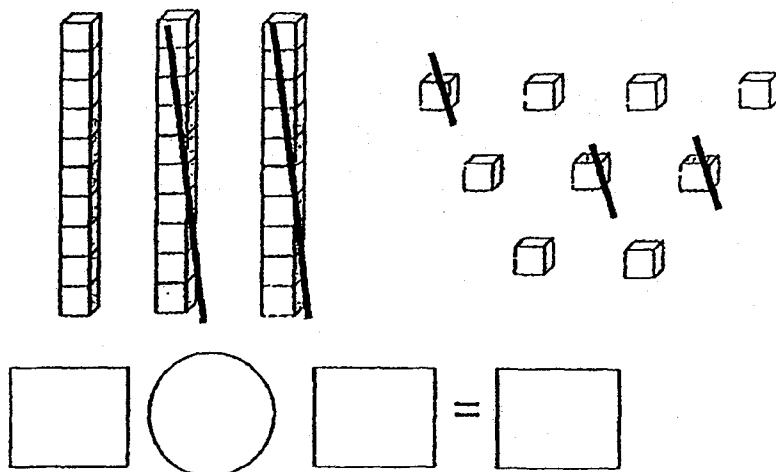
5a.

$$\begin{array}{r} 39 \\ + 1 \\ \hline \\ \hline \end{array}$$

5b.

$$\begin{array}{r} 16 \\ + 18 \\ \hline \\ \hline \end{array}$$

6. Write a related subtraction equation based on the picture below.



7a.

$$\begin{array}{r} 40 \\ - 7 \\ \hline \\ \hline \end{array}$$

7b.

$$\begin{array}{r} 37 \\ - 18 \\ \hline \\ \hline \end{array}$$

Section C: (10 marks)

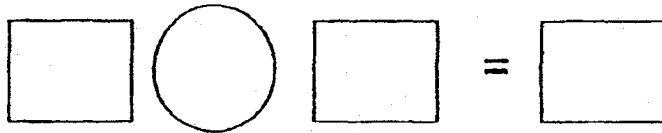
Read the questions carefully. Show all number equations and working clearly in the spaces provided.

8. Farmer Brown collected 11 eggs on Monday. He collected 6 eggs on Tuesday. How many eggs did he collect on both days? (2 marks)

$$\square \bigcirc \square = \square$$

He collected _____ eggs on both days.

9. Mr Koh bought 19 apples. Mrs Chan bought 5 fewer apples than Mr Koh. How many apples did Mrs Chan buy? (2marks)




Mrs Chan bought _____ apples.

10. The children's Math test scores are shown below. (3 marks)

Name	Marks
Peter	20
Ravi	13
Amin	8
Tom	17

- a) Who scores the highest marks? _____
- b) How many more marks does Peter score than Ravi? _____
- c) How many fewer marks does Amin score than Tom? _____

11. There are 3 friends, Lynn, Cindy and Kyra.
(3 marks)



- a) How many stickers does Lynn have? _____
- b) How many more stickers does Kyra have than Cindy? _____
- c) Which two children have 24 stickers altogether? _____
and

-----The End-----

EXAM PAPER 2018 (P1)

SCHOOL : RGS

SUBJECT : MATHEMATICS

TERM : Review Assessment 3-2

Q1	Q2	Q3	Q4
3	1	3	4

Q5) a) 40

b) 34

Q6) $39 - 13 = 16$

Q7) a) 33

b) 19

Q8) $11 + 6 = 17$

Q9) $19 - 5 = 14$

Q10) a) Peter

b) 7

c) 9

Q11) a) 18

b) 16

c) Lynn and Cindy