


9

	<p>RAFFLES GIRLS' PRIMARY SCHOOL</p> <p>Primary One Mathematics 2018</p> <p>Review Assessment 4-2</p> <p>Numbers to 100,</p> <p>Addition Within 100 and Subtraction within 100</p>
---	---

Name: _____ () Pr 1 ()
 Date: _____

Your score out of 30 marks	
Parent's Signature	

SECTION A (6 × 1 mark)

For each question, four options are given. Choose the correct answer and write its number (1, 2, 3 or 4) in the brackets provided.

1. _____ is 10 more than 56.

- (1) 46
- (2) 57
- (3) 60
- (4) 66

()

2. 8 tens 4 ones = _____

- (1) 84
- (2) 48
- (3) 12
- (4) 4

()

3. Choose the correct addition equation for the picture below.



(1) $12 + 50 = 62$

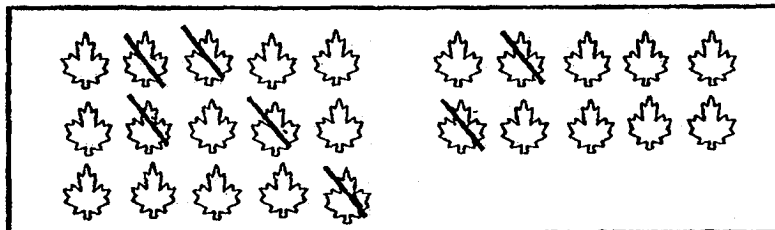
(2) $22 + 50 = 72$

(3) $50 + 20 = 70$

(4) $52 + 20 = 72$

()

4. Choose the correct subtraction equation for the picture below.



(1) $18 - 11 = 7$

(2) $18 - 7 = 11$

(3) $30 - 18 = 12$

(4) $25 - 7 = 18$

()

5. $15 + 33 =$ _____

(1) 18

(2) 38

(3) 45

(4) 48

()

6. $54 - 23 =$ _____

(1) 31

(2) 37

(3) 71

(4) 77

()

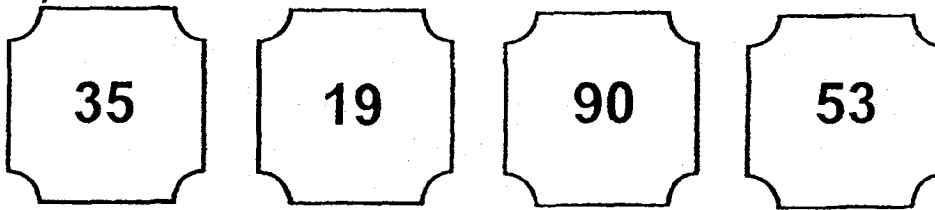
SECTION B (8 × 2 marks)

Read the questions carefully. Write the correct answers in the spaces provided

7a. Write the number 49 in words.

7b. Write the number 100 in words.

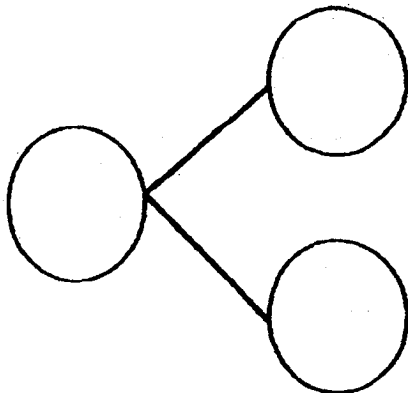
8. Arrange the numbers in order.
Begin with the greatest.



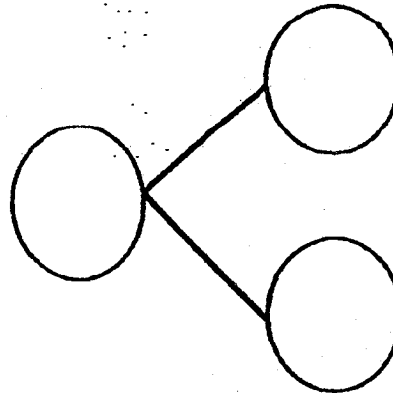
greatest

9. Complete the number bonds. Use all the numbers given.


a) 37 43 6



b) 82 25 57



10. Write two addition equations with the given numbers only.



$$\square \bigcirc \square = \square$$

$$\square \bigcirc \square = \square$$

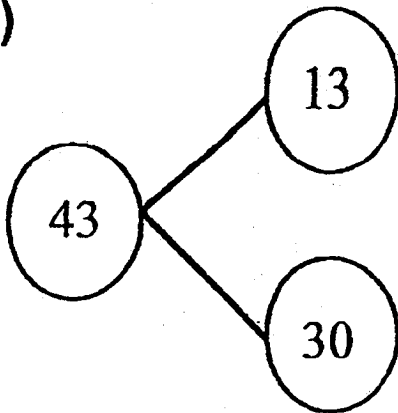
11. Add.

$$\begin{array}{r} \text{a) } 32 \\ + 49 \\ \hline \\ \hline \end{array}$$

$$\begin{array}{r} \text{b) } 18 \\ + 82 \\ \hline \\ \hline \end{array}$$

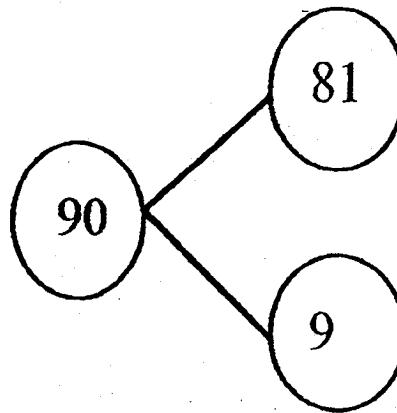
12. Write a subtraction equation based on the number bond given.

a)



$$\square \bigcirc \square = \square$$

b)



$$\square \bigcirc \square = \square$$

13. Subtract.

a)
$$\begin{array}{r} 93 \\ - 27 \\ \hline \end{array}$$

$$\underline{\hspace{2cm}}$$

$$\underline{\hspace{2cm}}$$

b)
$$\begin{array}{r} 50 \\ - 46 \\ \hline \end{array}$$

$$\underline{\hspace{2cm}}$$

$$\underline{\hspace{2cm}}$$

14. Complete the following number pattern.

98, 94, _____, 86, 82, _____, 74, 70, 66

SECTION C (4 x 2 marks)

Read the questions carefully.

Show all your equations and workings clearly for questions 15 to 18.

15. Joan has 50 books.
Jane has 15 books.
How many books do they have altogether?

Workings

They have _____ books altogether.

16. At a fruit stall, there are 65 apples.
There are 25 fewer watermelons than apples.
How many watermelons are there?

Workings

There are _____ watermelons.

17. Jill baked 40 cookies.
She baked 10 muffins.
How many fewer muffins than cookies did Jill bake?

Workings

She baked _____ fewer muffins than cookies.

18. Ms Tan has 80 books.
She has 20 fewer books than Mr Wong.
How many books does Mr Wong have?

Workings

Mr Wong has _____ books.

EXAM PAPER 2018 (P1)

SCHOOL : RGS

SUBJECT : MATHEMATICS

TERM : Review Assessment 4-2

Q1	Q2	Q3	Q4	Q5	Q6
4	1	2	4	4	1

Q7) a) forty-nine

b) one hundred

Q8) 90 , 53 , 35 , 19

Q9) a) $43 = 37 , 6$

b) $82 = 25 , 57$

Q10) $16 + 60 = 76$

$60 + 16 = 76$

Q11) a) 81

b) 100

Q12) a) $43 - 13 = 30$

b) $90 - 81 = 9$

Q13) a) 66

b) 4

Q14) 90 , 78

Q15) $50 + 15 = 65$

Q16) $65 - 25 = 40$

Q17) $40 - 10 = 30$

Q18) $80 + 20 = 100$