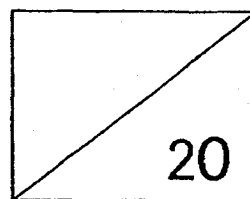


Red Swastika School
Primary 1
Milestone Check 4
Mathematics



Name: _____ () Date: _____



Class: 1 _____

Duration: 30 minutes

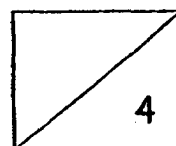

Read the questions carefully.

Fill in the blanks with the correct answers. (2 marks each)


1. Circle the longer pencil.



2. Draw a shorter tree.

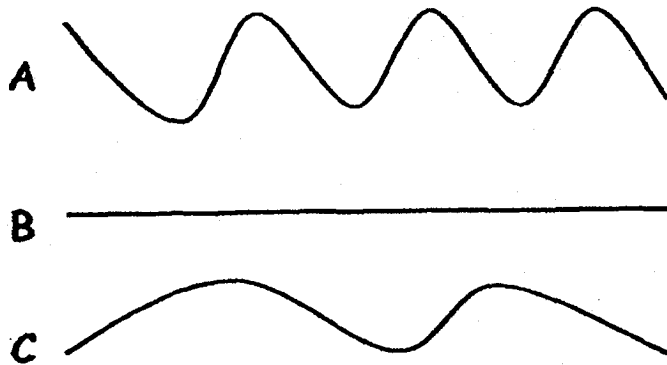


Look at the picture. Fill in the blanks with the correct letters.



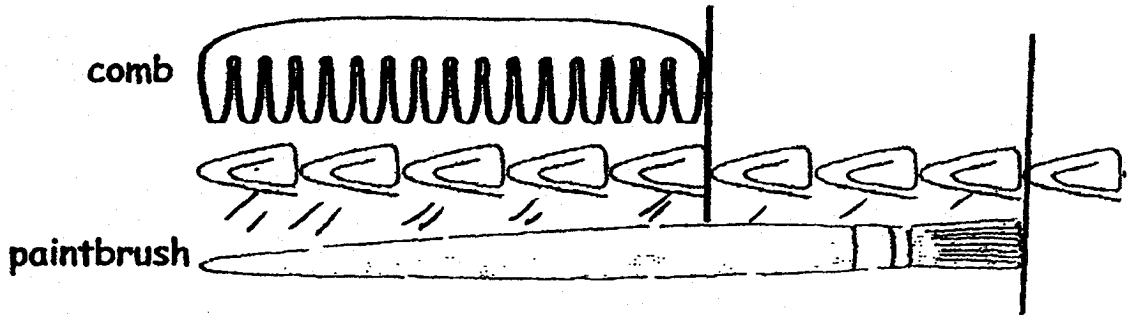
3. Toy _____ is the tallest.

4. Toy A is taller than Toy _____ but shorter than Toy _____.

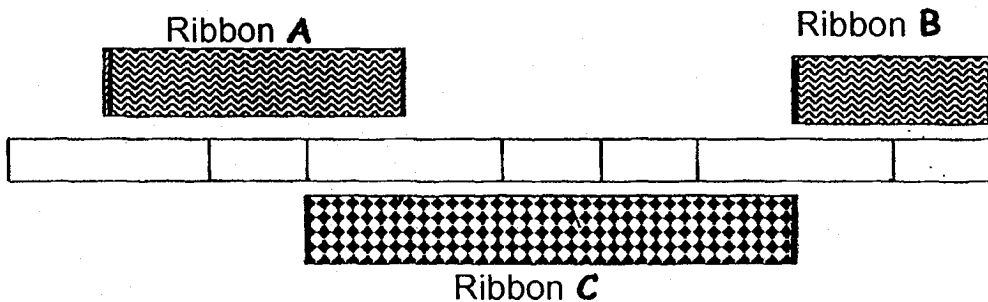


5. String _____ is the shortest.

6. String _____ is the longest.



7. The comb is _____ paperclips long.
8. The paintbrush is _____ paperclips longer than the comb.



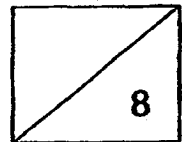
stands for 1 unit.

9. Ribbon C _____ longer than Ribbon A.
10. The total length of Ribbon B and Ribbon C is _____ units.



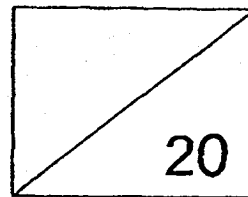
END OF PAPER

Have you checked your work?





Red Swastika School
Primary 1
Milestone Check 5
Mathematics



Name: _____ () Date: _____

Class: 1

Duration: 30 minutes

Fill in the blanks with the correct answers. (2 marks each)

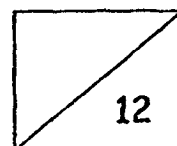
1. The number that comes between 29 and 31 is _____.
2. The number that comes just after 36 is _____.
3. (a) Write 'twenty-seven' in numerals. _____
(b) Write '40' in words. _____
4. 6 more than 19 is _____.
5. 4 less than 36 is _____.

6.

18	37	23	31	29
----	----	----	----	----

Arrange the numbers above in order, beginning with the smallest.

_____ smallest _____ greatest _____



7. 26 = _____ tens _____ ones

8. 2 tens 13 ones = _____

Complete the number patterns.

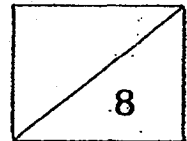
9. 12, _____, 16, 18, _____, 22

10. _____, 27, 30, _____, 36, 39



END OF PAPER

Have you checked your work?



SCHOOL : RED SWASTIKA PRIMARY SCHOOL

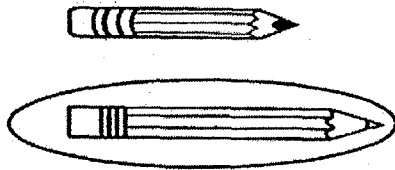
LEVEL : PRIMARY 1

SUBJECT : MATH


TERM : 2019 MILESTONE CHECK (4 & 5)

MILESTONE CHECK (4)

Q1)



Q2)



Q3)B

Q4) C, B

Q5) B

Q6) A

Q7) 5

Q8) 3

Q9) 2

Q10) 7

MILESTONE CHECK (5)

Q1) 30

Q2) 37

Q3) A) 27

B) FORTY

Q4) 25

Q5) 32

Q6) 18, 23, 29, 31, 37

Q7) 2, 6

Q8) 33

Q9) 12, 14, 16, 18, 20, 22

Q10) 24, 27, 30, 33, 36, 39