

Tao Nan School  
Primary Two Mathematics Practice Paper

Name : \_\_\_\_\_ (    ) Duration : 1 h 30 min

Class : P2 (    ) Date : 21 August

Parent's signature \_\_\_\_\_ Marks :  /100

---

Section A ( 20 x 2 marks )

Choose the correct answer and write its number in the brackets.

1. Which number stands for 7 hundreds and 7 ones ?

- (1) 77
- (2) 707
- (3) 770
- (4) 777

(    )

2.  $90 = 8$  tens and \_\_\_\_\_ ones

- (1) 1
- (2) 9
- (3) 10
- (4) 90

(    )

3. The smallest number that can be formed with the digits 5, 4 and 8 is \_\_\_\_\_.

- (1) 584
- (2) 548
- (3) 458
- (4) 485

(    )

4. 38 and \_\_\_\_\_ make 100.

- (1) 62
- (2) 72
- (3) 78
- (4) 138

( )

5. \_\_\_\_\_ is 10 more than 297.

- (1) 287
- (2) 307
- (3) 317
- (4) 398

( )

6. The difference between 888 and 99 is \_\_\_\_\_.

- (1) 789
- (2) 798
- (3) 899
- (4) 987

( )

7. The sum of 230 and \_\_\_\_\_ is 610.

- (1) 940
- (2) 420
- (3) 380
- (4) 180

( )

8. Which of the following is correct ?

(1)  $570 = 50 + 70$

(2)  $570 = 57 + 0$

(3)  $570 = 500 + 7$

(4)  $570 = 500 + 70$

( )

9. Which of the following numbers can be added to 300 to make it 550 ?

(1) 25 tens

(2) 52 tens

(3) 58 tens

(4) 85 tens

( )

10. 3 fours is the same as \_\_\_\_\_.

(1)  $3 + 3 + 3$

(2)  $4 + 4 + 4$

(3)  $3 + 3 + 3 + 3$

(4)  $4 + 4 + 4 + 4$

( )

11.  $10 \times 4 = 5 \times$  \_\_\_\_\_

(1) 6

(2) 7

(3) 8

(4) 9

( )

12. There are 2 mooncakes in a box. How many mooncakes are there in 5 boxes?

- (1) 14
- (2) 10
- (3) 7
- (4) 3

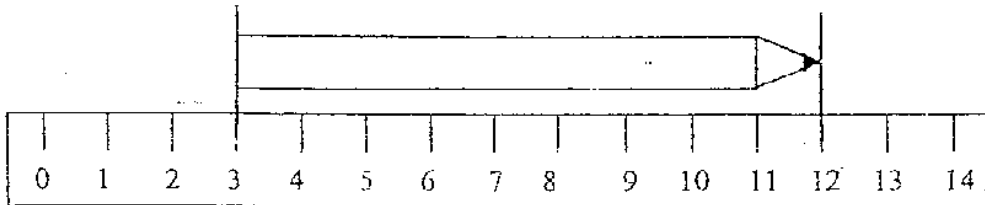
(      )

13. Jim saved 2 hundred-dollar notes and 7 ten-dollar notes. How much savings did he have?

- (1) \$90
- (2) \$207
- (3) \$270
- (4) \$900

(      )

14. The length of the pencil is \_\_\_\_\_ cm long.



- (1) 13
- (2) 9
- (3) 6
- (4) 4

(      )

15. A bamboo pole is 16 m long. It is cut into 2 equal parts.  
What is the length of each part ?

- (1) 9 m
- (2) 8 m
- (3) 14 m
- (4) 18 m

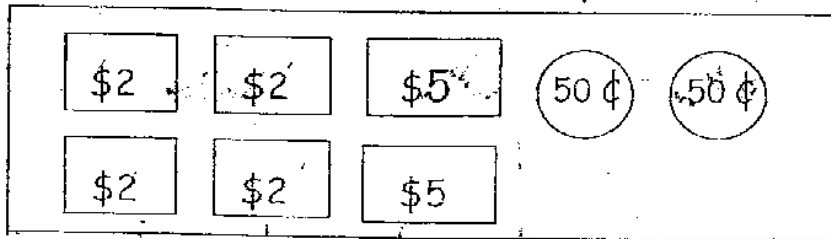
( )

16. Mrs Rosnah had a piece of cloth 25 m long. She used 3 m to sew a skirt for her daughter and 8 m to sew a dress for herself.  
How much cloth had she left ?

- (1) 14 m
- (2) 17 m
- (3) 22 m
- (4) 36 m

( )

17. What is the total amount of money in the box?



- (1) \$12
- (2) \$15
- (3) \$18
- (4) \$19


( )

18. The mass of a packet of sugar is 3 kg. The mass of 6 such packets of sugar is \_\_\_\_\_ kg.

- (1) 18
- (2) 9
- (3) 6
- (4) 3

( )


19. The mass of Box B is \_\_\_\_\_ g.



- (1) 5
- (2) 6
- (3) 3
- (4) 7

( )

20.



Each shirt needs 3 buttons. I need to buy \_\_\_\_\_ more Buttons for the remaining 3 shirts ?

- (1) 16
- (2) 12
- (3) 9
- (4) 3

( )

Section B ( 20 x 2 marks )

Fill in the blanks with the correct answers.

21. Write in words.

849

---

22.  $364 + 29 =$   tens 3 ones.

23.  $6 \times 10 =$   + 15

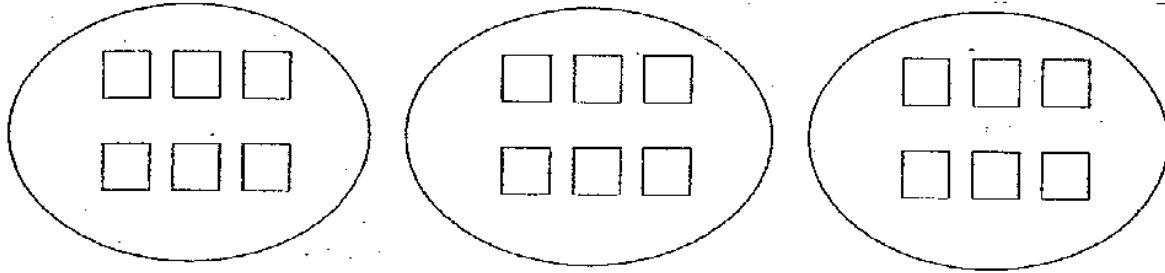
24. 2 boys and 3 girls share the cost of a present equally. If each of them paid \$5, how much did the present cost ?

\$

25. Fill in the boxes with the correct answer.



26. Complete the multiplication sentence.



$$3 \times \underline{\hspace{2cm}} = \underline{\hspace{2cm}}$$

$$\underline{\hspace{2cm}} \div 3 = \underline{\hspace{2cm}}$$

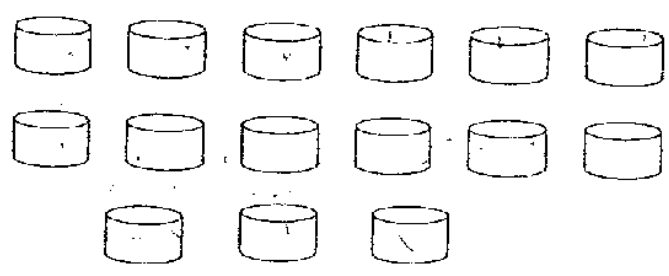
27.

$$4 \times \text{star} = 16$$

$$\text{star} \times \text{oval} = 20$$


○ stands for the number \_\_\_\_\_

28. Ring the following containers into 3 equal groups.



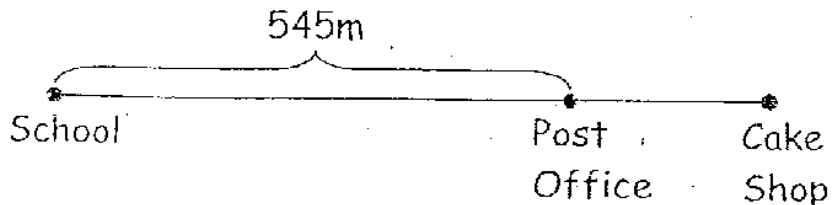


29. Draw 4 groups of 6 apples.



30. When 5 tens is added to the difference between 125 and 75,  
the answer is





31.



The school is 750 m away from the cake shop. How far is the post office from the cake shop?

It is  m.

32.

			
pen \$1.10	brush 90 ¢	book \$1.40	pencil 70 ¢

I spent \$2.50 at a book shop.

I bought a \_\_\_\_\_ and a \_\_\_\_\_.

Study the table below and answer Questions 33 to 35.

Food Item	Mass
1 can of soup	500g
1 bar of chocolate	150g
1 tin of potato chips	200g

33. The mass of the bar of chocolate and tin of potato chips is

g
---

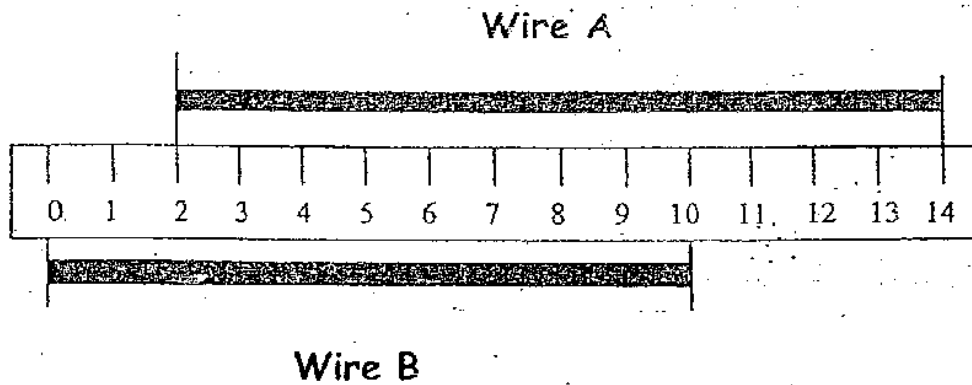
34. The bar of chocolate is lighter than the can of soup by

g
---

35. The total mass of the 3 food items shown in the table is

g
---

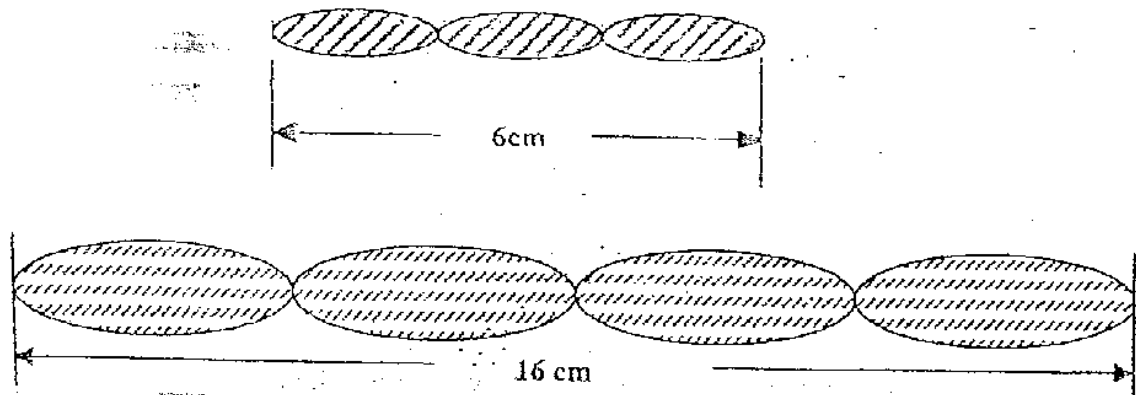
Study the picture carefully and answer questions 36 and 37.



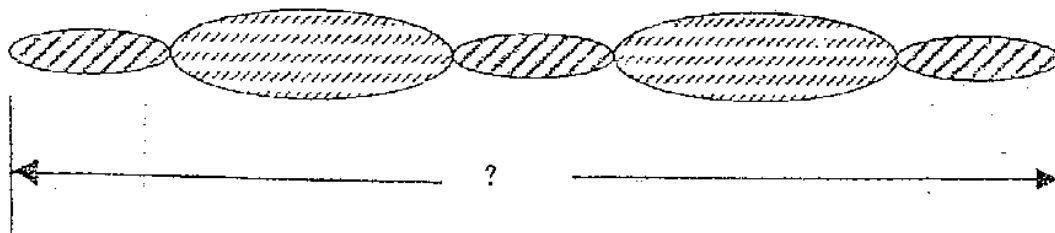
36. Wire B is  cm.

37. Wire A is  cm longer than wire B.

Study the pictures carefully and answer question 38.




38. What is the length of this string of beads?



It is  cm


For questions 39 and 40, complete the models by filling in the correct numbers in the brackets provided.

39. Mrs Devi had 245 mangoes at first. She sold 199 mangoes this morning. How many mangoes had she left ?



She had \_\_\_\_\_ mangoes left.

40. A baker wanted to bake some cakes. He had 500 eggs. He needed another 142 eggs. How many eggs were needed altogether to bake the cakes ?



He needed \_\_\_\_\_ eggs to bake the cakes.

Section C ( 5 x 4 marks )

Read the story sums carefully. Show all number and word statements.  
You must show your working clearly.

41. Mrs Foo bought a sweater for \$ 16 and a wallet for \$ 7.  
She paid the cashier \$30. How much change should she get ?

- 
42. Lina and her two friends share 18 stickers. How many stickers  
does each person get ?

43. A box with 5 packets of sugar has a mass of 13 kg. The box has a mass of 3 kg. Each packet of sugar has the same mass. What is the mass of one packet of sugar ?

- 
44. The fence at Ricky's house is 646 m long. Ricky painted 278 m of the fence. How much more of the fence does he have to paint ?

45. There are 4 baskets on the table. In each basket, there are 3 red balls, 2 yellow balls and 4 green balls.

(a) How many balls are there altogether in each basket ?



---

(b) How many balls are there altogether in the 4 baskets ?



---

*Have you checked your answers ?*

END-OF-PAPER

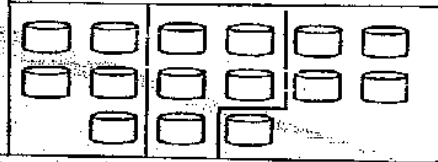


# ANSWER SHEET

TAO NAN PRIMARY SCHOOL - PRIMARY 2 MATHEMATICS 2007  
CONTINUAL ASSESSMENT (2)

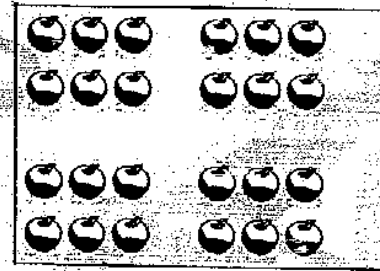
1. 2  
2. 3  
3. 3  
4. 1

28)



5. 2  
6. 1  
7. 3  
8. 4  
9. 1

29)



10. 2  
11. 3  
12. 2  
13. 3  
14. 2  
15. 2  
16. 1  
17. 4  
18. 1  
19. 4  
20. 3

30) 100

31) 205m

32) pen, book

33) 350g

34) 350g

35) 850g

36) 10cm

37) 2cm

38) 14cm

21. Eight hundred and forty-nine

22. 39

23. 45

24. \$25

25. 110, 100

26.  $3 \times 6 = 18$

$18 \div 3 = 6$

27.  $4 \times 4 = 16$

$4 \times 5 = 20$

○ Is = 5

39)  $\boxed{199} \quad \boxed{46}$

$\leftarrow 245$

She had 46 mangoes left.

40)  $\boxed{500} \quad \boxed{142}$

$\leftarrow 642$

He needed 642 eggs to bake the cake.

41)  $16 + 7 = 23$

$30 - 23 = 7$

She should get \$7 change.

42)  $18 \div 3 = 6$

18 divide 3 = 6

Each person got 6 stickers.

43)  $13 - 3 = 10$

13 - 3 = 10

$10 \div 5 = 2$

10 divide 5 = 2

The mass of one packet of sugar is 2 kg.

44)  $646 - 278 = 368$

646 - 278 = 368

He has to paint 368m more.

45) a)  $3 + 2 = 5$

a)  $3 + 2 = 5$

$5 + 4 = 9$

$5 + 4 = 9$

There are 9 balls.

There are 9 balls.

b)  $9 \times 4 = 36$

There are 36 balls in 4 baskets.

b)  $9 \times 4 = 36$

There are 36 balls in 4 basket.