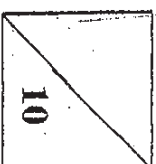







Ai Tong School  
Primary Two Mathematics  
Term 3: Money

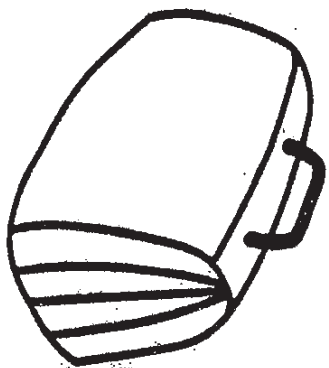








Name: \_\_\_\_\_ ( ) \_\_\_\_\_ Date: \_\_\_\_\_  
Class: Pr. 2 ( )

Count and write the correct amount of money paid for each item. (1 mark each)

1.  ( ) 

2.  ( ) 

2. Write the correct answer in each box. (1 mark each)

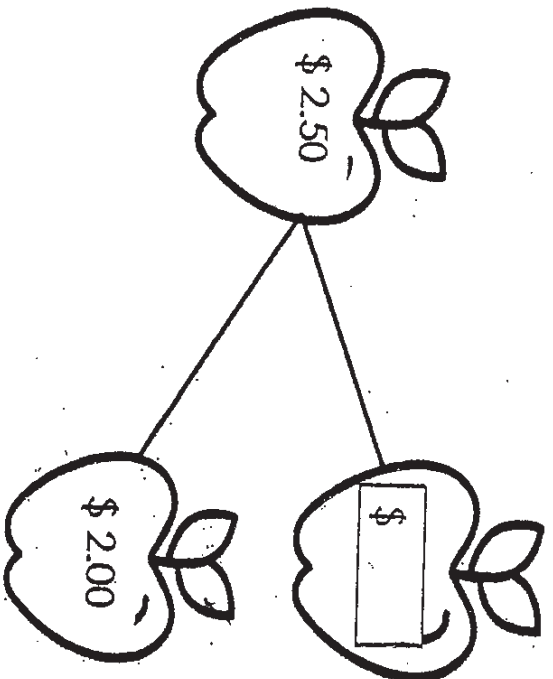
a. 13 dollars and 30 cents =

\$	
----	--

b. \$2.05 is the same as

	¢

c.



Read the questions carefully.


Show your working in the space given.

Q3 (2 m), Q4 (3 m)

3. Mrs Ho paid \$24 for 6 towels.  
The cost of each towel was the same.  
How much did each towel cost?



Each towel cost




4. Sunny bought a pair of sports shoes for \$80.  
He bought a pair of rollerblades which cost \$45 more.  
How much did he pay for the two items?



He paid \_\_\_\_\_ for the two items.

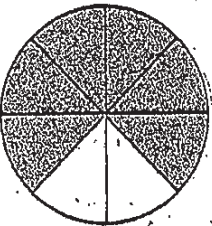

Have you checked your work? 😊



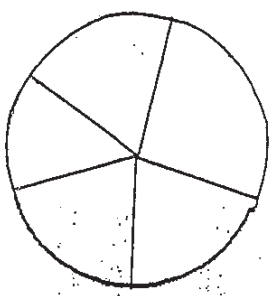
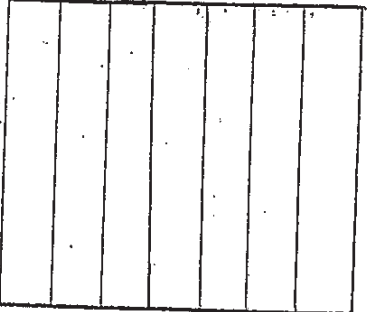
Name: \_\_\_\_\_ ( ) Date: \_\_\_\_\_  
Class: Pr. 2 ( )

Read the questions carefully. Write the correct answers in the space given. (1 mark each)







Write down the fractions of the shaded parts in the space provided.

	Fraction
a) 	_____
b) 	_____

2. Colour the shapes to show the fractions given.

<p>a) Colour <math>\frac{3}{5}</math> of the circle.</p>	
<p>b) Colour <math>\frac{4}{7}</math> of the rectangle.</p>	

3. Study the pictures carefully and then write the correct answer in the blanks.


<p>a. How many  are in  ?</p>	
<p>b. If  = 1, what fraction is  ?</p>	

4) Ring the smallest fraction.


$$\frac{6}{7} \quad \frac{2}{7} \quad \frac{5}{7}$$


5) Fill in the blanks

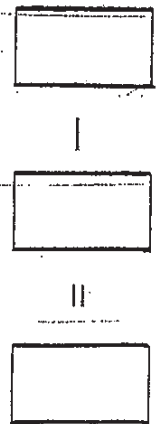
a)  $\frac{2}{9} + \frac{5}{9} =$



b)  $\frac{7}{8} - \frac{4}{8} =$



6. Mary cut a pizza into 6 equal pieces.  
She ate 5 pieces.  
What fraction of the pizza had she left?

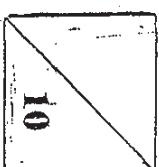


She had \_\_\_\_\_ of the pizza left.

Have you checked your work? 😊






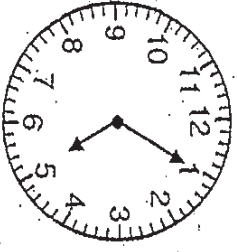


Name: \_\_\_\_\_ ( ) \_\_\_\_\_ Date: \_\_\_\_\_

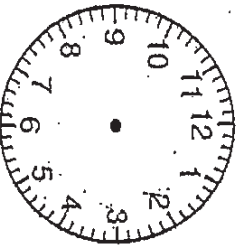
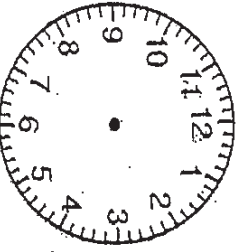
Class: Pr. 2 ( )

Read the questions carefully. Write the correct answers in the space given. (1 mark each)

1. What is the time shown in each clock? Write the answers in the boxes provided.

1.	b.
	

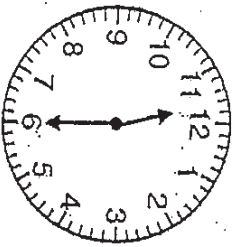
2. Draw the hour and minute hand on each clock.

1.	b.
	
The time is 9.10	The time is 8.55

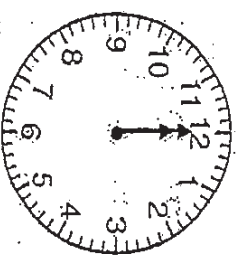
3.

Write the correct answer in the blank.

a.

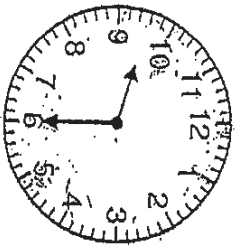


\_\_\_\_\_ minutes later

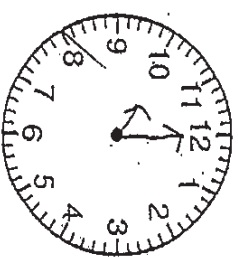


Draw the minute and hour hand to show the correct time.

b.



\_\_\_\_\_ minutes later



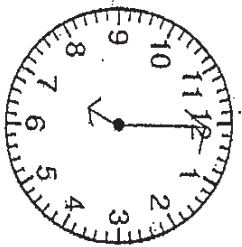
4. Fill in the blanks with **before** or **after**.

(a) 6 o'clock is 1 hour \_\_\_\_\_ 5 o'clock.

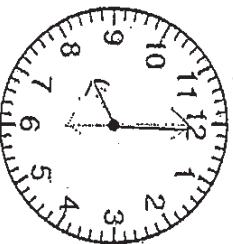
(b) 11.30 a.m. is 30 minutes \_\_\_\_\_ 12 noon.

Read the question carefully. Check your answers by drawing the hands of the clock.

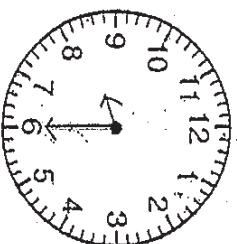
5. Amy started doing her homework at <sup>7.00</sup> 7:30 pm. She took 1 hour to do her homework. She then spent 30 minutes on the computer before going to bed.



1 hour after



30 minutes after




(a) Amy finished doing her homework at \_\_\_\_\_

(b) She went to bed at \_\_\_\_\_

Have you checked your work? 😊






# ANSWER SHEET

EXAM PAPER 2010

SCHOOL : ATONG PRIMARY  
SUBJECT : PRIMARY 2 MATHEMATICS

TERM : CA2



Term 3: Money

1)a)\$3.20      b)\$15.25

2)a)\$13.30

b)205c

c)\$0.59

3)\$24 ÷ 6 = \$4.00

4) )\$80 + \$45 = \$125

Each towel cost \$4.00

\$125 + 80 = \$205

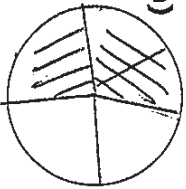
He paid \$205 for the two items.

Term 3: Fractions

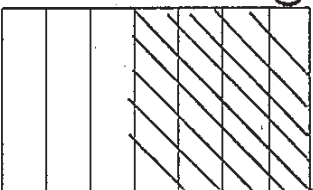
1)a)6/8

b)2/7

2)a)



b)



3)a)3

b) 1/2

4)2/7

5)a)7/9

b)3/8

6)6/6 - 5/6 = 1/6

She had 1/6 of the pizza left.

Term 3: Time

1)a)10.45

b)5.05

2)a)

3)a)30minutes later

b)30 minutes later

4)a)after

b)before

5)a)8.00p.m.      b)8.30pm.

