

TAO NAN SCHOOL

HOLISTIC ASSESSMENT MATHEMATICS REVIEW (1) 2019

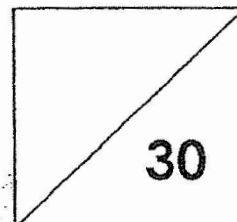
Name: _____ ()

Class : P 2 ()

Duration : 45 minutes

Date: 8 April 2019

Parent's signature : _____



Section A (6 x 1 mark)

Mental Sums

Listen to your teacher.

Write your answers in the boxes provided.

1.

--

1. What is the sum of 12 and 7?

2.

--

2. What is 10 more than 58?

3.

--

3. What is the difference between 27 and 9?

4.

--

4. Subtract 20 from 76.

5.

--

5. Multiply 8 by 2.

6.

--

6. What is 5 groups of 10?

Section B (16 x 1 mark)

Read the questions carefully.

Write the correct answers in the boxes provided.

7. In 489, the **value** of the digit 8 is

8. Write in words.

327	
------------	--

9. Write in numerals.

5 hundreds and 6 ones

10. Fill in the blank with '**greater**' or '**smaller**'.

837 is than 873.

11. Arrange the numbers from the smallest to the greatest.

344 434 334

<input type="text"/>	,	<input type="text"/>	,	<input type="text"/>
----------------------	---	----------------------	---	----------------------

smallest

12. Look at the number pattern carefully.

7 , 9 , 13 , 19 , _____ , 37 , 49

The missing number is

13.

$$\begin{array}{r} 5 \quad 6 \quad 3 \\ + \quad 2 \quad 4 \end{array}$$

--	--	--

14.

$$\begin{array}{r} 7 \quad 6 \quad 8 \\ - \quad 4 \quad 3 \end{array}$$

--	--	--

15.

$$\begin{array}{r} 3 \quad 3 \quad 7 \\ + \quad 5 \quad 4 \end{array}$$

--	--	--

16.

$$\begin{array}{r} 971 \\ - 59 \\ \hline \square \square \square \\ \hline \end{array}$$

Use the numbers given to write an addition equation and a subtraction equation.

2

12

14

17.

$$\square + \square = \square$$

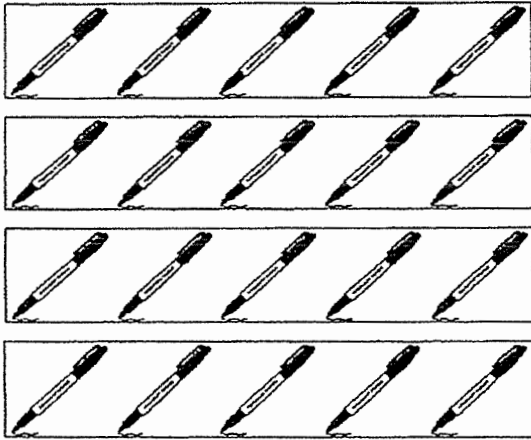
18.

$$\square - \square = \square$$

19. 9 groups of 2 is


$$20. 5 + 5 + 5 + 5 + 5 + 5 + 5 = \square \times 5$$

21. Jenny bought 4 boxes of markers.
There were 5 markers in each box.
How many markers did Jenny buy?



$$\square \times \square = \square$$

22. There were 10 watermelons at a fruit stall.
Mr Lee put 2 watermelons into 1 basket.
How many baskets did Mr Lee use?



$$\square \div \square = \square$$

Section C (4 x 2 marks)

Solve the word problems.

Show your working clearly.

23. Joe had 72 cards.
He lost 15 cards.
How many cards did Joe have in the end?

Joe had _____ cards in the end.

24. Mandy has 30 books.
She puts 5 books in each box.
How many boxes does she use?

She uses _____ boxes.

25. Gary read a book in 8 days.
He read 10 pages every day.
How many pages are there in the book?

There are _____ pages in the book.

26. Junyang has 82 marbles.
Felix has 78 more marbles than Junyang.
How many marbles does Felix have?

Felix has _____ marbles.

-----End of Paper-----

ANSWER KEY

YEAR : 2019
LEVEL : PRIMARY 2
SCHOOL : TAO NAN SCHOOL
SUBJECT : MATHEMATICS
TERM : HOLISTIC ASSESSMENT REVIEW 1

SECTION A

- Q1) 19
Q2) 68
Q3) 18
Q4) 56
Q5) 16
Q6) 50

SECTION B

- Q7) 80
Q8) three hundred and twenty-seven
Q9) 506
Q10) 837 is smaller than 873
Q11) 334, 344, 434
smallest
Q12) 27
Q13) 587
Q14) 725
Q15) 391
Q16) 912
Q17) $12 + 2 = 14$
Q18) $14 - 2 = 12$
Q19) 9 groups of 2 is 18
Q20) $5 + 5 + 5 + 5 + 5 + 5 + 5 = 7 \times 5$
Q21) $4 \times 5 = 20$
Q22) $10 \div 2 = 5$

SECTION C

- Q23) $72 - 15 = 57$
Q24) $30 \div 5 = 6$
Q25) $10 \times 8 = 80$
Q26) $82 + 78 = 160$

THE END

