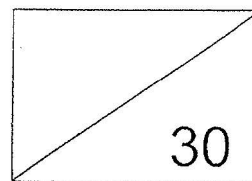


Red Swastika School
Primary 2
Class Test 1
Mathematics



Name: _____ () Date: _____

Class: P2 / _____ Duration: 50 minutes

Parent's Signature: _____

Section A: 5 Questions (2 marks each)

Choose the correct answer and write its number in the brackets provided.

1 $641 + 238 =$ _____.

(1) 403

(2) 417

(3) 877

(4) 879

()

2 10 less than 418 is _____.

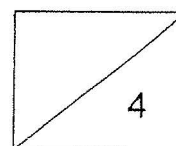
(1) 318

(2) 408

(3) 428

(4) 518

()



3 _____ and _____ are 3-digit odd numbers.

- (1) 41 and 45
- (2) 32 and 37
- (3) 247 and 275
- (4) 301 and 374

()

4 6 tens 17 ones is the same as _____.

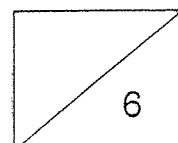
- (1) 67
- (2) 77
- (3) 617
- (4) 707

()

5 30 tens – 2 tens = _____.

- (1) 10
- (2) 28
- (3) 280
- (4) 320

()



Section B: 7 Questions (2 marks each)

Work out the following sums and write the answers in the spaces provided.



6 Write 598 in words.

Ans: _____

7 $783 - 146 =$ _____

Ans: _____

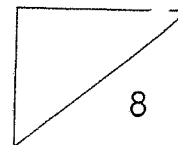
8 Arrange the numbers from the greatest to the smallest.



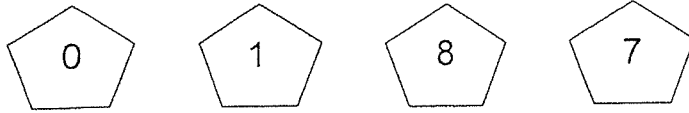
_____ , _____ , _____ , _____
greatest

9 Add 510 and 5 tens.

Ans: _____



- 10 Look at the numbers given.
Use the numbers to form the greatest 3-digit even number.
Use each number once only.



Ans: _____

- 11 What is the missing number in the box?

$$\begin{array}{r}
 7 \quad \square \quad 3 \\
 - 2 \quad 5 \quad 6 \\
 \hline
 5 \quad 2 \quad 7 \\
 \hline
 \end{array}$$

Ans: _____

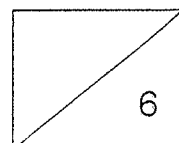
- 12 What is the missing number in the box?

$$\text{Candy} + 60 = \text{Candy}$$

$$\text{Candy} + \text{Candy} = 400$$

$$\text{Candy} = \square ?$$

Ans: _____



Section C: 6 marks (3 marks each)

Do the following sums. Show your workings and statements clearly.

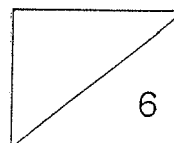
- 13 Vivian bought 575 sweets.
She bought 128 fewer sweets than Rani.
How many sweets did Rani buy?

Rani bought _____ sweets.

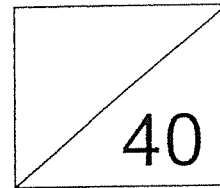
- 14 Anita needed 250 eggs to bake some cakes.
She did not have enough eggs. She needed to buy 51 more eggs.
How many eggs did Anita have at first?

Anita had _____ eggs at first.

End of Paper
Please check your work carefully.



Red Swastika School
Primary 2
Class Test 2
Mathematics



Name: _____ () Date: _____

Class: P2 / _____ Duration: 50 minutes

Parent's signature: _____

Section A: 14 marks (2 marks each)

Choose the correct answer and write its number in the brackets provided.

1 5 threes = _____

- (1) 8
- (2) 10
- (3) 15
- (4) 18

()

2 2 groups of 10 is the same as _____

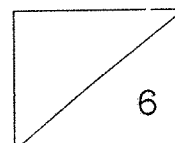
- (1) $2 + 2$
- (2) 2×2
- (3) $10 + 10$
- (4) 10×10

()

3 $16 \div 4 =$ _____

- (1) 20
- (2) 12
- (3) 8
- (4) 4

()



4 $4 + 4 + 12 = \underline{\hspace{2cm}} \times 5$

- (1) 20
- (2) 16
- (3) 8
- (4) 4


()

5 When a number is divided by 5, the answer is 5.
What is the number?

- (1) 1
- (2) 5
- (3) 10
- (4) 25

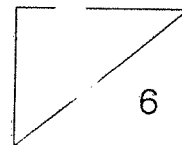
()

6 18 balloons can be divided equally into _____.

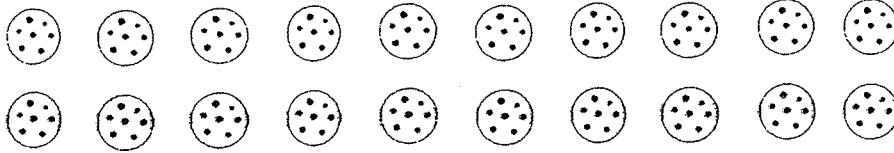


- (1) 4 groups of 6
- (2) 6 groups of 3
- (3) 4 groups of 4
- (4) 6 groups of 5

()



- 7 Susan has 20 cookies.
She wants to give 3 cookies to each of her friends.
What is the most number of friends she can give to?



- (1) 7
(2) 6
(3) 5
(4) 4

()

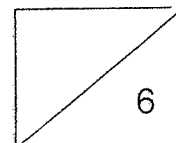

Section B: 14 marks (2 marks each)

Work out the following sums and write the answers in the spaces provided.

- 8 Complete the number pattern.

_____, 20, 24, _____, 32, 36

- 9 Circle the sweets to show 8 groups of 5.



10 Multiply 7 by 4.

Ans: _____


11 What is the missing number in the box?

$$\text{bee} \div 3 = 3$$

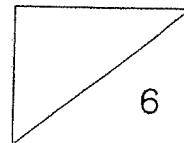
$$\text{bee} = \boxed{}$$

Ans: _____

12 Write a division equation based on the picture below.



$$\boxed{} \div \bigcirc = \boxed{}$$



13 Shade the boxes that have the same answer.

$$4 \times 9$$

$$4 + 4 + 4 + 4 + 4 + 4 + 4 + 4 + 4$$

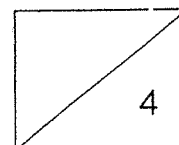
9 groups of 4

$$4 \times 4 \times 4 \times 4 \times 4 \times 4 \times 4 \times 4$$

14 What is the missing number in the box?

$$\begin{array}{l} \text{Octopus} \div 2 = 5 \\ 3 \times \text{Octopus} = \text{Fish} \\ \text{Fish} = \square \end{array}$$

Ans: _____



Section C: 12 marks (4 marks each)

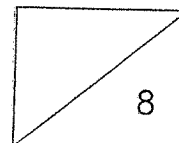
Do the following sums. Show your workings and number equations clearly.

- 15 Mrs Sim has 13 sweets.
She gives 3 sweets to each of her children.
She has 1 sweet left.
How many children does Mrs Sim have?

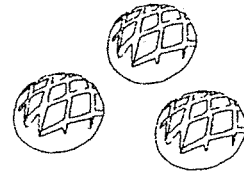
Mrs Sim has _____ children.

- 16 Mr Ferdinand had 32 pencils.
He gave them equally to 2 boys and 2 girls.
How many pencils did each child get?

Each child got _____ pencils.



- 17 Madam Wati has 10 packets of buns.
There are 3 buns in each packet.



- (a) How many buns does she have altogether?

Madam Wati has _____ buns altogether.

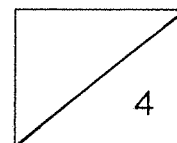
- (b) She wants to give the buns equally to 5 old ladies at a nursing home. How many buns will each old lady get?

Each old lady will get _____ buns.

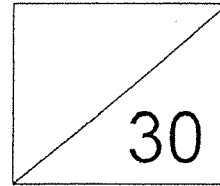
END OF PAPER



Please check your work carefully.



RED SWASTIKA SCHOOL
CLASS TEST 3
MATHEMATICS
PRIMARY 2



Name: _____ () Date: _____

Class: P2 _____

Duration: 50 minutes

Parent's signature: _____

Section A: 10 marks (2 marks each)

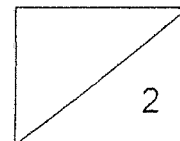
Choose the correct answer and write its number in the brackets provided.

1 What is the amount of money shown below?

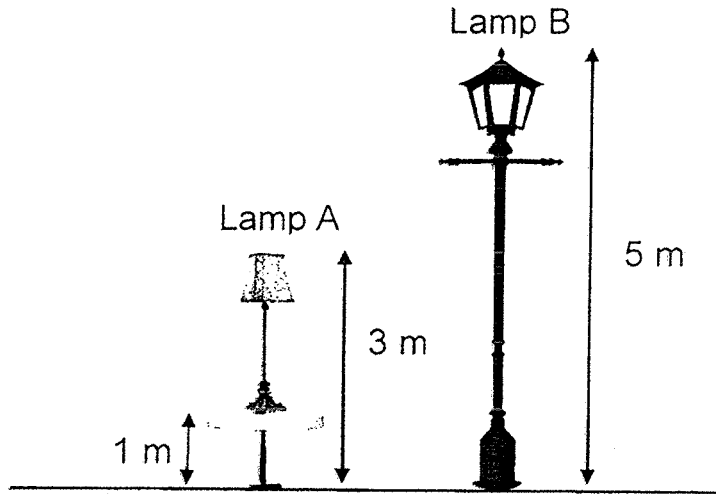


- (1) \$1.80
- (2) \$1.85
- (3) \$1.90
- (4) \$1.95

()




2 The total height of Lamp A and Lamp B is _____.



- (1) 6 m
- (2) 7 m
- (3) 8 m
- (4) 9 m

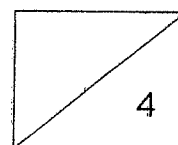
()

3 This building is formed using a _____ and a _____.

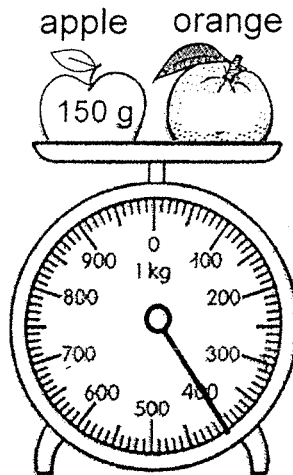


- (1) cone and sphere
- (2) cube and sphere
- (3) cube and cylinder
- (4) cone and cylinder

()



- 4 The mass of the apple is 150g.
How much lighter is the apple than the orange?



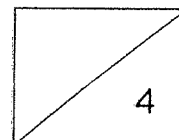
- (1) 100 g
(2) 150 g
(3) 250 g
(4) 400 g

()

- 5 There are some red and blue marbles in a box.
324 marbles are red.
There are 125 fewer blue marbles than red marbles.
How many marbles are there in the box altogether?

- (1) 199
(2) 449
(3) 523
(4) 773

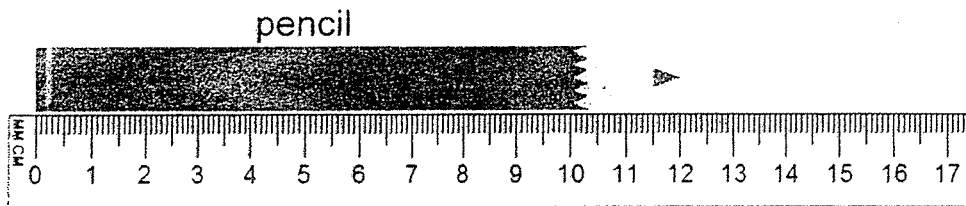
()



Section B: 12 marks (2 marks each)


Work out the following sums and write the answers in the spaces provided.

6 What is the length of the pencil?

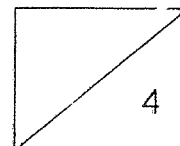


Ans: _____ cm

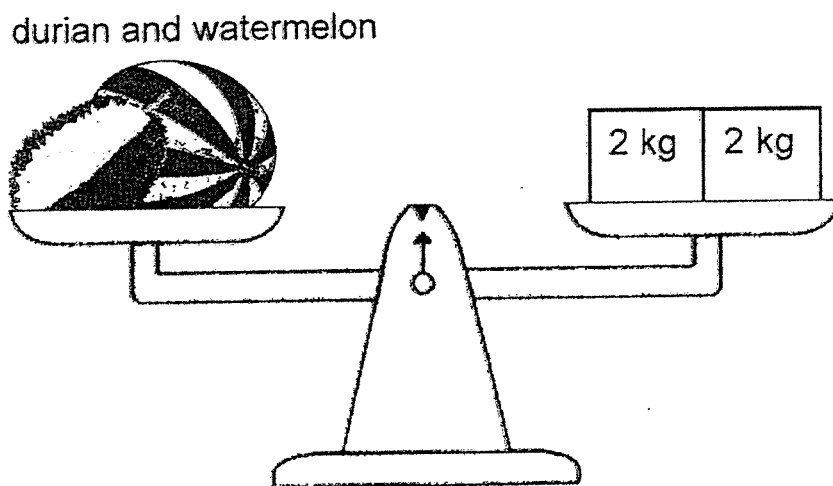
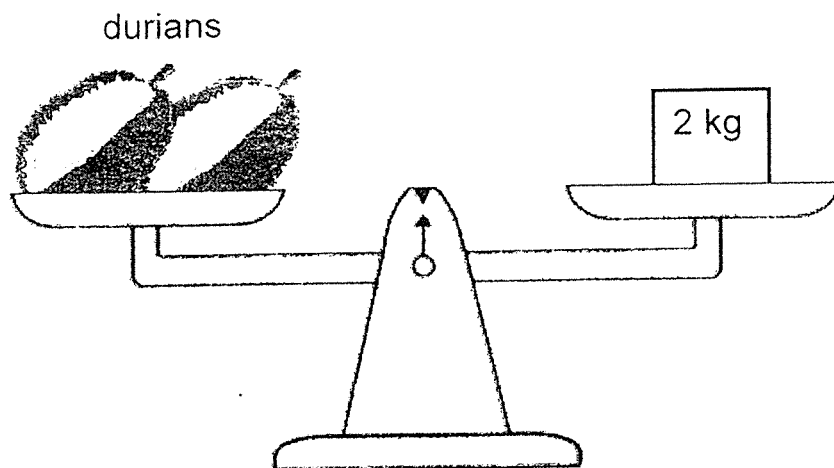
7 Write the amount of money shown.



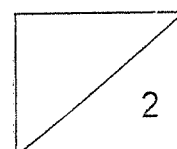
Ans _____



- 8 Look at the pictures. Each durian has the same mass.
What is the mass of the watermelon?



Ans: _____ kg



- 9 Jessica has \$90 to buy two presents for her mother.
Which two items can she buy?



necklace
\$49



bangle
\$45



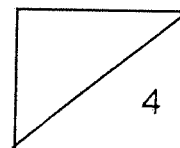
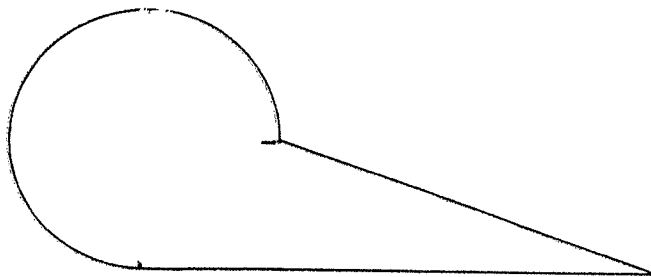
ring
\$42



handbag
\$56

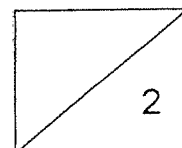
Ans: _____ and _____

-
- 10 Look at the figure.
Draw straight lines on the figure to show that this figure is
made up of a triangle, a square, a semicircle and a quarter
circle.



- 11 Mr Fernandez had \$800.
He bought a camera at \$459 and gave \$250 to his wife,
How much money did Mr Fernandez have in the end?

Ans: \$ _____



Section C: 8 marks (4 marks each)

Do the following sums. Show your workings and statements clearly.

- 12 Madam Lina is 160 cm tall.
She is 65 cm taller than her daughter.
What is the total height of Madam Lina and her daughter?

Their total height is _____ cm.

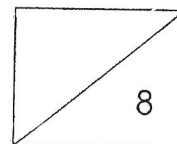
-
- 13 Miss Devi bought some apples.
She threw away 48 rotten apples.
Miss Anisa gave her another 57 apples.
Miss Devi now has 189 apples.
How many apples did Miss Devi buy at first?

Miss Devi bought _____ apples at first.

END OF PAPER



Please check your work carefully.



ANSWER KEY

LEVEL : PRIMARY 2
SCHOOL : RED SWASTIKA
SUBJECT : MATHEMATICS

CLASS TEST 1

Section A

Q1	Q2	Q3	Q4	Q5
4	2	3	2	3

Section B

6) five hundred and ninety-eight

7) ~~637~~

8) ~~873~~, 783, 387, 378

9) 560

10) ~~870~~

11) 8

12) 140

Section C

13) ~~14)~~ $575 + 128 = 703$
Rani bought 703 sweets.

14) ~~13)~~ $250 - 51 = 199$
Anita had 199 eggs at first.

CLASS TEST 2

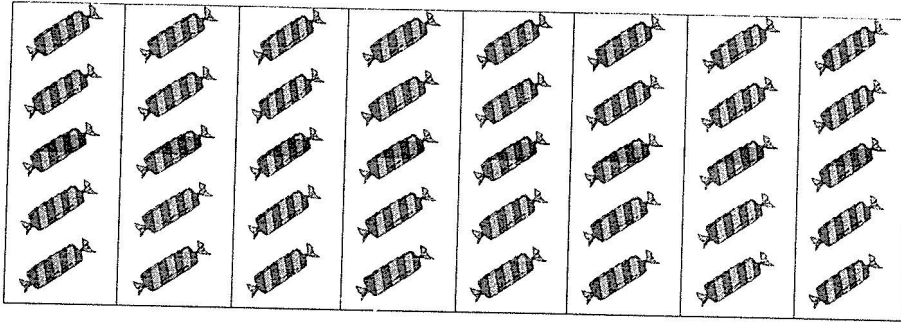
Section A

Q1	Q2	Q3	Q4	Q5	Q6	Q7
3	3	4	4	4	2	2

Section B

8) 16 , 20 , 24 , 28 , 32 , 36

9)



10) 28

11) 9

12) $45 \div 9 = 5$

13)

4×9

$4 + 4 + 4 + 4 + 4 + 4 + 4 + 4 + 4$

9 groups of 4

14) 30

Section C

15) $13 - 1 = 12$

$12 \div 3 = 4$

Mrs Sim has 4 children.

16) $2 + 2 = 4$

Each child got 8 pencils.

17) (a) $10 \times 3 = 30$

Madam Wati has 30 buns altogether.

(b) $30 \div 5 = 6$

Each old lady will get 6 buns.

CLASS TEST 3

Section A

Q1	Q2	Q3	Q4	Q5
3	2	4	1	3

Section B

6) 12 cm

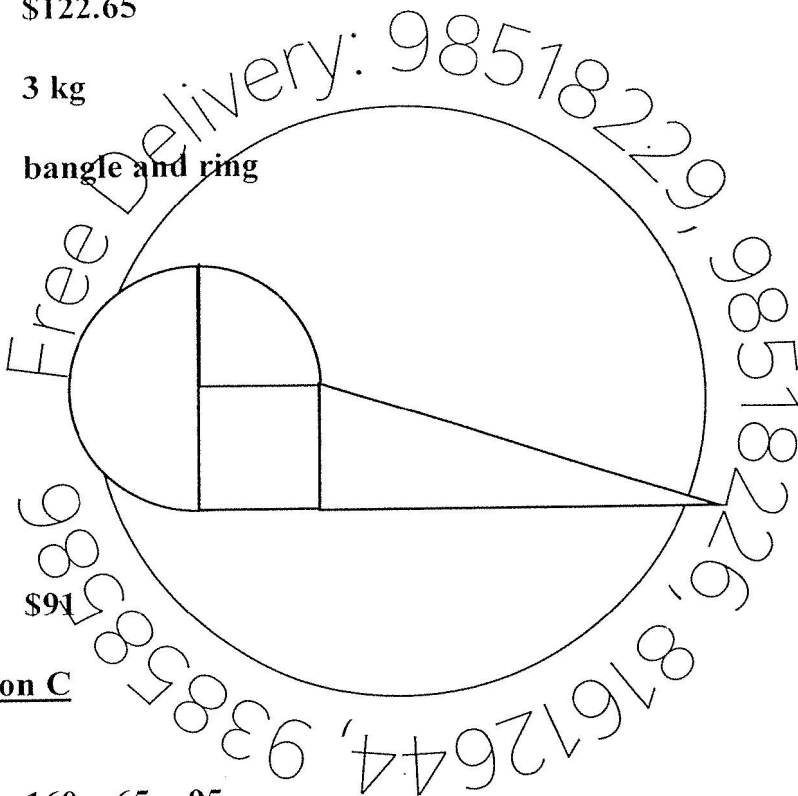
7) \$122.65

8) 3 kg

9) bangle and ring

10)

11) \$91



Section C

12) $160 - 65 = 95$
 $95 + 160 = 255$
Their total height is 255 cm.

13) $189 - 57 = 132$
 $132 + 48 = 180$
Miss Devi bought 180 apples at first.

End

