

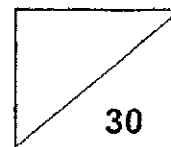


Pei Hwa Presbyterian Primary School

Mathematics

Primary 3

Weighted Assessment 3



Name: \_\_\_\_\_ ( )

Class: \_\_\_\_\_

Date: \_\_\_\_\_

Parent's Signature: \_\_\_\_\_

**Section A: Multiple Choice Questions (12 marks)**

Question 1 to 4 carry 1 mark each. Question 5 to 8 carry 2 marks each.

For each question, four options are given. One of them is the correct answer.

Make your choice (1, 2, 3 or 4) and write your choice (1, 2, 3 or 4) in the brackets provided.

1. What fraction of the figure is shaded?



(1)  $\frac{1}{2}$

(2)  $\frac{2}{3}$

(3)  $\frac{2}{5}$

(4)  $\frac{3}{5}$

( )



2. Which of the following is an equivalent fraction of  $\frac{3}{4}$  ?

(1)  $\frac{5}{6}$

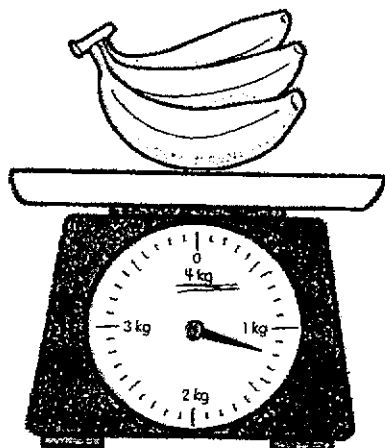
(2)  $\frac{9}{10}$

(3)  $\frac{11}{12}$

(4)  $\frac{15}{20}$

( )

3. What is the mass of the bunch of bananas?



(1) 1 kg 2 g

(2) 1 kg 12 g

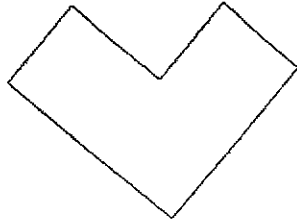
(3) 1 kg 20 g

(4) 1 kg 200 g

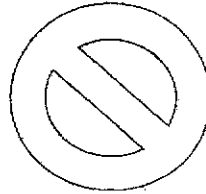
( )

4. Which figure has perpendicular lines?

(1)




(2)



(3)



(4)



( )

5. Which of the following fractions is the greatest?

(1)  $\frac{1}{3}$

(2)  $\frac{2}{5}$

(3)  $\frac{5}{9}$

(4)  $\frac{9}{10}$

( )

6. Add the fractions. Express your answer in its simplest form.

$$\frac{5}{12} + \frac{1}{4} = \square$$

(1)  $\frac{1}{3}$

(2)  $\frac{2}{3}$

(3)  $\frac{3}{8}$

(4)  $\frac{5}{16}$

( )

7. The volume of 1 bottle of juice is 1 ℓ. The volume of 1 carton of milk is 320 ml. Willy bought 1 bottle of juice and 2 cartons of milk. What was the total volume of the items bought?



(1) 1320 ml

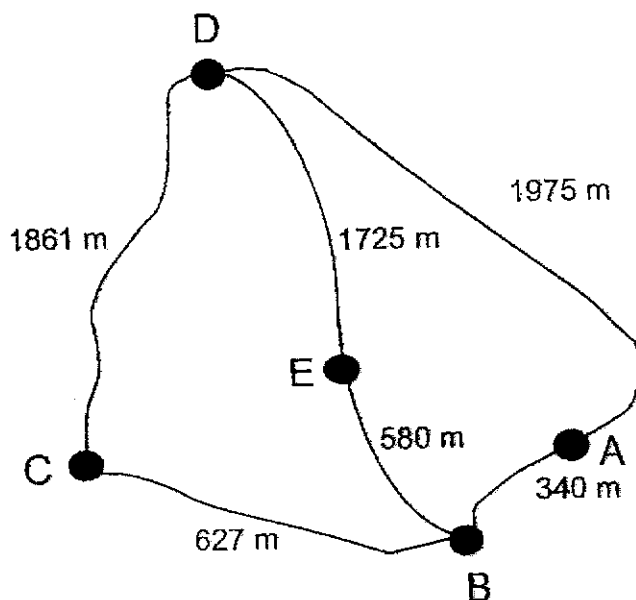
(2) 1640 ml

(3) 2320 ml

(4) 2640 ml

( )

8. Study the map below. Jack needs to travel from Point B to Point D.  
What is the shortest distance he can travel to reach Point D?



- (1) 1 km 725 m  
 (2) 2 km 305 m  
 (3) 2 km 315 m  
 (4) 2 km 488 m

( )

**Section B: Short Answer Questions (12 marks)**

Question 9 to 12 carry 1 mark each. Question 13 to 16 carry 2 marks each. Show your working clearly in the space below each question and write your answers in the spaces provided. For questions which require units, give your answers in the units stated.

9. Compare the fraction using '<' or '>'.

$$\frac{4}{5} \quad \bigcirc \quad \frac{7}{10}$$

Ans: \_\_\_\_\_

10. In the number line, what is the fraction represented by X?



Ans: \_\_\_\_\_


11. Express 2 m 9 cm in centimetres.

Ans: \_\_\_\_\_ cm

12.  $\frac{5}{8} - \frac{1}{2} = \square$

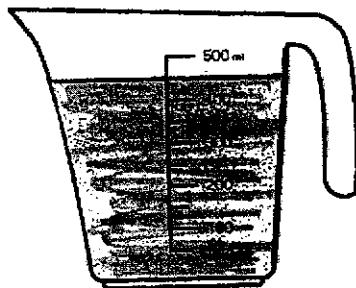
Ans: \_\_\_\_\_

13. Arrange the following fractions in order.  
Begin with the greatest.



Ans: \_\_\_\_\_, \_\_\_\_\_, \_\_\_\_\_  
greatest

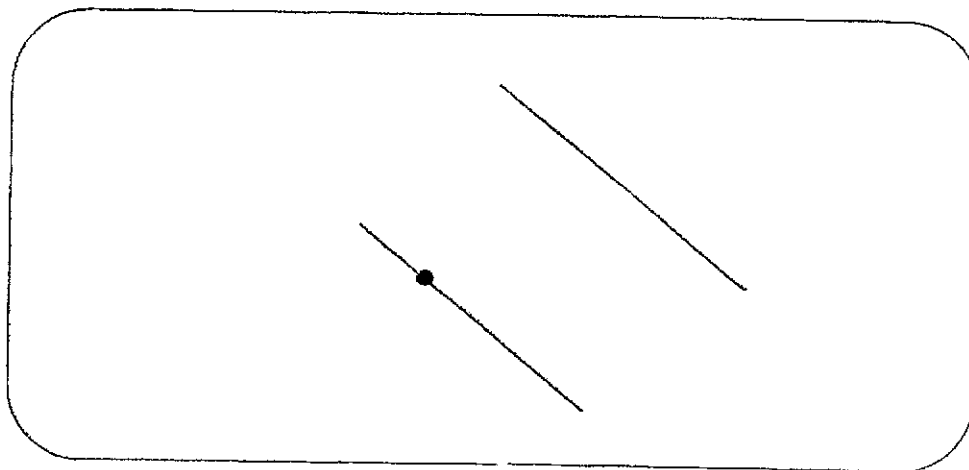
14. The figure shows some water in a jug.  
Find the total amount of water in 3 similar jugs with the same amount of water.




Ans: \_\_\_\_\_ l \_\_\_\_\_ ml



15. (a) Draw a line parallel to the given line that passes through the given point. Use arrowheads ( $\nearrow$ ) to show that the lines are parallel.



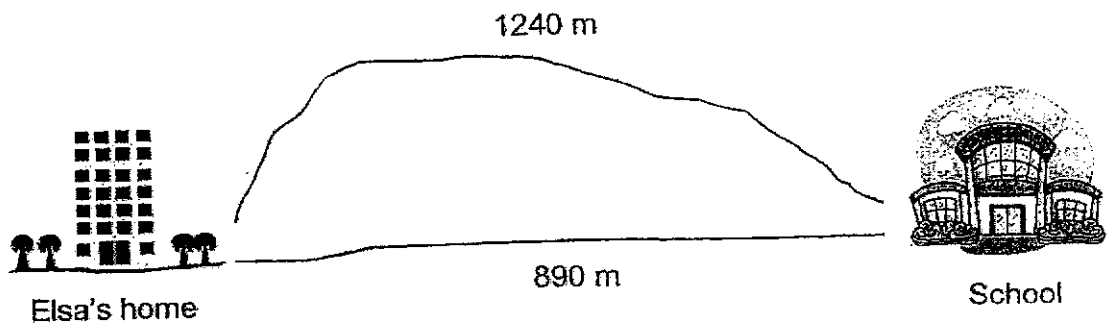
- (b) Look at the picture.



Name 2 vertical lines from the picture.

\_\_\_\_\_ and \_\_\_\_\_ are vertical lines.

16. Elsa walked 1240 m from her home to the school.  
She used the other path to return home from school.  
Find the difference in the distance travelled to and back from school.



Ans: \_\_\_\_\_ m

**Section C: Long Answer Questions (6 marks)**

For Question 17 and 18, show your working clearly and write your answers in the spaces provided. The number of marks is shown in the brackets [ ] at the end of each question or part-question.

---

17. Bala is 163 cm.  
He is 15 cm taller than Lisa.

(a) What is Lisa's height?

- (b) What is the total height of Bala and Lisa?  
Give your answer in metres and centimetres.

Ans: (a) \_\_\_\_\_ [1]

(b) \_\_\_\_\_ [2]

18. A sack with 7 similar balls has a mass of 1500 g.  
The mass of the sack is 576 g.  
Find the mass of 1 ball.

Ans: \_\_\_\_\_ [3]

---

- End of Paper -  
Please check your work.

**LEVEL : PRIMARY 3**

**SCHOOL : PEI HWA PRESBYTERIAN PRIMARY SCHOOL**

**SUBJECT : MATHEMATICS**

**TERM : WA3**

**YEAR:2024**

Q1	Q2	Q3	Q4	Q5	Q6	Q7	Q8
3	4	4	1	4	2	2	2

<b>Q9</b>	>
<b>Q10</b>	$\frac{5}{6}$
<b>Q11</b>	209cm
<b>Q12</b>	$\frac{1}{8}$
<b>Q13</b>	$\frac{3}{4}$ $\frac{3}{5}$ $\frac{3}{7}$
<b>Q14</b>	450ml $\times$ 3 =1350ml Ans: 1L 350ml
<b>Q15</b>	a)(drawing)  b)AC /BD /EG /FH (Any 2)

<b>Q16</b>	$1240 - 890 = 350$ Ans: 350m
<b>Q17</b>	a) $163 - 15 = 148$ Ans: 148cm (OR) 1m 48cm  b) $148 + 163 = 311$ Ans: 3m 11cm
<b>Q18</b>	$1500 - 576 = 924$ $924 \div 7 = 132$ Ans: 132g