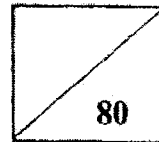


Name : _____ ()

Class: _____

Date : _____



P3 Math Practice Paper 4

Section A

Questions 1 to 15 carry 2 marks each. For each question, four options are given. One of them is the correct answer. Make your choice (1, 2, 3 or 4) and shade your answer on the Optical Answer Sheet.

(30 marks)

1. Which of the following is the same as 7535?

(1) $700 + 50 + 3 + 5$

(2) $700 + 50 + 30 + 5$

(3) $7000 + 500 + 3 + 5$

(4) $7000 + 500 + 30 + 5$

()

2. Which one of the following numbers has the smallest value?

(1) 7504

(2) 7405

(3) 7540

(4) 7450

()

3. A box contained 7 doughnuts. Jane bought 9 boxes of doughnuts.
How many doughnuts were there altogether?

(1) 16

(2) 56

(3) 63

(4) 79

()

4. What is the value of the digit 7 in the number 9837?

- (1) 7
- (2) 70
- (3) 700
- (4) 7000

()

5. Fanny had 3 ten-dollar notes and 2 fifty-cent coins. She bought a toy which cost \$6.50. How much money had she left?

- (1) \$24.50
- (2) \$25.50
- (3) \$35.50
- (4) \$37.50


()

6. The height of the door in the classroom is about _____.

- (1) 20 cm
- (2) 2 cm
- (3) 200 cm
- (4) 2000 cm

()


7. A rectangle is divided into 9 equal parts.
What fraction of the rectangle is shaded?



- (1) $\frac{5}{9}$
 (2) $\frac{4}{9}$
 (3) $\frac{4}{8}$
 (4) $\frac{4}{5}$

()

8. Look at the volume of water in each container.



What is the total amount of water in the two containers?

- (1) 1300 ml
 (2) 1100 ml
 (3) 800 ml
 (4) 300 ml

()

9. Which of the following fractions is expressed in its simplest form?

(1) $\frac{6}{7}$

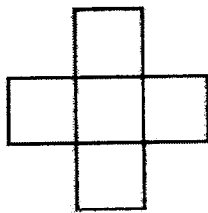
(2) $\frac{2}{4}$

(3) $\frac{8}{10}$

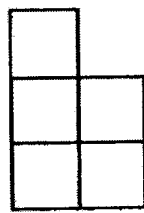
(4) $\frac{2}{12}$

()

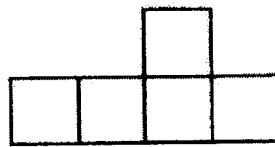
10. The figures below are made up of identical squares.



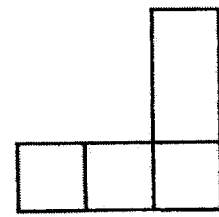
A



B



C



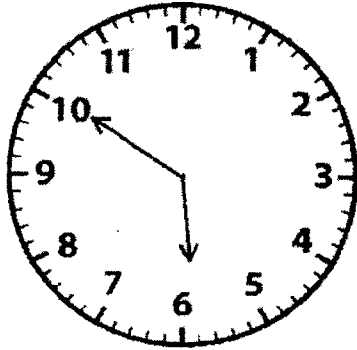
D

Which figure has the shortest perimeter?

- (1) A
 (2) B
 (3) C
 (4) D

()

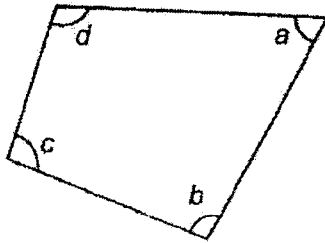
11. What is the time shown on the clock?



- (1) 10 minutes to 5
- (2) 10 minutes to 6
- (3) 10 minutes past 5
- (4) 10 minutes past 6

()


12. In the figure, which angle is smaller than a right angle?



- (1) $\angle a$
- (2) $\angle b$
- (3) $\angle c$
- (4) $\angle d$

()

13. The graph shows the number of books read by four boys.



Who read the least number of books?

- (1) Terry
 (2) Cheng Won
 (3) Ali
 (4) Ravi ()
14. Mrs Lee has 100 fish balls. She wants to sell them in sticks of 3.
 How many sticks of fish balls can she sell at most?
- (1) 30
 (2) 31
 (3) 33
 (4) 34 ()
15. What is the missing number in the number pattern below?

94	82	70	58	?	34
----	----	----	----	---	----

- (1) 12
 (2) 38
 (3) 46
 (4) 56 ()

Section B

Questions 16 to 30 carry 2 marks each. Show your working clearly and write your answers in the spaces provided. For questions which require units, give your answers in the units stated.

(30 marks)

Do not write in
this space

16. Write eight thousand and two in figures.

Ans: _____

17. Find the value of $\frac{1}{2} + \frac{3}{10}$.
Give your answer in its simplest form.

Ans: _____

18. Form the smallest 4-digit number using the digits 0, 3, 4 and 8.

Ans: _____

19. The difference between two numbers is 5204.
The smaller number is 150.
What is the larger number?

Ans: _____

Do not write in
this space

20. Danny had some cards. He bought another 6 boxes of cards. Each box contained 5 cards. Then he had 2046 cards. How many cards did he have at first?

Ans: _____

21. Alice has 25 sweets and 6 plates. She wants to put 7 sweets on each plate. How many more sweets does she need?

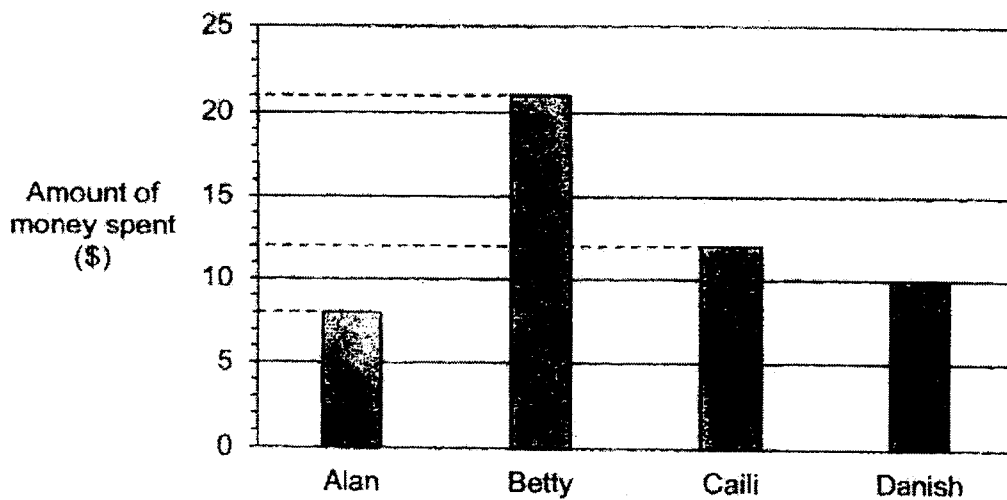
Ans: _____

22. When a number is divided by 8, it gives a quotient of 14 and a remainder of 4. What is the number?

Do not write in this space

Ans: _____

23. The graph below shows the amount of money spent by 4 children in a week.



How much did they spend in total?

Ans: \$ _____

24. Mrs. Ravi spent \$17.85 at a supermarket. She spent \$3.55 more than Mrs. Singh. How much did Mrs. Singh spend?

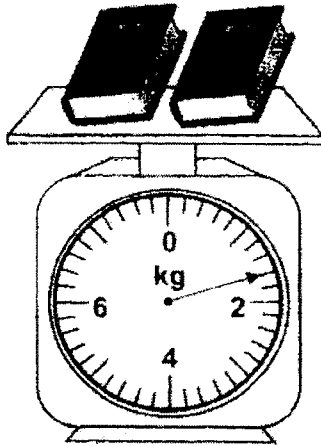
Do not write in this space

Ans: \$ _____

25. Express 1047 m in km and m.

Ans: _____ km _____ m

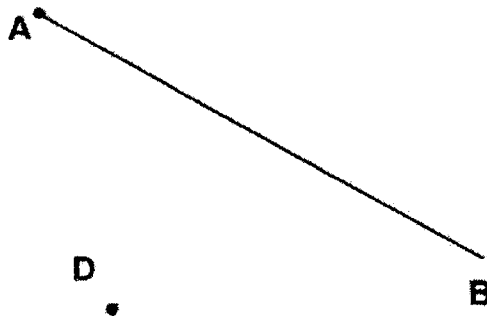
26. Express the mass of 2 books in kg and g.



Ans: _____ kg _____ g

Do not write in
this space

27. Draw a line CD perpendicular to the line AB. The point D is provided.

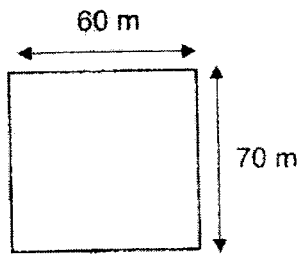


28. Arrange the following fractions from the greatest to the smallest.

$$\frac{3}{4}, \frac{1}{2}, \frac{7}{8}$$

Ans: _____, _____, _____
Greatest

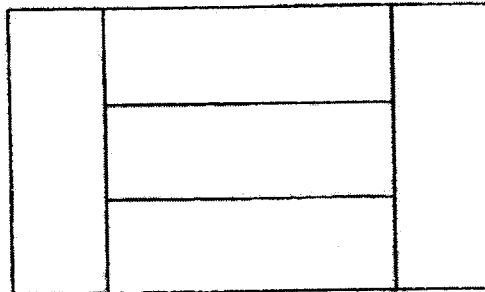
29. James ran around a rectangular field which measured 60 m by 70 m once. What was the total distance that he ran?



Ans: _____ m

Do not write in
this space

30. The figure below is made up of 5 identical rectangles. The breadth of each rectangle is 4 cm. What is the area of one rectangle?



Ans: _____ cm²

Section C

For questions 31 to 36, show your working clearly and write your answers in the space provided. The number of marks available is shown in brackets [] at the end of each question or part-question.

(20 marks)

Do not write in
this space

31. 8096 people visited a fun fair. 5988 of them were adults and the rest were children. How many more adults than children visited the fun fair?

Ans: _____ [3]

32. Penny bought 134 apples.
She packed the apples equally into bags of 5.
- (a) How many bags of 5 apples did she have?
 - (b) How many apples were not packed?

Do not write
in this space

Ans: (a) _____ [2]

(b) _____ [1]

33. Mrs Yong had \$600. She gave her son \$120 and divided the remaining amount equally among her 3 daughters. How much did each daughter get?

Do not write
in this space

Ans: _____ [3]

34. Tammy started her piano practice at 9 a.m. She practised for 1 h 50 min. Then she spent 1 h 40 min on her homework.
- (a) How long did she take for her piano practice and homework in total? (Give your answer in hours and minutes)
- (b) At what time did she complete her homework?

Do not write
in this space

Ans: (a) _____ [1]

(b) _____ [2]

35. Ali has 37 coins. Peiling has 4 times as many coins as Ali.
- (a) How many coins does Peiling have?
 - (b) Shuming has twice as many coins as Peiling. How many coins does Shuming have?

Do not write
in this space

Ans: (a) _____ [2]

(b) _____ [2]

36. Mr Lee has a total of 20 ducks and horses in his farm. The animals have 48 legs in all.

- (a) How many horses does Mr Lee have?
- (b) How many ducks does Mr Lee have?

Do not write
in this space

Ans: (a) _____ [2]

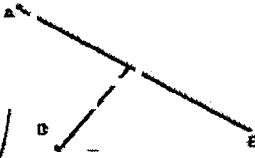
(b) _____ [2]

End

Score

YEAR : 2022
 LEVEL : PRIMARY 3
 SCHOOL : PEI HWA PRIMARY SCHOOL
 SUBJECT : MATHEMATICS
 TERM : PRACTICE PAPER 4

Q1	4	Q2	2	Q3	3	Q4	1	Q5	1
Q6	3	Q7	2	Q8	2	Q9	1	Q10	2
Q11	2	Q12	1	Q13	4	Q14	4	Q15	3

Q16	8009	Q17	$\frac{4}{5}$
Q18	3048	Q19	5354
Q20	$6 \times 5 = 30$ $2046 - 30 = 2016$	Q21	17
Q22	116	Q23	$21 + 8 + 12 + 10 = \$51$
Q24	\$14.30	Q25	$1047\text{m} = 1\text{km } 47\text{m}$
Q26	1kg 500g	Q27	
Q28	$\frac{7}{8} \frac{3}{4} \frac{1}{2}$	Q29	$60 + 70 + 60 + 70 = 260\text{m}$
Q30	$4 \times 3 = 12$ $12 \times 4 = 48$	Q31	$8098 - 5988 = 2108$ $5988 - 2108 = 3880$ There were 3880 more adults than children visited the funfair.
Q32	a) $134 \div 5 = 26$ She had 26 bags of 5 puppies. b) 4 apples were not packed.	Q33	$500 - 120 = 480$ $480 \div 3 = 160$ Each daughter get \$160
Q34	a) 9 a.m. + 1h 50min + 1h 40min = 12.30 p.m. She took 3h 30min for her piano practice and her homework. b) She completed her homework at 12.30 p.m.	Q35	a) $37 \times 4 = 148$ Peiling has 148 coins. b) $148 \times 2 = 296$ Shuming has 296 coins
Q36	(a) Assume that all animals are horses. $20 \times 4 = 80$ (assume legs) $80 - 48 = 32$ $4 - 2 = 2$ $32 \div 2 = 16$ ducks $20 - 16 = 4$ horses Mr Lee has 4 horses. b) Mr Lee has 16 ducks		

