



**ROSYTH SCHOOL**  
**END-OF-YEAR EXAMINATION 2022**  
**MATHEMATICS**  
**PRIMARY 3**

Name : \_\_\_\_\_ ( )

Total  **80**

Class : Pr 3 -

Duration: 1h 45 min

Date : 27 October 2022

Parent's Signature: \_\_\_\_\_

**Instructions to Pupils:**

1. Do not turn over this page until you are told to do so.
2. Follow all instructions carefully.
3. Answer all questions.
4. This paper consists of 3 parts: Sections A, B and C.
5. For questions 1 to 15 in Section A, shade your answers in the Optical Answer Sheet (OAS)

	Maximum Marks	Marks Obtained
<b>Section A</b>	<b>25</b>	
<b>Section B</b>	<b>35</b>	
<b>Section C</b>	<b>20</b>	
<b>Total</b>	<b>80</b>	

\* This paper consists of 21 printed pages altogether (including the cover page).



**Section A**

Questions 1 to 5 carry 1 mark each and Questions 6 to 15 carry 2 marks each. For questions 1 to 15, four options are given. One of them is the correct answer. Make your choice (1, 2, 3 or 4). Shade the correct ovals (1, 2, 3 or 4) onto the Optical Answer Sheet provided.


(25 marks)

- 
1. 5 thousands and 3 tens written in numeral is \_\_\_\_\_ .
- (1) 5300
  - (2) 5030
  - (3) 5003
  - (4) 5130
2. Which of the following numbers is the digit 4 in the hundreds place?
- (1) 1942
  - (2) 2804
  - (3) 3476
  - (4) 4501
3. Ruth bought 6 packets of stickers. Each packet contains 9 stickers. How many stickers did Ruth have altogether?
- (1) 15
  - (2) 45
  - (3) 48
  - (4) 54

4. The height of a classroom door is about \_\_\_\_\_.

- (1) 2 cm
- (2) 2 m
- (3) 20 cm
- (4) 20 m

5. What is the time shown on the clock below?



- (1) 9 minutes past 10
- (2) 9 minutes to 10
- (3) 51 minutes past 10
- (4) 51 minutes to 10

6. Which of the following is the greatest number?

- (1) 3914
- (2) 3491
- (3) 3941
- (4) 3149

7. What is the difference between 7900 and 1090?

(1) 6800

(2) 6810

(3) 6990

(4) 8990

8. What is the remainder when 732 is divided by 7?

(1) 1

(2) 2

(3) 3

(4) 4

9. There are 35 students in a class. There are 5 students in each group. How many groups are there in the class?

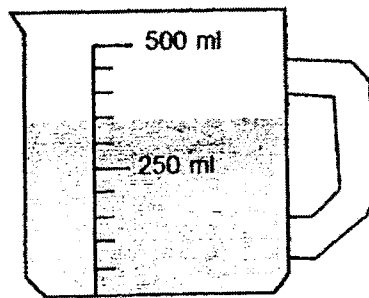
(1) 5

(2) 7

(3) 30

(4) 40

10. Study the diagram carefully.



How much more water must be poured into the container for it to be filled with 500 ml of water?

- (1) 150 ml
  - (2) 230 ml
  - (3) 270 ml
  - (4) 350 ml
11. 640 is \_\_\_\_\_ less than 5800.
- (1) 5140
  - (2) 5160
  - (3) 5260
  - (4) 6440
12. The sum of 2 numbers is 360. The difference between the 2 numbers is 40. What is the value of the smaller number?
- (1) 180
  - (2) 200
  - (3) 320
  - (4) 400

13. Paul had 54 pencils. Weiming had 7 times as many pencils as Paul. How many more pencils did Weiming have than Paul?

- (1) 61
- (2) 324
- (3) 378
- (4) 432

14. Which one of the following fractions is equivalent to  $\frac{2}{3}$  ?

- (1)  $\frac{1}{2}$
- (2)  $\frac{2}{6}$
- (3)  $\frac{4}{6}$
- (4)  $\frac{4}{9}$

15. Which one of the following fractions is smaller than  $\frac{1}{2}$  ?

- (1)  $\frac{2}{3}$
- (2)  $\frac{3}{5}$
- (3)  $\frac{5}{6}$
- (4)  $\frac{3}{7}$

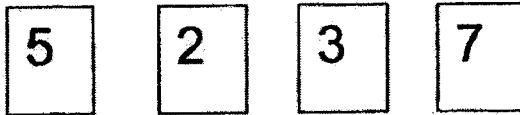
**Section B**

Questions 16 to 20 carry 1 mark each and Questions 21 to 33 carry 2 marks each. Show your working clearly in the space provided for each question and write your answers in the spaces provided. For questions which require units, give your answers in the units stated.

(35 marks)

*All diagrams in this paper are not drawn to scale unless stated otherwise.*

16. What is the greatest 4-digit number that can be formed using all the digits below?  
Each digit can only be used once.



Ans: \_\_\_\_\_

17.  $4702 + 3266 =$  \_\_\_\_\_

Ans: \_\_\_\_\_

18. There were 5398 people at a carnival.  
4267 were adults and the rest were children.  
How many children were at the carnival?

Ans: \_\_\_\_\_

Do not  
write in  
this space



19.  $10\text{ m } 2\text{ cm} = \underline{\hspace{2cm}}\text{ cm}$

Do not  
write in  
this space

Ans:                      cm

20. Find the value of  $\$3.30 - \$0.80$ .

Ans: \$                     

21. What is the missing value in the box below?

$$5200 = \boxed{?} + 3855$$

Ans:

22. What is the missing digit in the box?

$$8 \times \boxed{?} = 56$$

Do not  
write in  
this space

Ans: \_\_\_\_\_

23. Find the product of 509 and 9.

Ans: \_\_\_\_\_

24. Write the missing numerator and denominator.

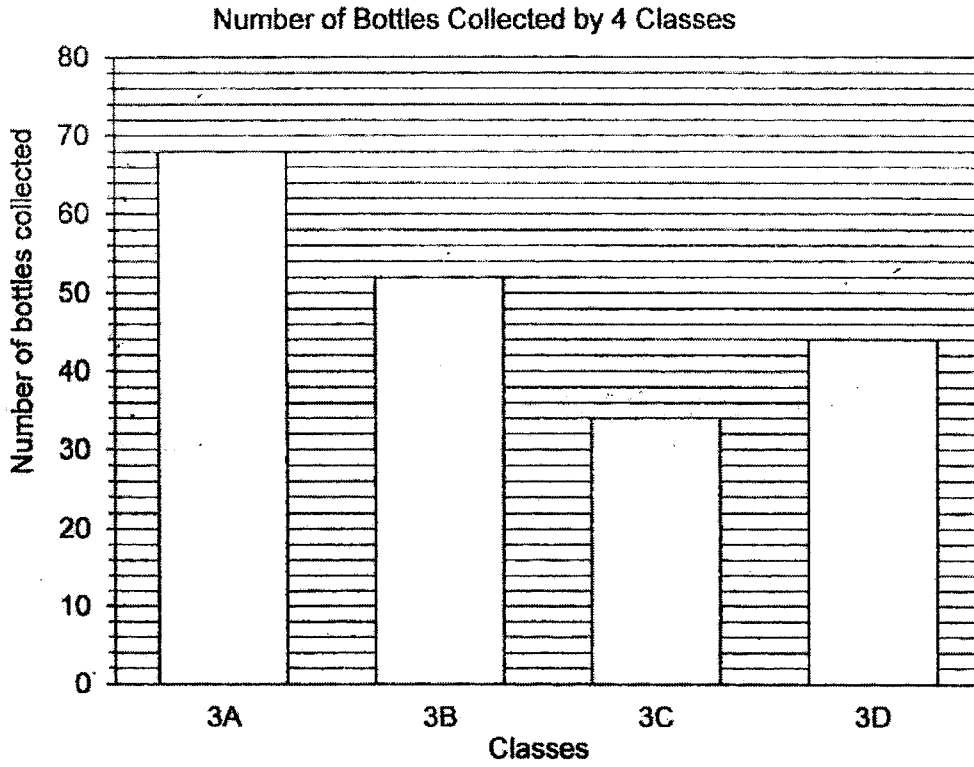
$$1 = \frac{(a)}{8} = \frac{10}{(b)}$$

Ans: (a) \_\_\_\_\_

(b) \_\_\_\_\_


25. The graph shows the number of bottles four classes collected for a recycling project.

Do not write in this space



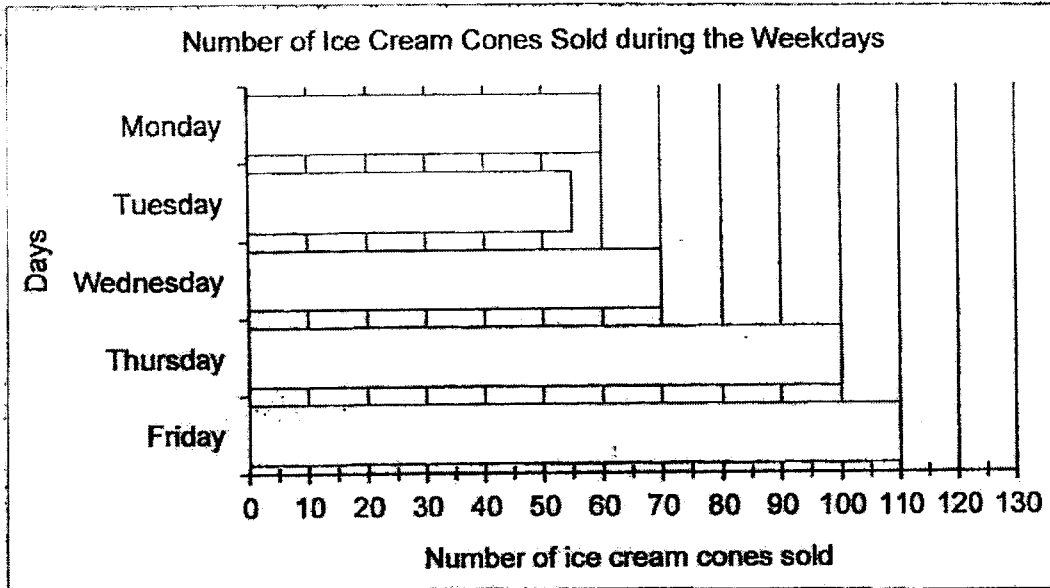
What is the total number of bottles collected by the 4 classes?

Ans: \_\_\_\_\_



26. The graph below shows the number of ice cream cones sold during the weekdays.

Do not write in this space



Which day has twice as many ice cream cones sold as on Tuesday?

Ans: \_\_\_\_\_

27. Devi started her swimming lesson at 10.30 a.m.  
Her lesson lasted for 1 h 15 min.  
What time did her swimming lesson end?


Ans: \_\_\_\_\_ a.m.

28. Sulin took 1 h 25 min to cycle from her home to the park. Then she took another 45 min to cycle from the park to the library. What was the total time taken for Sulin to cycle from her home to the library?

Do not write in this space



home



park



Ans: \_\_\_\_\_ h \_\_\_\_\_ min

29. What are the missing digits represented by (a) and (b)?

$$\begin{array}{r}
 4 \quad 9 \quad 3 \quad (a) \\
 + \quad 3 \quad 4 \quad (b) \quad 8 \\
 \hline
 8 \quad 3 \quad 4 \quad 5
 \end{array}$$

Ans: (a) \_\_\_\_\_

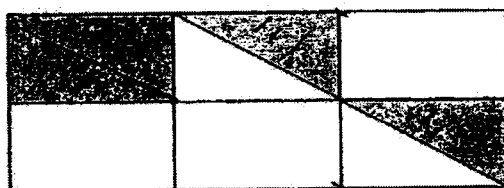
(b) \_\_\_\_\_

30. Lucy has 234 more beads than her sister.  
How many beads must Lucy give to her sister so that both of them have the same number of beads?

Do not  
write in  
this space

Ans: \_\_\_\_\_


31. The figure below is made up of 6 identical rectangles.  
What fraction of the figure is shaded? Give your answer in its simplest form.



Ans: \_\_\_\_\_

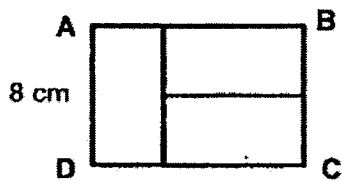
32. What is the difference in mass between the two puppies?  
Give your answer in kilograms and grams.

Do not  
write in  
this space



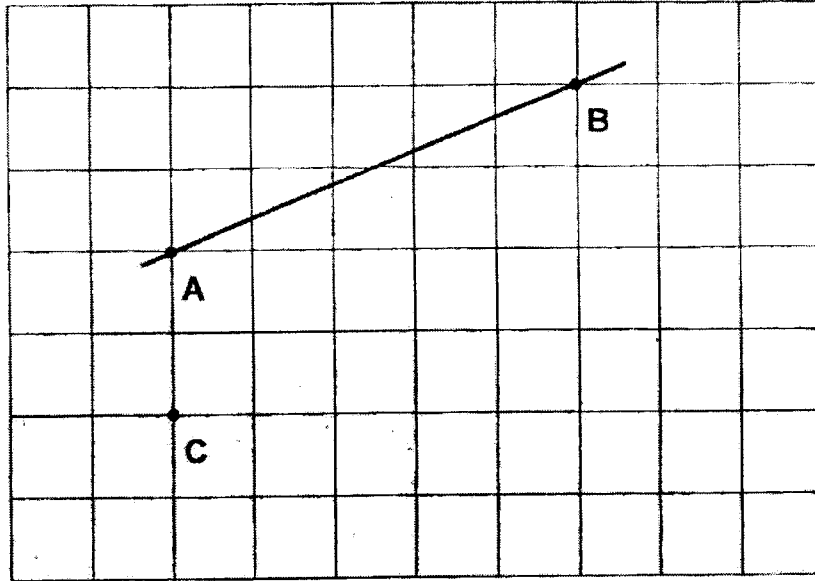
Ans: \_\_\_\_\_ kg \_\_\_\_\_ g

33. Figure ABCD is made up of 3 identical rectangles. If the length of AD is 8 cm, what is the area of ABCD?



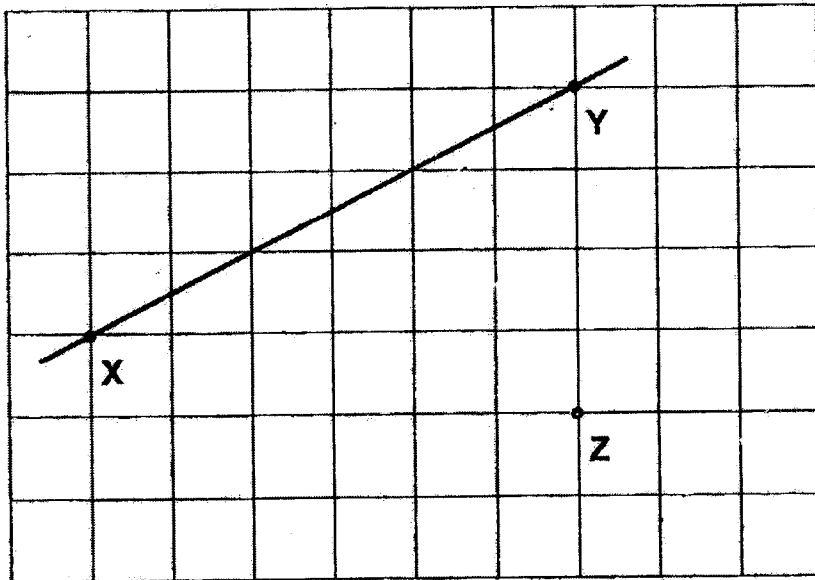
Ans: \_\_\_\_\_ cm<sup>2</sup>

34. (a) In the grid below, draw a line parallel to AB through Point C.



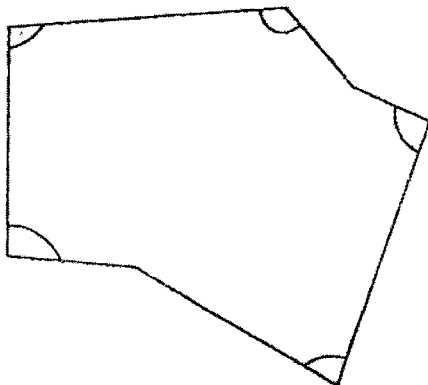
Do not write in this space

(b) In the grid below, draw a line perpendicular to XY through Point Z.





35. Study the following figure.



How many of the marked angles are obtuse angles?

Ans: \_\_\_\_\_

Do not  
write in  
this space



**Section C**

For Questions 36 to 40, each question carries 4 marks. Show your working clearly in the space provided for each question and write your answers in the spaces provided. For questions which require units, give your answers in the units stated.

Do not  
write in  
this space

*All diagrams in this paper are not drawn to scale unless stated otherwise.*  
(20 marks)

- 
36. Amanda prepared a few jugs of fruit punch for a party.  
After the guests drank 6 l 533 ml of fruit punch, there was 2 l 467 ml of fruit punch left. Each jug contained 3 l of fruit punch.
- (a) What is the total volume of fruit punch prepared at the start of the party?

Ans: (a) \_\_\_\_\_ [2]

- (b) How many jugs of fruit punch did she prepare?

Ans: (b) \_\_\_\_\_ [2]



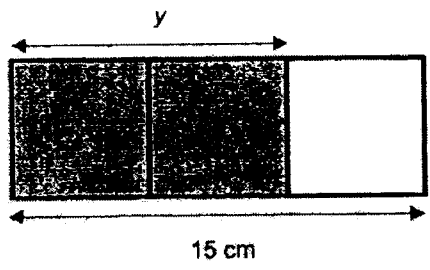
37. Sarah spent \$35.30 at a supermarket.  
Belle spent \$7.65 less than her.  
How much did both of them spend in all?

Do not  
write in  
this space

Ans: \_\_\_\_\_ [4]

38. 3 square cards of the same size are placed together to form a large rectangle shown below.

(a) Find the length of  $y$ .




Do not write in this space

Ans: (a) \_\_\_\_\_ [2]

(b) Find the area of the shaded parts of the rectangle.

Ans: (b) \_\_\_\_\_ [2]



39. Ray and Samy had 168 cupcakes.  
After Ray had given 15 cupcakes to Samy, he had 2 times as many  
cupcakes as Samy.  
How many cupcakes did Samy have at first?

Do not  
write in  
this space

Ans: \_\_\_\_\_ [4]

40. Mrs Tan has \$244 to buy some apples to make some pies.  
The apples are sold in packets of 8. Each packet costs \$6.  
What is the maximum number of apples can she buy?

Do not  
write in  
this space

Ans: \_\_\_\_\_ [4]

---

End of Paper

**EXAM PAPER 2022**

**LEVEL** : PRIMARY 3  
**SCHOOL** : ROSYTH SCHOOL  
**SUBJECT** : MATHEMATICS  
**TERM** : EOY

**BOOKLET A**

Q1	Q2	Q3	Q4	Q5	Q6	Q7
2	3	4	2	1	3	2
Q8	Q9	Q10	Q11	Q12	Q13	Q14
4	2	1	2	1	2	3
Q15						
4						

**BOOKLET B**

Q16. 7532

Q17. 7968

Q18. 1131

Q19. 1002

Q20. \$2.50

Q21. 1345

Q22. 7

Q23. 4581

Q24. a) 8

b) 16

Q25. 196

Q26. Friday

Q27. 11.45 pm.

Q28. 2 h 10 mins

Q29. a) 7

b) 0

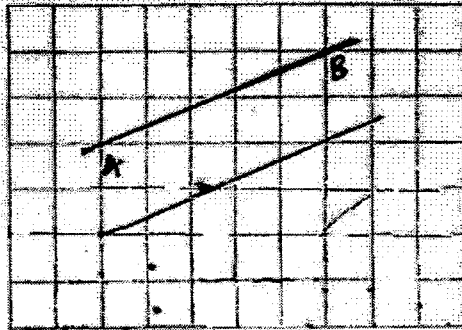
Q30. 117

Q31.  $\frac{1}{3}$ 

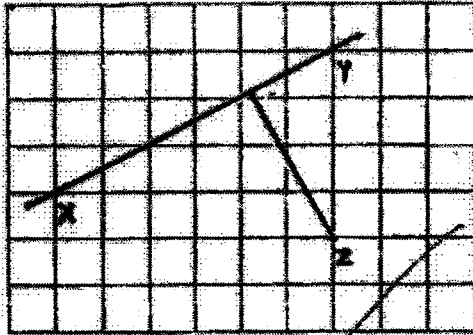
Q32. 1 kg 880 g

Q33.  $96 \text{ cm}^2$

Q34. a)



b)



Q35. 4

Q36. a)  $6533 + 2467 = \underline{9000 \text{ mt}}$

b)  $9000 + 3000 = \underline{3}$

Q37.  $35.30 - 7.65 = 27.65$   
 $35.30 + 27.65 = \underline{\$62.95}$

Q38. a)  $15 \div 3 = 5$   
 $5 \times 2 = \underline{10 \text{ cm}}$

b)  $10 \times 5 = \underline{50 \text{ cm}^2}$

Q39.  $15 + 15 + 15 = 4$

$168 - 45 = 123$

$123 + 3 = \underline{41}$

Q40.  $244 \div 6 = 40 \text{ R } 4$   
 $40 \times 8 = 320$