

SINGAPORE CHINESE GIRLS' SCHOOL  
MATHEMATICS CONTINUAL ASSESSMENT 2

2004

2004

Name: \_\_\_\_\_

Date: \_\_\_\_\_

Primary 4

Time: 1 hour 45 min

Parent's Signature: \_\_\_\_\_

**PART 1 (2 marks each)**

For each question, four options are given. One of them is the correct answer. Make your choice (1, 2, 3 or 4). Shade the correct oval (1, 2, 3 or 4) on the Optical Answer Sheet.

1. In which of the following is the digit 2 in the thousands place?

- |           |           |
|-----------|-----------|
| 1) 27 510 | 3) 10 129 |
| 2) 12 100 | 4) 5 211  |

2.  $48 \times 53 = 48 \times \square + 48 \times 3$

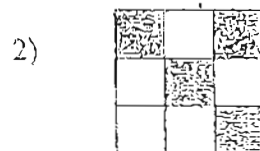
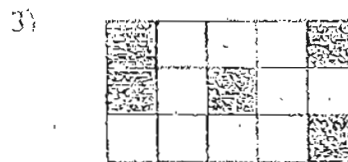
The missing number in the box is \_\_\_\_\_

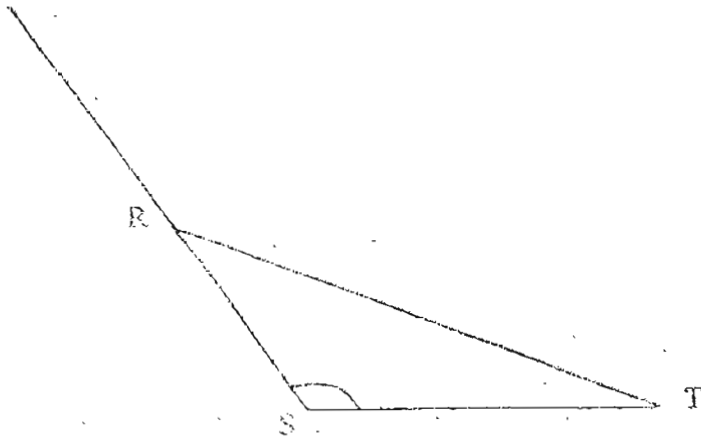
- |       |       |
|-------|-------|
| 1) 53 | 3) 48 |
| 2) 50 | 4) 8  |

3. Find the multiples of 6 which are between 30 and 60

- |                   |                   |
|-------------------|-------------------|
| 1) 36, 42, 48, 54 | 3) 32, 36, 40, 44 |
| 2) 33, 39, 45, 54 | 4) 18, 24, 36, 42 |

4. Which diagram below shows that less than  $\frac{1}{4}$  of the figure is shaded?





5. Measure  $\angle RST$ . It is \_\_\_\_\_<sup>o</sup>
- |                     |                     |
|---------------------|---------------------|
| 1) 140 <sup>o</sup> | 3) 125 <sup>o</sup> |
| 2) 132 <sup>o</sup> | 4) 55 <sup>o</sup>  |
- 
6. Express  $12\frac{4}{5}$  as a decimal.
- |          |          |
|----------|----------|
| 1) 12.8  | 3) 12.08 |
| 2) 12.45 | 4) 1.24  |
- 
7. What is the value of the digit 9 in the sum of 44 189 and 711?
- |         |       |
|---------|-------|
| 1) 9000 | 3) 90 |
| 2) 900  | 4) 9  |
- 
8. When \_\_\_\_\_ is added to 1 120, it becomes 1 275.
- |        |         |
|--------|---------|
| 1) 155 | 3) 2395 |
| 2) 395 | 4) 2405 |
- 
9. Which one of the following numbers is a common factor of 18 and 27?
- |      |      |
|------|------|
| 1) 9 | 3) 6 |
| 2) 8 | 4) 4 |

10. Find the product of 9 582 and 7 and then round it off to the nearest hundred.

1) 67 174

3) 67 074

2) 67 100

4) 67 000

The table below shows the prices of different types of cakes sold in a bakery.  
Use the information to answer Q11 and Q12.

Cakes	Pandan	Chocolate	Cheese	Fruit
Cost	\$2.50	\$3.00	\$4.30	\$6.60

11. Mother bought 2 Pandan cakes and a Fruit cake.

She paid \_\_\_\_\_ altogether.

1) \$15.70

3) \$9.10

2) \$11.60

4) \$5.00

12. She wanted to buy 3 chocolate cakes and 2 cheese cakes but she had \$7.

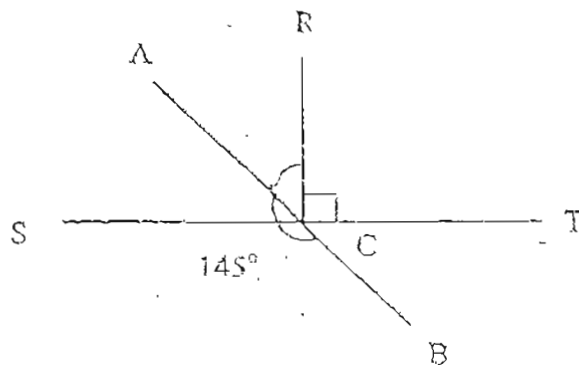
She needed \_\_\_\_\_ more.

1) \$17.60

3) \$10.60

2) \$11.90

4) \$8.30



13. ST and RC are straight lines.  $\angle RCT$  is a right angle.  
 $\angle ACR$  is \_\_\_\_\_<sup>o</sup>

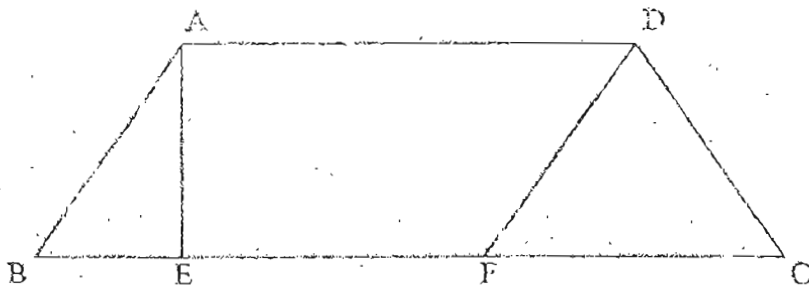
1) 75<sup>o</sup>

3) 55<sup>o</sup>

2) 60<sup>o</sup>

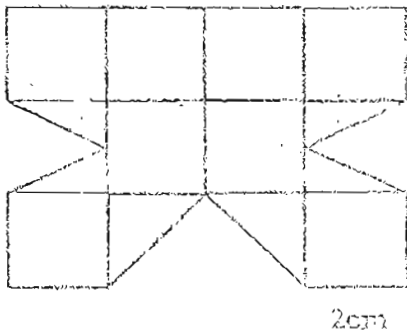
4) 40<sup>o</sup>

14. The figure below is not drawn to scale, AB is parallel to \_\_\_\_\_.



- |       |       |
|-------|-------|
| 1) DC | 3) AE |
| 2) BC | 4) DF |

15. What is the area of the figure below?



- |                       |                       |
|-----------------------|-----------------------|
| 1) 48 cm <sup>2</sup> | 3) 40 cm <sup>2</sup> |
| 2) 44 cm <sup>2</sup> | 4) 20 cm <sup>2</sup> |

16. The sum of 4.95 and  $5\frac{9}{100}$  is \_\_\_\_\_.

- |          |          |
|----------|----------|
| 1) 9.94  | 3) 10.95 |
| 2) 10.04 | 4) 19.05 |

17. Study the number pattern below.

22 125, 22 210, 22 145, 22 230, 22 165, 22 250, \_\_\_\_\_, 22 270

The missing number is \_\_\_\_\_.

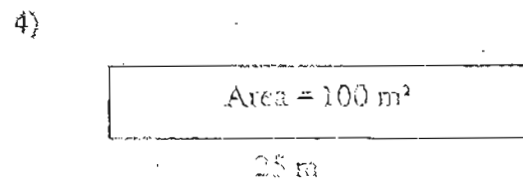
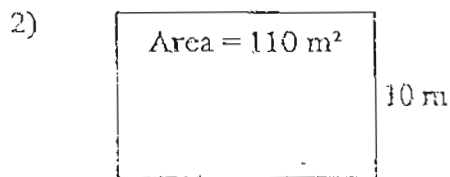

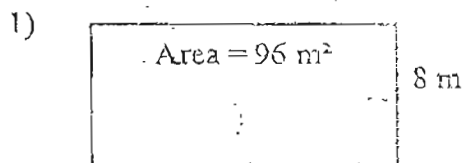
- |           |           |
|-----------|-----------|
| 1) 22 165 | 3) 22 315 |
| 2) 22 185 | 4) 22 335 |

18. Johnny spent  $\frac{3}{8}$  of his savings on a jacket. The jacket cost \$24.

He had \_\_\_\_\_ at first.

- |         |          |
|---------|----------|
| 1) \$8  | 3) \$64  |
| 2) \$18 | 4) \$192 |

19. Which one of the following rectangles has the biggest perimeter?



20. Jane bought 34.38 cm of string to make 9 pieces of ribbon. The length of each piece of ribbon is \_\_\_\_\_ cm.

- |         |          |
|---------|----------|
| 1) 3.82 | 3) 0.382 |
| 2) 38.2 | 4) 0.082 |

SINGAPORE CHINESE GIRLS' SCHOOL  
MATHEMATICS CONTINUAL ASSESSMENT 2  
2004

Name: \_\_\_\_\_  
Primary 4

Date: \_\_\_\_\_  
Time: 1 hour 45 min

**PART 2**  
Section A (2 marks each)

Write your answers in the spaces provided. All working must be clearly shown.  
Give your answer in the units stated.

1. The multiples of \_\_\_\_\_ are 24, 30, 36, 42 .....

Ans: \_\_\_\_\_  
\_\_\_\_\_

2. Round off the product of 242 and 12 to the nearest hundred.

Ans: \_\_\_\_\_  
\_\_\_\_\_

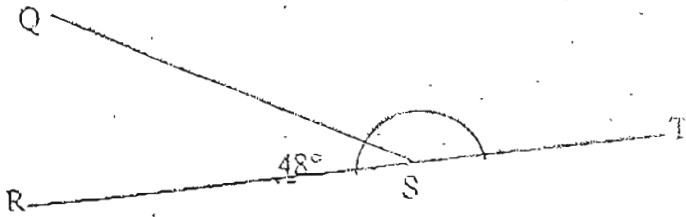
3. Arrange the following fractions in descending order.

$$\frac{3}{4}, 1\frac{1}{8}, \frac{5}{3}, \frac{8}{4}$$

Ans: \_\_\_\_\_  
\_\_\_\_\_



4. In the diagram below, RT is a straight line.  $\angle RSQ = 48^\circ$ .  
 $\angle QST$  is \_\_\_\_\_<sup>o</sup>



Ans: \_\_\_\_\_<sup>o</sup>

---

5. Express 3 hundreds, 4 tens, 5 tenths and 6 hundredths in decimals.

Ans: \_\_\_\_\_

---

6. Express the value of the digit '8' in 100.83 as a fraction in its simplest form.


Ans: \_\_\_\_\_

---

7.  $649 \div 11 = \underline{\hspace{2cm}} + 50$

Ans: \_\_\_\_\_

---



8. There are 468 boxes of strawberries at the supermarket. In each box, there are 33 strawberries. How many strawberries are there altogether?

Ans: \_\_\_\_\_

---

9. The population of Heartland estate was 7698. When 600 people moved to another estate, the population became \_\_\_\_\_. Round off the figure to the nearest thousand.

Ans: \_\_\_\_\_


---

10. Express 4 hours as a fraction of one day. Give your answer in its simplest form.


Ans: \_\_\_\_\_

---

11. Given that ABCD is a rectangle. Find  $\angle BDA$ .

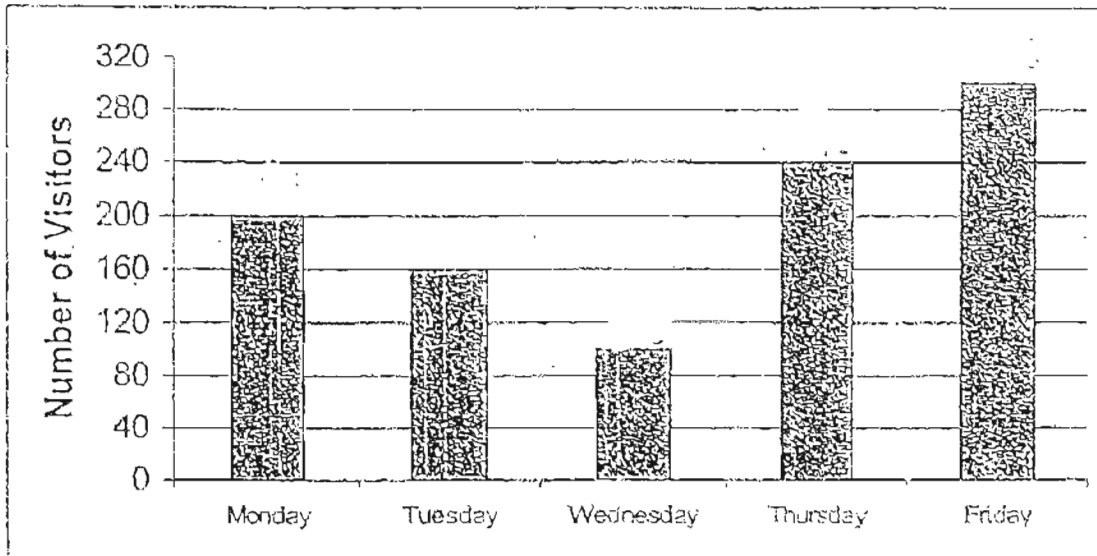


Ans: \_\_\_\_\_





The graph shows the number of visitors to the Science Centre over 5 days. Study the graph below and answer the Q12 and Q13.



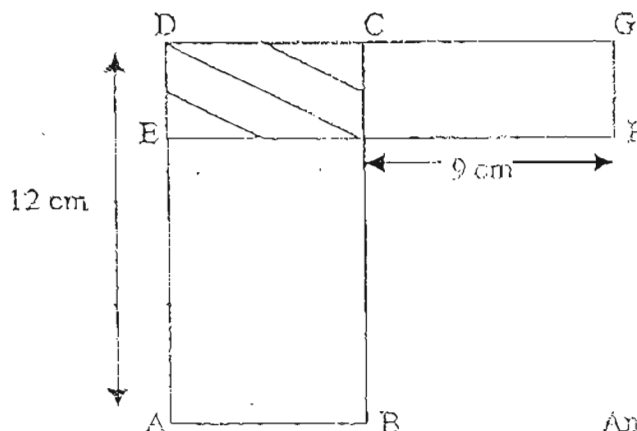
12. The total number of visitors on Tuesday and Friday was \_\_\_\_\_

Ans: \_\_\_\_\_


13. On which day were there twice as many visitors as on Wednesday?

Ans: \_\_\_\_\_

14. In the figure shown, ABCD and DEFG are rectangles. Their areas are  $60 \text{ cm}^2$  and  $28 \text{ cm}^2$  respectively. Find the area of the shaded part. The figure is not drawn to scale.



Ans: \_\_\_\_\_  $\text{cm}^2$



15. Find the value of  $4.08 \times 7$

Ans: \_\_\_\_\_

---

16. The sum of two numbers is 915. If one of the numbers is 8, what is the product of the two numbers?

Ans: \_\_\_\_\_

---

17. Linda bought 18 packets of wooden sticks. There were 2534 wooden sticks in each packet. She threw away 36 of them and repacked the rest into 9 packets. How many wooden sticks were there in each new packet?


Ans: \_\_\_\_\_

---

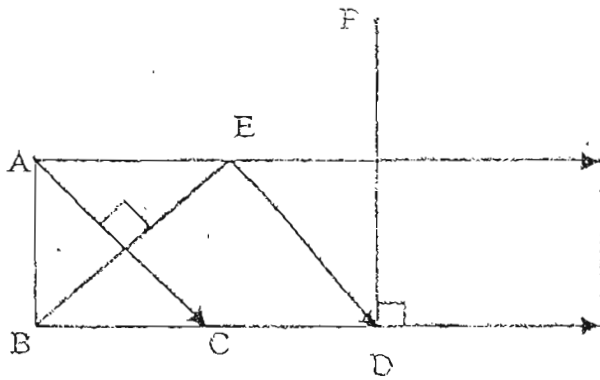
18. Amy had \$285. She spent  $\frac{1}{3}$  of it on a gown and  $\frac{1}{2}$  of the remainder on a bag. How much had she left?

Ans: \$ \_\_\_\_\_

---

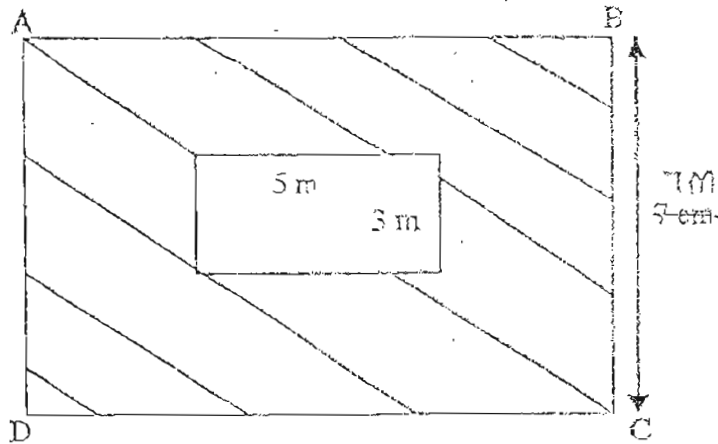


19. In the diagram below, ED is perpendicular to \_\_\_\_\_




Ans: \_\_\_\_\_

20. In the figure below, the area of the shaded part is  $76 \text{ m}^2$ . Find the length of AB.



Ans: \_\_\_\_\_ m



Name \_\_\_\_\_ ( )  
Primary 4

Date: \_\_\_\_\_

Section B (4 marks each)


All working and statements must be clearly shown.

21. Mrs. Ting bought 2 cupboards and 2 chairs from a furniture shop. The cost of a cupboard and a chair is \$ 246. How much must she pay?

Ans: \_\_\_\_\_

- 
22. The total length of 3 similar rods and 3 strings of equal length is 4 302 cm. Each string is twice as long as a rod. Find the length of each rod.

Ans: \_\_\_\_\_




23. Helen collected a bag of beads.  $\frac{1}{5}$  of the beads were purple,  $\frac{1}{4}$  of the remainder were yellow and the rest were 42 red beads. How many beads did she collect altogether?

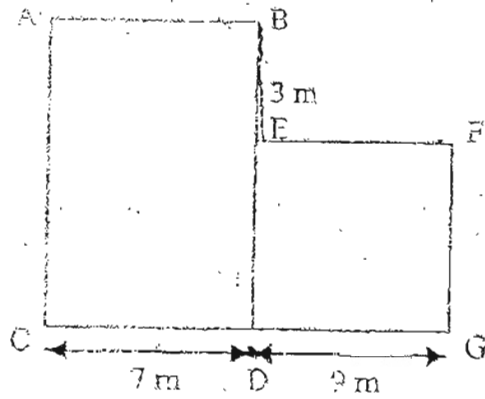
Ans: \_\_\_\_\_

- 
24. Miss Loo bought 30.05 m of cloth. After sewing 2 curtains and 4 cushion-covers, she had 9.65 m of cloth left. Each curtain required 2.2 m of cloth. How many metres of cloth did she use for each cushion-cover?

Ans: \_\_\_\_\_



25. The figure below represents a plot of land. ABCD is a rectangle and DEFG is a square.



- a) What is the perimeter of the plot of land?
- b) If  $1 \text{ m}^2$  of grass costs \$25, how much will it cost to patch up the plot of land with grass?

Ans: (a) \_\_\_\_\_

(b) \_\_\_\_\_

Have you checked your work?

