



Nan Hua Primary School
Primary 4 Science
Term 1 Weighted Assessment 2022

Marks	
Section A:	/10
Section B:	/10
Total:	/20

Name: _____ ()

Class: Primary 4S _____

Date: _____

Duration: 30 minutes

Parent's Signature: _____

Answer all questions.

Section A: (5 x 2 marks = 10 marks)

For each question from 1 to 5, four options are given. One of them is the correct answer. Make your choice (1, 2, 3 or 4) and write your answer in the bracket provided.


1 Which of the following is a light source?

(1)




A mirror

(2)




A diamond

(3)



The Moon

(4)



A phone (switched on)

()


1

[Turn over]





扫描全能王 创建

- 2 A torch is used to shine on a cup from different directions.



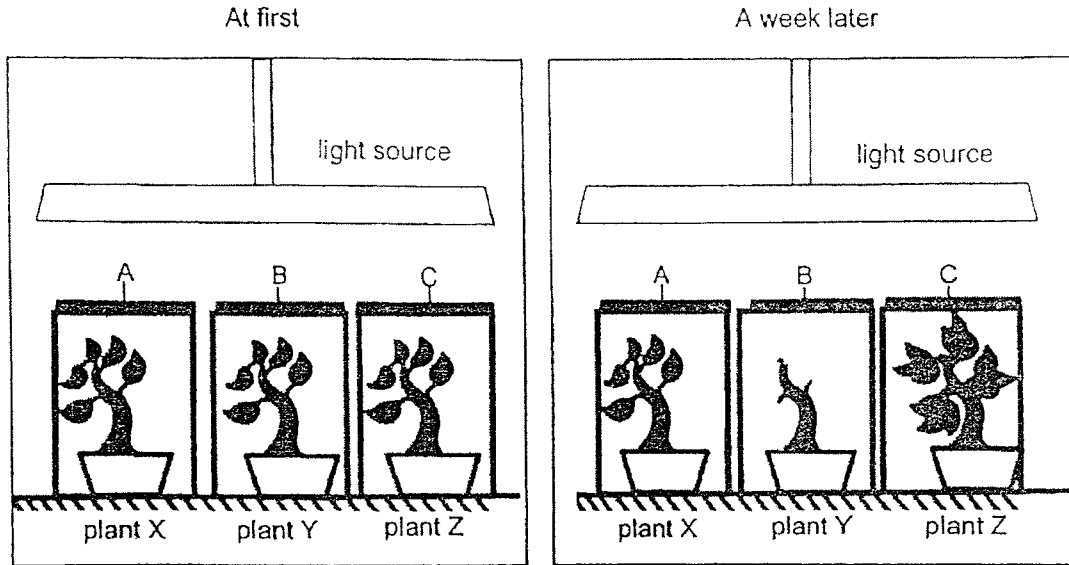
Which of the shadows shown below is not a possible shadow cast by the cup?



()



- 3 The diagrams below show what happened to three identical plants after the light source was blocked by three different materials, A, B and C. The plants were given the same amount of water for a week.




Which of the following best describes the property of materials A, B and C?

	Property of the material		
	Allows most light to pass through	Allows some light to pass through	Does not allow light to pass through
(1)	A	B	C
(2)	A	C	B
(3)	C	A	B
(4)	C	B	A

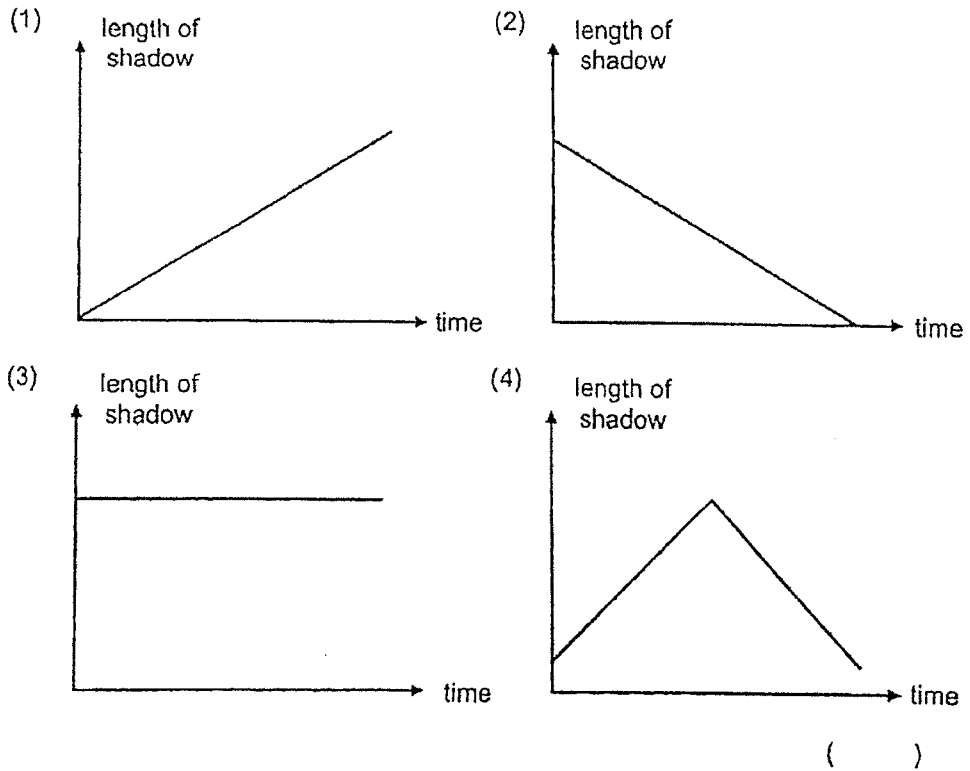
()



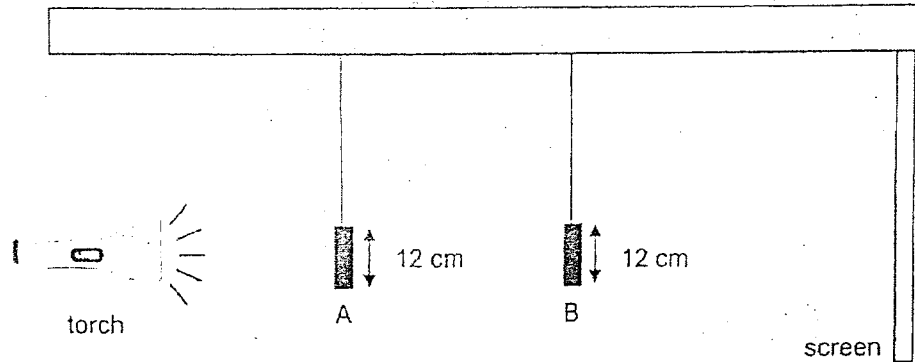
4 Tom is walking under a street lamp at night as shown below.




He walks from position A to position B and then back to position A in a straight line. Which graph shows how the length of his shadow changes during this time?



- 5 The set-up below shows light shining on two wooden objects, A and B, which are of the same height. They are placed at different distances from the torch as shown below.

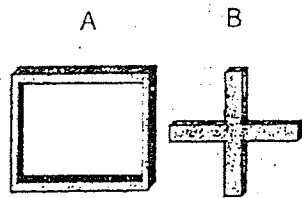


The diagram below shows the shadow of the objects on the screen.

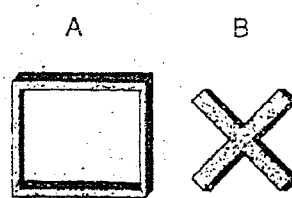


Which are objects A and B?

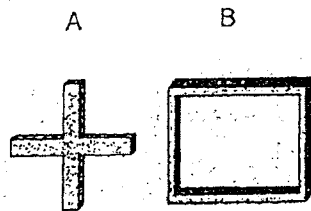
(1)



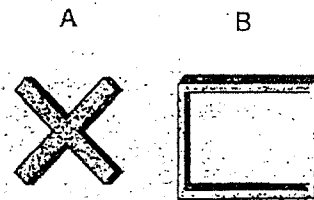
(2)



(3)



(4)



()

Total score for section A	10
---------------------------	----

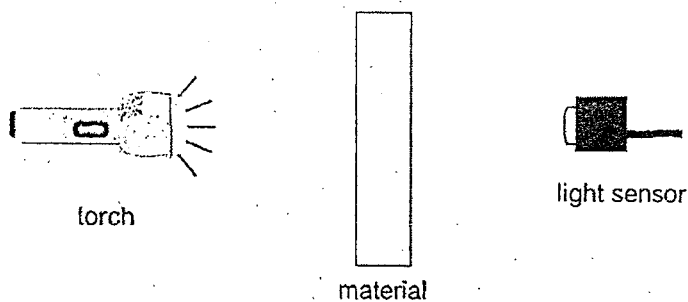
[Turn over]



Section B: Structured questions (10m)

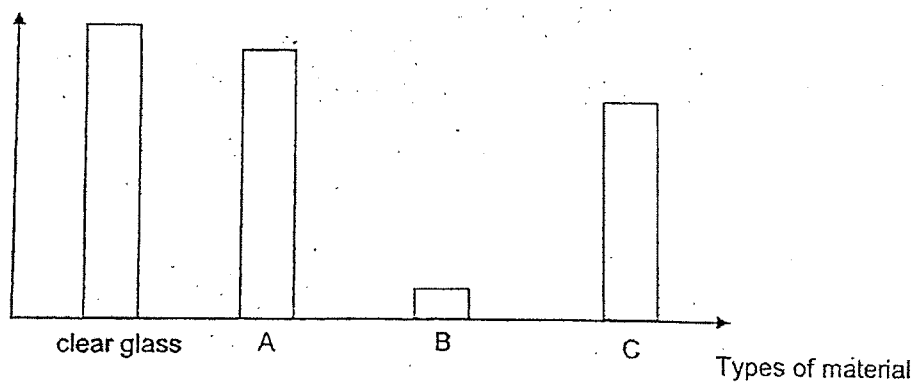
For questions 6 to 8, write your answers in the space provided. The number of marks available is shown in brackets [] at the end of each question or part question.

- 6 David wanted to find out how much light could pass through three different materials, A, B and C. He placed each material, one at a time, between a torch and a light sensor as shown in the set-up below. The experiment was conducted in a dark room.



The amount of light that passed through each material was recorded in the graph below.

Amount of light detected (units)



- (a) Identify the changed (independent) variable in this experiment.

[1]


Score	1
-------	---



(b) The diagram below shows a car.


[2]

windscreen



Which material, A, B or C, cannot be used to make the windscreen of a car?
Explain your answer.

7 The diagram below shows a girl reading a book. Two light rays, A and B, are drawn.



(a) Circle the light ray below that allows the girl to see the words in the book. [1]

light ray A

/

light ray B

Score	3
-------	---

[Turn over]



(b) Mr Ang installed a glass door at the staffroom as shown in diagram A. He realised that several teachers had almost accidentally walked into the glass door. He then placed a strip of sticker across the glass door as shown in diagram B.




Diagram A



Diagram B


How did placing the strip of sticker across the glass door helped prevent teachers from walking into it? [2]

Score	2
-------	---

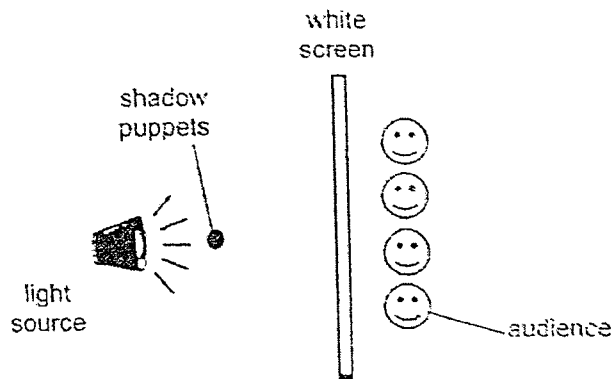
[Turn over]



8 William puts up a shadow puppet show in the hall during the Mid-Autumn Festival.



The diagram below shows where the shadow puppets were placed during the show.



(a) Describe the property of the material used to make the screen in order for the audience to see the shadows on it. [1]

(b) Without moving the light source and the screen, what must William do if he wants to create a bigger shadow on the screen? [1]

Score	2
-------	---

[Turn over]



- (c) While keeping the position of the puppet to be the same, William replaced the bulb of his light source with a brighter bulb.

The size of his puppet's shadow would _____.

Circle the correct answer to complete the statement above. [1]

increase / decrease / remain the same

- (d) William wanted to find out how the length of the shadow formed by a puppet changed when he shifted the position of the light source.

He measured the length of the shadow cast on the screen without changing the puppet's position as shown in the table below.

Distance of light source from the screen (m)	Length of shadow (cm)
1.0	30
1.3	26
1.6	21
1.9	15

What is the relationship between the distance of the light source from the screen and the length of the shadow? [1]

Score	2
-------	---

~End of Paper~





扫描全能王 创建

SCHOOL : NAN HUA PRIMARY SCHOOL

LEVEL : PRIMARY 4

SUBJECT : SCIENCE

TERM : 2022 WA1

Q 1	Q2	Q3	Q4	Q5
4	1	3	4	4

Q6)	<p>a) Types of material.</p> <p>b) The amount of light detected is least. Material B allows the least amount of light to pass through so the driver will not be able to see the road clearly.</p>
Q7)	<p>a) light ray B</p> <p>b) The strip on the glass door is opaque and does not allow light to pass through when the light shines on the strip and is reflected back to the teachers, so they will see sticker on the glass door.</p>
Q8)	<p>a) translucent</p> <p>b) William must put the shadow puppet nearer to the light source.</p> <p>c) Remain the same</p> <p>d) When the distance of light source from the screen increase, the length of the shadow decreases.</p>

