

Ai Tong School  
P5 Mathematics  
2024 Term 1 Review

Name: \_\_\_\_\_ (      )      Date: \_\_\_\_\_

Class : 5 \_\_\_\_\_      Marks: \_\_\_\_\_ /25

Duration: 35 min      Parent's signature: \_\_\_\_\_

**Follow all instructions. Answer all questions.**  
**You are NOT allowed to use a calculator.**

**Section A**

Questions 1 to 5 carry 1 mark each. Write your answers in the spaces provided.  
For questions which require units, give your answers in the units stated. (5 marks)

- 1 Write five million, twenty thousand and six hundred in numerals.

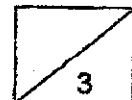
Ans: \_\_\_\_\_

- 2 There are 219 962 people at a concert.  
Round this number to the nearest hundred.

Ans: \_\_\_\_\_

- 3 In 4 321 698, the value of the digit 3 is \_\_\_\_\_.

Ans: \_\_\_\_\_



4 What is the value of  $8 + (5 \times 3 + 41) + 4$ ?

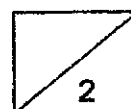
Ans: \_\_\_\_\_

---

5 Express  $\frac{7}{8}$  as a decimal.

Ans: \_\_\_\_\_

---



**Section B**

Questions 6 to 10 carry 2 marks each. Show your working clearly in the space provided for each question and write your answers in the spaces provided.

For questions which require units, give your answers in the units stated. (10 marks)

---

- 6 The mass of a can of soda is  $\frac{4}{5}$  kg. What is the total mass of 6 such cans?  
Express your answer as a mixed number in its simplest form.

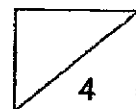
Ans: \_\_\_\_\_ kg

---

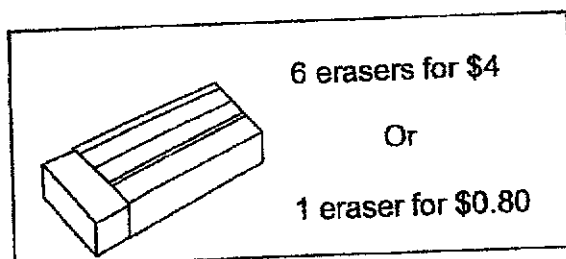
- 7 Miss Arifah bought  $\frac{5}{8}$  m of ribbon. She used  $\frac{2}{7}$  of it to tie a present.  
What is the length of ribbon she used to tie the present?  
Express your answer as a fraction in its simplest form.

Ans: \_\_\_\_\_ m

---



- 8 Erasers were sold in packets of 6 for \$4 or 1 eraser for \$0.80.



James bought 50 erasers.  
What was the least amount of money he spent on the erasers?

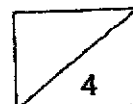
Ans: \$ \_\_\_\_\_

---

- 9 A number when multiplied by 30 has a product of 12 600.  
What is the quotient when this same number is divided by 6?

Ans: \_\_\_\_\_

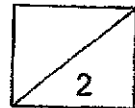
---



- 10 There are twice as many \$1 coins as \$2 notes in a bag.  
The total amount in the bag is \$276. How many \$2 notes are there?

Ans: \_\_\_\_\_

\_\_\_\_\_



**Section C**

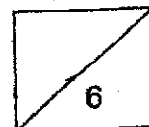
For questions 11 to 13, show your working clearly in the space provided for each question and write the answers in the spaces provided. The number of marks available is shown in the brackets [ ] at the end of each question or part-question. (10 marks)

- 11 Hannah bought some nuts. She used  $\frac{1}{3}$  of the nuts to bake some cookies and  $\frac{1}{4}$  of the nuts to bake bread. She was left with 600 g of nuts.  
What was the mass of nuts she bought?

Ans: \_\_\_\_\_ [3]

- 12 A book costs three times as much as a file.  
Cherie paid a total of \$63 for 1 book and 4 files.  
What is the total price of a book and a file?

Ans: \_\_\_\_\_ [3]



13 Ali spent  $\frac{2}{3}$  of his money on pens,  $\frac{3}{5}$  of the remainder on toys and saved the rest.

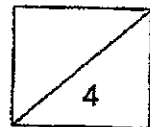
- (a) What fraction of his money did Ali spent on toys?  
Leave your answer in the simplest form.
- (b) Ali spent \$160 more on pens than the amount he saved.  
How much money did he save?

Ans: (a) \_\_\_\_\_ [1]

(b). \_\_\_\_\_ [3]

---

End of Paper  
— CHECK YOUR WORK CAREFULLY —







## ANSWER KEY

YEAR : 2024  
 LEVEL : PRIMARY 5  
 SCHOOL : AI TONG  
 SUBJECT : MATHEMATICS  
 TERM : TERM REVIEW 1

Q1	5020600	Q2	220000
Q3	300000	Q4	$8 + (5 \times 3 + 41) \div 4 = 22$
Q5	0.875	Q6	$\frac{4}{5} \times \frac{6}{1} = \frac{24}{5} = 4\frac{4}{5} \text{ kg}$
Q7	$\frac{5}{8} \times \frac{2}{7} = \frac{10}{56} \div 2 = \frac{5}{28} \text{ m}$	Q8	6 eraser for \$4 1 eraser for \$0.80 $8 \times 6 = 48$ $\$32 + 1.60 = \$33.60$
Q9	$420 \div 6 = 70$	Q10	69
Q11	$5u = 600$ $1u = 120$ $12u = 1440$ ANS : 1440g	Q12	$7u = 63$ $1u = 63 \div 7 = 9$ $3u = 9 \times 3 = 27$ $27 + 9 = 36$
Q13	a) $\frac{3}{15} = \frac{1}{5}$ b) $8u = 160$ $1u = 160 \div 8 = 2u$ $2u = 20 \times 2 = \$40$		

1  
END

