

**Anglo-Chinese School
(Junior)**



**WEIGHTED BITE-SIZED ASSESSMENT 2 (2024)
PRIMARY 5**

MATHEMATICS

Tuesday

7 May 2024

45 min

INSTRUCTIONS TO PUPILS

DO NOT TURN OVER THE PAGES UNTIL YOU ARE TOLD TO DO SO

Follow all instructions carefully.

There are 13 questions in this booklet.

Answer ALL questions.

The use of calculators is not allowed.

Name: _____ ()

Class: 5. ()

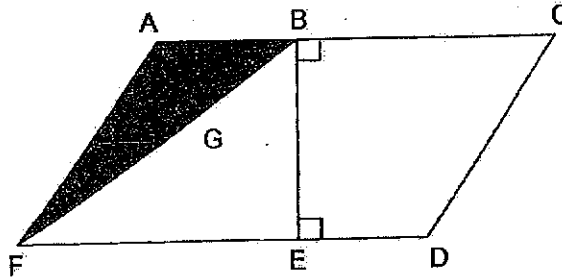
Parent's Signature: _____

Section	Possible Marks	Marks Obtained
A	7	
B	7	
C	11	
TOTAL	25	

This question paper consists of 9 printed pages. (Inclusive of cover page)

Questions 1 to 3 carry 1 mark each.
 Questions 4 to 5 carry 2 marks each.
 For each question, four options are given. One of them is the correct answer. Make your choice (1, 2, 3 or 4). (7 marks)

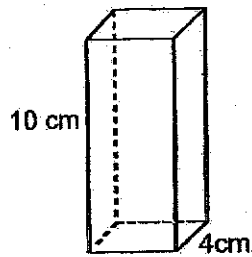
1. AB is the base of the shaded triangle ABF. Find its height.



- 1) AF
- 2) BE
- 3) BF
- 4) AG

()

2. What is the volume of a cuboid that has a square base of side 4 cm and height 10 cm?



- 1) 40 cm³
- 2) 100 cm³
- 3) 160 cm³
- 4) 400 cm³

()

2

Sub-Total:

3. $9 : 5 = \square : 55$

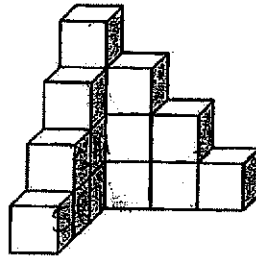
What is the missing number in the box?

- 1) 14
- 2) 45
- 3) 59
- 4) 99

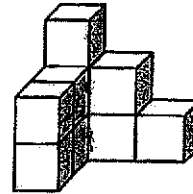
()

4. The 2 solids below are made up of identical unit cubes.

How many unit cubes need to be removed from Solid A to form Solid B?



Solid A



Solid B

- 1) 5
- 2) 6
- 3) 7
- 4) 8

()

5. Sulley and Mike had a total of \$92. Sulley had \$36. What is the ratio of the amount of money Sulley had to the amount of money Mike had?

- 1) 9 : 23
- 2) 9 : 14
- 3) 14 : 9
- 4) 14 : 23

()

3

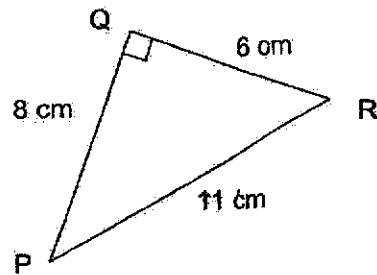
Sub-Total:

Questions 6 to 8 carry 1 mark each.

Questions 9 to 10 carry 2 marks each.

Show your working clearly in the space provided for each question and write your answers in the spaces provided. For questions which require units, give your answers in the units stated. (7 marks)

6. Find the area of the triangle PQR below.



Answer : _____ cm²

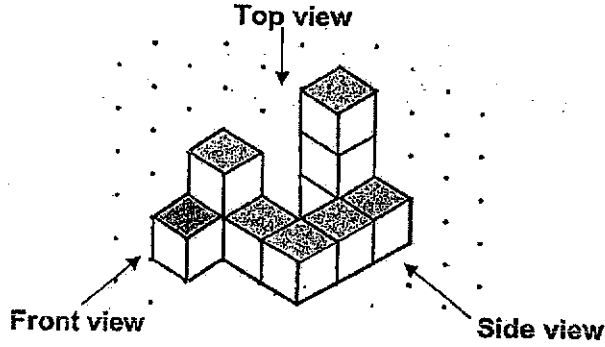
7. A box contains 32 red balls, 12 blue balls and 16 yellow balls. Find the ratio of the number of red balls to the number of blue balls and to the number of yellow balls. Give your answer in its simplest form.

Answer : _____


4

Sub-Total:

8. Felicia stacked 10 cubes and glued them together to form the solid below.



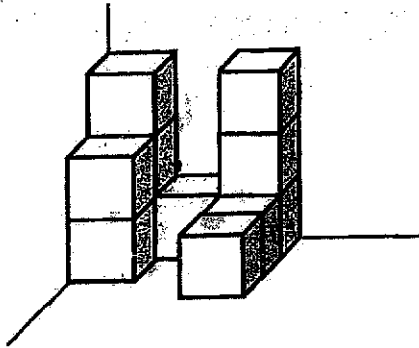
Draw the top view of the solid on the square grid below.



5

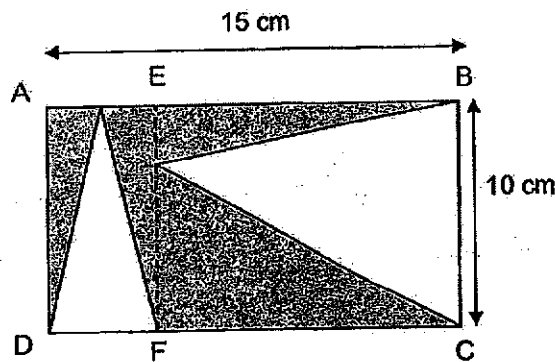
Sub-Total:

9. Charlie glued together 11 unit cubes to form the solid below. How many more unit cubes does Charlie need to form the smallest possible cube?



Answer : _____

10. In the figure below, ABCD is a rectangle. AB = 15 cm and BC = 10 cm. Dotted line EF is parallel to AD. What is the area of the shaded part?



Answer : _____ cm²

6

Sub-Total:

For questions 11 to 13, show your working clearly and write your answers in the spaces provided. The number of marks available is shown in brackets [] at the end of each question or part-question. (11 marks)

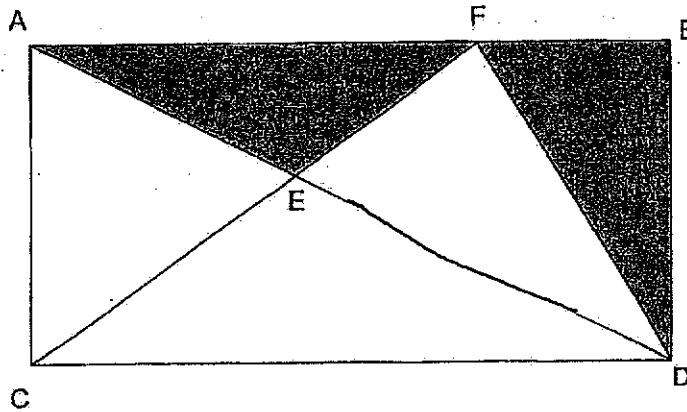
11. Josh, Amir and Gopal shared had a total of 480 stickers in the ratio 3 : 4 : 5.
How many more stickers does Gopal have than Josh?

Ans: _____ [3]

7

Sub-Total:

12. In the figure below, ABCD is a rectangle. The ratio of the area of triangle CED to the area of triangle CFD is 3 : 5.



- a) The area of triangle CFD is 350 cm^2 . Find the area of triangle CED.

Ans: (a) _____ [2]

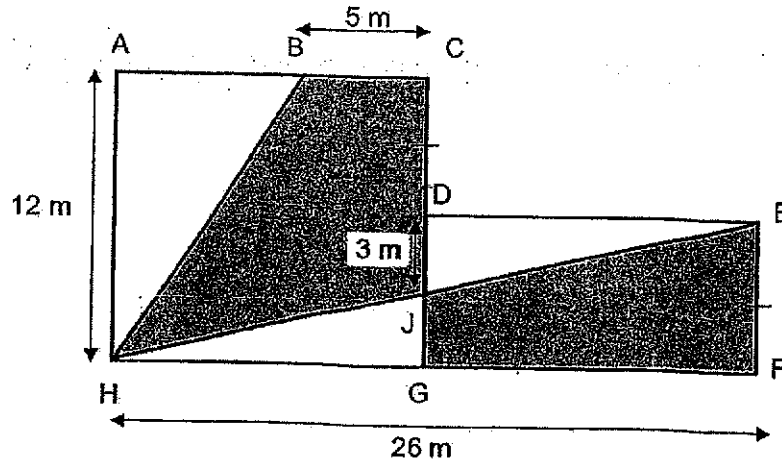
- b) Find the total area of the shaded part.

Ans: (b) _____ [2]

8

Sub-Total:

13. In the figure, ACGH is a square and DEGH is a rectangle. $CD = EF$, $BC = 5\text{ m}$ and $DJ = 3\text{ m}$. Find the area of the shaded part. (Figure not drawn to scale.)




Ans: _____ [4]

~ End of Paper ~

Sub-Total:

SCHOOL : ANGLO-CHINESE (JUNIOR) SCHOOL
 LEVEL : PRIMARY 5
 SUBJECT : MATHEMATICS
 TERM : 2024 WA2

Q1	Q2	Q3	Q4	Q5
2	3	4	2	2

Q6	$\frac{1}{2} \times 8 \times 6 = 24 \text{ cm}^2$
Q7	8 : 3 : 4
Q8	 <p>Top View</p>
Q9	No. of cubes needed to form smallest cube = $3 \times 3 \times 3 = 27$ No. of cubes more = $27 - 11 = 16$
Q10	$\frac{1}{2} \times 15 \times 10 = 75 \text{ cm}^2$
Q11	Total units = $3u + 4u + 5u = 12u$ $12u = 480$ $1u = 40$ $5u - 3u = 2u$ $2u = 2 \times 40 = 80$
Q12a	$5u = 350 \text{ cm}^2$ $1u = 70 \text{ cm}^2$ $3u = 3 \times 70 = 210 \text{ cm}^2$
Q12b	Triangle EFD = $2u, 350 \text{ cm}^2 =$ half the area of rectangle ABCD $2u = 2 \times 70 = 140 \text{ cm}^2$ Area of shaded part = $350 - 140 = 210 \text{ cm}^2$

Q13	Length GF & length DE = $26 - 12 = 14$ m Length CD & length EF = $12 \div 2 = 6$ m Area of triangle GHJ = $\frac{1}{2} \times 12 \times 3 = 18$ m ² Area of triangle DEJ = $\frac{1}{2} \times 14 \times 3 = 21$ m ² Area of triangle ABH = $\frac{1}{2} \times 12 \times 7 = 42$ m ² Area of rectangle DEFG = $14 \times 6 = 84$ m ² Area of square ACGH = $12 \times 12 = 144$ m ² Shaded area = $(144 + 84) - 18 - 21 - 42 = 147$ m ²
------------	---------------------------------------------------------------------------------------------------------------------------------------------------------------------------------------------------------------------------------------------------------------------------------------------------------------------------------------------------------------------------------------------------------------------------------------------------------------------------------------------------------------------------------