



**CATHOLIC HIGH SCHOOL  
END-OF-YEAR EXAMINATION 2012  
MATHEMATICS  
PRIMARY 2**

Name : \_\_\_\_\_ (       )

Class: Primary 2 \_\_\_\_\_

Date: 24 October 2012

Duration: 1 h 15 min

<b>Section A</b>	<b>40</b>
<b>Section B</b>	<b>40</b>
<b>Section C</b>	<b>20</b>
<b>Total Marks</b>	<b>100</b>

Parent's Signature: \_\_\_\_\_

There are 3 sections consisting of 20 pages in this paper.

Section A: Multiple-Choice Questions (MCQ)     20 x 2 marks

Section B: Open-Ended Questions                     20 x 2 marks

Section C: Story Sums                                     5 x 4 marks

**Section A: Multiple Choice Questions (20 x 2 marks)**

**Choose the correct answer and write the number 1, 2, 3 or 4 in the brackets.**

1. In 618, the digit 1 is in the \_\_\_\_\_ place.
- 1) ones
  - 2) tens
  - 3) hundreds
  - 4) thousands
- (      )
2. 3 groups of 9 is \_\_\_\_\_.
- (1) 6
  - (2) 12
  - (3) 3
  - (4) 27
- (      )
3. The sum of 196 and 429 is \_\_\_\_\_.
- (1) 233
  - (2) 373
  - (3) 515
  - (4) 625
- (      )
4. 165¢ can be written as \_\_\_\_\_.
- (1) \$0.165
  - (2) \$1.65
  - (3) \$16.50
  - (4) \$165
- (      )

5. The product of 10 and 5 is \_\_\_\_\_.

- (1) 5
- (2) 2
- (3) 15
- (4) 50

( )

6. Dylan, Ethan and Farid shared 24 sweets equally. How many sweets did each of them get?

- (1) 8
- (2) 21
- (3) 3
- (4) 27

( )

7. Which of the following has the same value as 718?

- (1) 7 hundreds and 18 tens
- (2) 7 hundreds 1 ten and 18 ones
- (3) 6 hundreds 1 ten and 8 ones
- (4) 6 hundreds 10 tens and 18 ones

( )

8. The capacity of a pail is 2 l. An empty fish tank can hold 16 l of water. How many pails of water are needed to fill up an empty fish tank completely?

- (1) 8
- (2) 14
- (3) 18
- (4) 32

( )

9.  $15 \times 3 =$  \_\_\_\_\_ groups of 3 + 8 groups of 3.

(1) 5

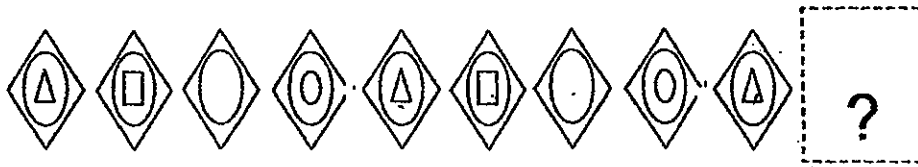
(2) 7

(3) 23

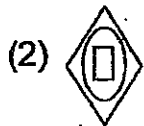
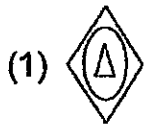
(4) 45

( )

10. Look at the pattern below carefully.

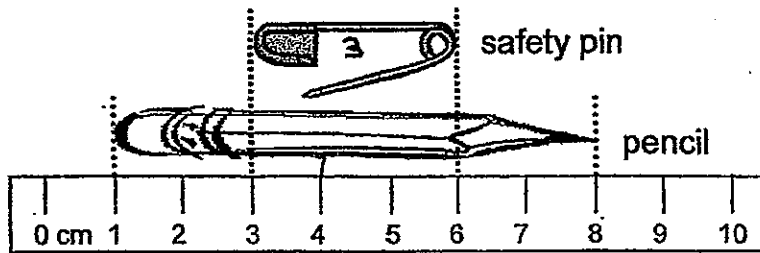


What is the missing pattern?



( )

11. Look at the picture.



The length of the pencil is \_\_\_\_\_ cm longer than the safety pin.

- (1) 10
- (2) 7
- (3) 3
- (4) 4


( )

12. Jalil has four \$5 notes, three 50¢ coins and two 5¢ coins. How much money does Jalil have?

- (1) \$5.55
- (2) \$9.00
- (3) \$21.60
- (4) \$50.55

( )

13. Milly packs 5 cupcakes and 3 pies into each box. She has packed 20 cupcakes into boxes. How many pies does she need to pack into the boxes?



- (1) 8  
(2) 12  
(3) 28  
(4) 4

( )

14. Which of the following fractions is the largest?

- 1)  $\frac{1}{10}$   
2)  $\frac{1}{2}$   
3)  $\frac{1}{6}$   
4)  $\frac{1}{4}$

( )

15. Jared and Damien shared 207 cards. If Damien has 169 cards, how many cards does Jared have?

(1) 38

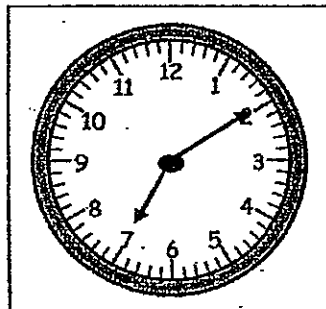
(2) 42

(3) 366

(4) 376

( )

16. The clock shows the time in the morning. It is 30 minutes faster than the actual time. What is the actual time?



(1) 6.40 p.m.

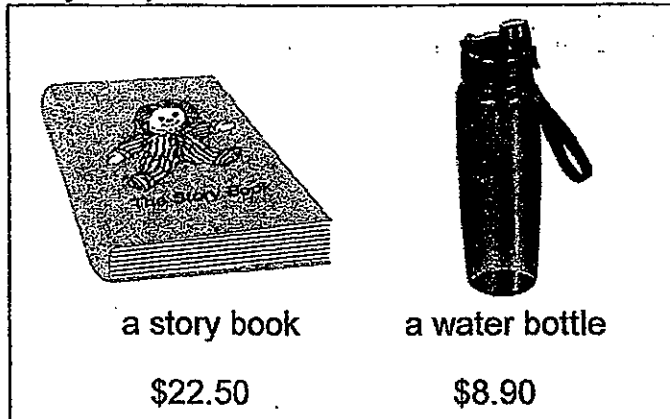
(2) 6.40 a.m.

(3) 7.40 p.m.

(4) 7.40 a.m.

( )

17. Study the pictures below.



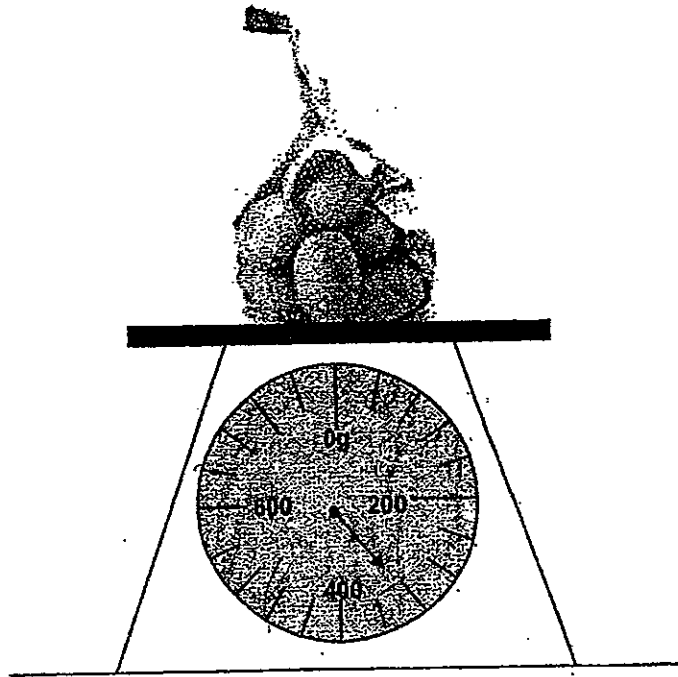
William bought the items above. He gave the cashier \$50. How much change would he receive?

- (1) \$13.60
- (2) \$18.60
- (3) \$31.40
- (4) \$81.40

(       )



18. Find the mass of the bag of potatoes.




- (1) 230 g
- (2) 260 g
- (3) 300 g
- (4) 320 g

( )



19. Study the pictures below. The pictures show 2 identical bottles of water and 4 identical cups of water. The bottles and the cups are filled completely with water.



What is the total volume of 6 bottles and 8 cups if the bottles and cups are filled completely with water?

- (1) 10 l
- (2) 11 l
- (3) 14 l
- (4) 26 l

( )

20. I am thinking of a 2-digit number. The product of the digits is 40. The digit in the ones place is 3 more than the digit in the tens place. What number am I thinking of?

- 1) 36
- 2) 47
- 3) 58
- 4) 85

( )

**Section B: Open-Ended Questions (20 x 2 marks)**

**Answer the following questions. Show your working clearly.**

21. Write the following in numerals.

a) Four hundred and eighteen

b) Three hundred and fifty


Ans: a) _____
b) _____

22. What is the largest 3-digit odd number that can be formed using the digits below?

5 , 9 , 0

Ans: _____
------------

23. Marcus has five times as many marbles as Kenneth. If Marcus has 40 more marbles than Kenneth, how many marbles does Kenneth have?



Ans: _____ marbles
--------------------

24. Salleh folded 7 paper cranes. Joshua folded thrice as many paper cranes as Salleh. How many paper cranes did Joshua fold?

Ans:          paper cranes

25.  $5 \times 7 = \underline{\hspace{2cm}} + 20$   
What is the missing number?

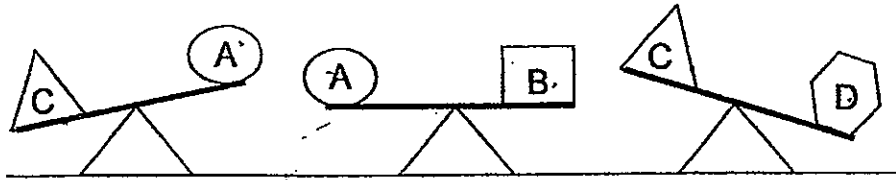
Ans:

26. Container A has 395 l of water. Container B has 20 l more water than Container A. Container C has 109 l of water. How much more water is there in Container B than Container C?

Ans:                  l



30. Look at the following balances. Which object has the greatest mass?



Ans: Object \_\_\_\_\_

31. Alexis shared a bar of chocolate with her friend. She ate  $\frac{1}{9}$  of it and her friend ate  $\frac{5}{9}$  of it. What fraction of the chocolate bar was left?

Ans: \_\_\_\_\_

32. Jenny and Rita have 30 hair clips. Rita has twice as many hair clips as Jenny. How many hair clips does Jenny have?


Ans: \_\_\_\_\_ hair clips

33. What is the missing number in the box?

$$\begin{array}{r} 7 \quad \boxed{\phantom{00}} \quad 6 \\ - 2 \quad 8 \quad 9 \\ \hline 4 \quad 2 \quad 7 \\ \hline \end{array}$$

Ans: \_\_\_\_\_

34. Janet has a block of wood as shown below. How many flat surfaces are there?



Ans: \_\_\_\_\_ flat surfaces


35. Kathy and Huda share some apples. Kathy has thrice as many apples as Huda. If Huda has 6 apples, how many more apples does Kathy have than Huda?

Ans: \_\_\_\_\_ apples



The picture graph shows the number of stamps four children have.

**Number of stamps**



36. How many more stamps does Ahmad have than Denis?

Ans: \_\_\_\_\_ stamps

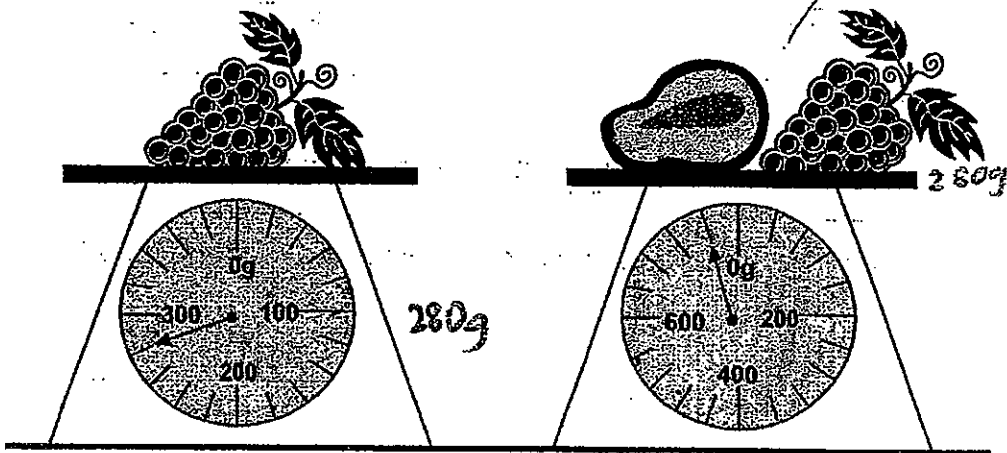
37. How many stamps must Calvin give to Bala so that they both have the same number of stamps?

Ans: \_\_\_\_\_ stamps

38. Seng is 7 years old. His brother is twice as old as him. Seng's father is 45 years old now. When his father is 50 years old, how old will Seng's brother be?

Ans: \_\_\_\_\_ years old

39. Look at the diagrams. Find the mass of the papaya.



Ans: \_\_\_\_\_ g

40. Study the pattern. The pattern is made up of squares and circles.

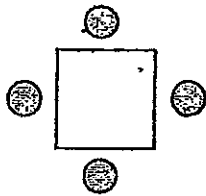


Figure 1

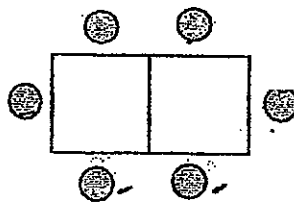


Figure 2

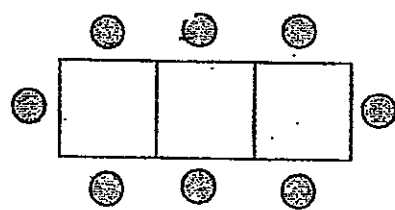


Figure 3

How many circles will there be in Figure 5?

Ans: \_ circles

**Section C: Story Sums (5 x 4 marks)**

**Answer the following questions. All workings and number sentences must be shown clearly.**

41. Peter collected 180 tokens. He collected 59 tokens more than Eric. How many tokens did the two boys collect altogether?

The two boys collected \_\_\_\_\_ tokens altogether.

42. Jackie has 250 fewer lollipops than Linda. If both of them have a total of 450 lollipops, how many lollipops does Jackie have?

Jackie has \_\_\_\_\_ lollipops.

43. Mandy had \$30. She spent all her money on some boxes of erasers. Each box of erasers cost \$5.

- a) How many boxes of erasers did she buy with the money she had?

She bought \_\_\_\_\_ boxes of erasers.

- b) There are 3 erasers in each box. She shared the erasers equally with her friend. How many erasers did each of them get?

Each of them got \_\_\_\_\_ erasers.

44. The total height of Alex, Bernard and Caleb is 340 cm. Bernard is 10 cm taller than Alex but 20 cm shorter than Caleb. How tall is Alex?

Alex is \_\_\_\_\_ cm tall.

45. There are 5 ducks and some goats in a farm. These animals have a total of 42 legs. How many goats are there?

There are \_\_\_\_\_ goats.

☺ END OF PAPER ☺

# **ANSWER SHEET**

## **EXAM PAPER 2012**

**SCHOOL : CATHOLIC HIGH SCHOOL**

**SUBJECT : PRIMARY 2 - MATHEMATICS**

**TERM : SA2**

Q1	Q2	Q3	Q4	Q5	Q6	Q7	Q8	Q9	Q10
2	4	4	2	4	1	4	1	2	2
Q11	Q12	Q13	Q14	Q15	Q16	Q17	Q18	Q19	Q20
4	3	2	2	1	2	2	4	2	3

Q21. a) 418

b) 350

Q22. 905

Q23. 10

Q24. 21 paper cranes

Q25. 15

Q26. 306 ¢

Q27. 675 m

Q28. 13

Q29. 9.00 pm

Q30. Object D

Q31.  $\frac{3}{9}$

Q32. 10 hair clips

Q33. 1

Q34. 6 flat surfaces

Q35. 12 apples

Q36. 16 stamps

Q37. 8 stamps

Q38. 19 years old

Q39. 480 g

Q40. 12 circles

Q41. The two boys collected 301 tokens altogether.

Q42. Jackie has 100 lollipops.

Q43. a) She bought 6 boxes of erasers.

b) Each of them got 9 erasers.

Q44. Alex is 100 cm tall.

Q45. There are 8 goats.