

Pei Chun Public School  
Semestral Assessment 2 – 2008  
Mathematics  
Primary 1

Name: \_\_\_\_\_ ( ) Date: 23 October 2008

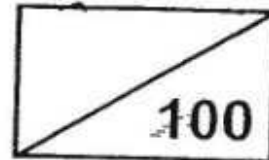
Class: Primary 1 \_\_\_\_\_

Parent's Signature: \_\_\_\_\_

Time: 1 h 30 min


Marks: \_\_\_\_\_

Maths Teacher: \_\_\_\_\_



**Section A ( 38 × 2 marks )**

1. Count and write the correct number of starfish in the box.



Write the numbers in words.

2. 39 \_\_\_\_\_



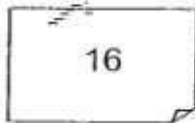
3. 54 \_\_\_\_\_

Do these sums.

4. 
$$\begin{array}{r} 56 \\ + 29 \\ \hline \\ \hline \end{array}$$

5. 
$$\begin{array}{r} 78 \\ - 32 \\ \hline \\ \hline \end{array}$$

6. Arrange these numbers in order. Begin with the smallest.



\_\_\_\_\_ , \_\_\_\_\_ , \_\_\_\_\_ , \_\_\_\_\_  
smallest

7.



John can change \_\_\_\_\_ \$5 notes with two \$10 notes.

8. Tick the box that shows 68¢.


|                          |                          |                          |
|--------------------------|--------------------------|--------------------------|
|                          |                          |                          |
| <input type="checkbox"/> | <input type="checkbox"/> | <input type="checkbox"/> |

9.  $3 + 3 + 3 + 3 + 3 = \boxed{\phantom{000}} \times 3$


10. A spider has 8 legs.


2 spiders have \_\_\_\_\_ legs.

11. Circle groups of 4.



There are \_\_\_\_\_ groups of 4.

12. Draw 3 groups of 8  and circle the groups.



13.




The time shown on the clock is \_\_\_\_\_

For questions 14 and 15, write the correct time shown on each clock. Write your answers using half past or o' clock.

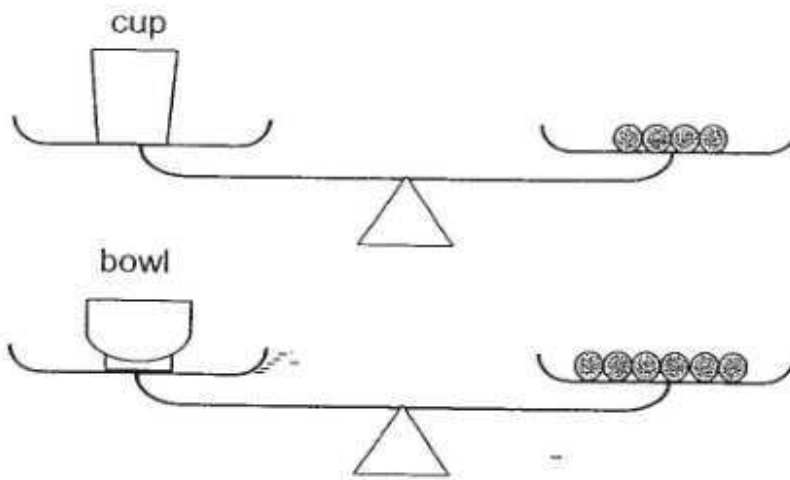
14.



15.



Look at the picture below and answer questions 16 and 17.



16. The mass of the cup and the bowl is \_\_\_\_\_.

17. The bowl is \_\_\_\_\_ heavier than the cup.

Do these sums.

18.

|   |   |   |
|---|---|---|
|   | 6 | 3 |
| + |   |   |
|   |   |   |
|   | 9 | 1 |
|   |   |   |

19.

|   |   |   |
|---|---|---|
|   |   |   |
| - | 3 | 7 |
|   |   |   |
|   | 4 | 9 |
|   |   |   |

20. 17 is \_\_\_\_\_ more than 9.

21.  $44 - 21 =$  \_\_\_\_\_ tens 3 ones

22.  $5 + 5 + 5 + 5 + 5 + 5 =$  \_\_\_\_\_ tens

23.  $85 = \underline{\hspace{2cm}} + 20 + 15$

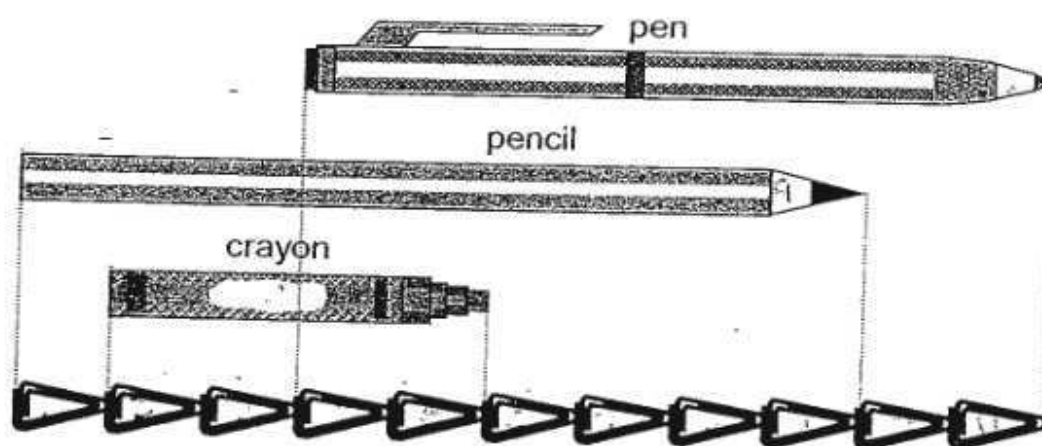
24.  $11 + 37 = 80 - \underline{\hspace{2cm}}$

25.  $2 + \underline{\hspace{2cm}} = 25 - 7$

26. Adam has two 50¢ coins. Boey has three 20¢ coins.

Adam has  $\underline{\hspace{2cm}}$  ¢ more than Boey.

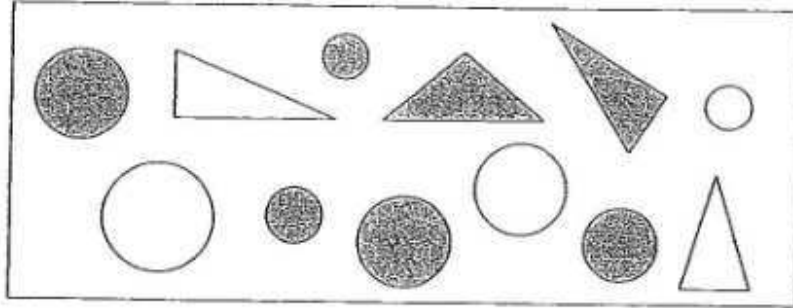
Look at the picture below and answer questions 27 and 28.



27. The  $\underline{\hspace{2cm}}$  is the shortest.

28. The pencil is  $\underline{\hspace{2cm}}$   longer than the pen.


29.




There are \_\_\_\_\_ more shaded circles than shaded triangles.

Look at the graph and answer questions 30, 31 and 32.

This graph shows the number of cookies eaten by four children at a party.



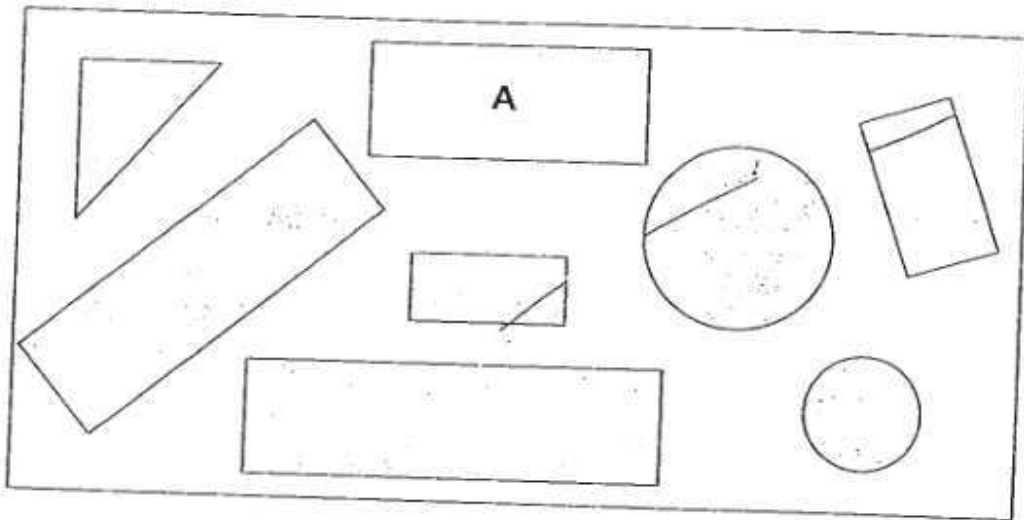
Each  stands for 1 cookie.

30. \_\_\_\_\_ ate 3 more cookies than Kai Xin.

31. \_\_\_\_\_ ate the least number of cookies.

32. The four children ate \_\_\_\_\_ cookies altogether.

33. Circle **all** the rectangles that are smaller than Rectangle A.



34. Siti was 7<sup>th</sup> in a queue. 2 people in the queue in front of her walked away. Which position is Siti in the queue now?



Siti is \_\_\_\_\_ in the queue now.

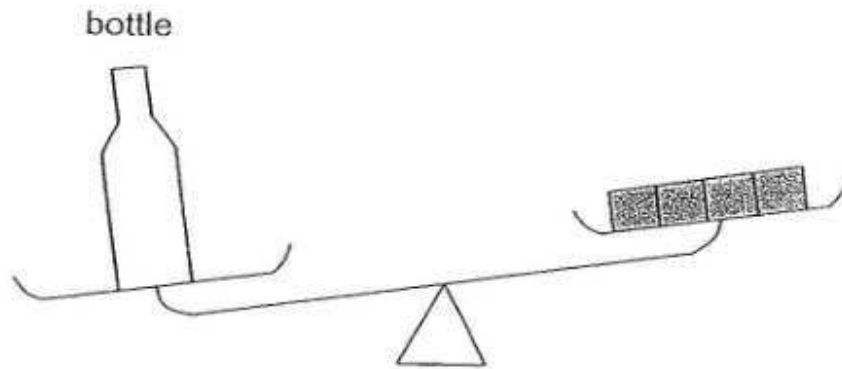
35. Adrian, Bala and Charissa share 18 sweets equally. How many sweets does each of them receive?



Each of them receives \_\_\_\_\_ sweets.




36.



What can be the mass of the empty bottle? Put a tick (✓) in the correct box.

|  |  |
|--|--|
|  |  |
|  |  |
|  |  |

37. Benny needs \$7 more to buy 2 toy trains. How much money does he have now?



He has \$ \_\_\_\_\_ now.

38. Complete the following pattern.

|    |    |    |    |    |
|----|----|----|----|----|
| 9  | 6  | 7  |    | 10 |
| 10 | 9  | 6  |    | 8  |
| 8  | 10 | 9  | 10 | 7  |
| 7  | 8  | 10 |    | 6  |
| 6  | 7  | 8  |    | 9  |


**Section B ( 6 × 4 marks )**

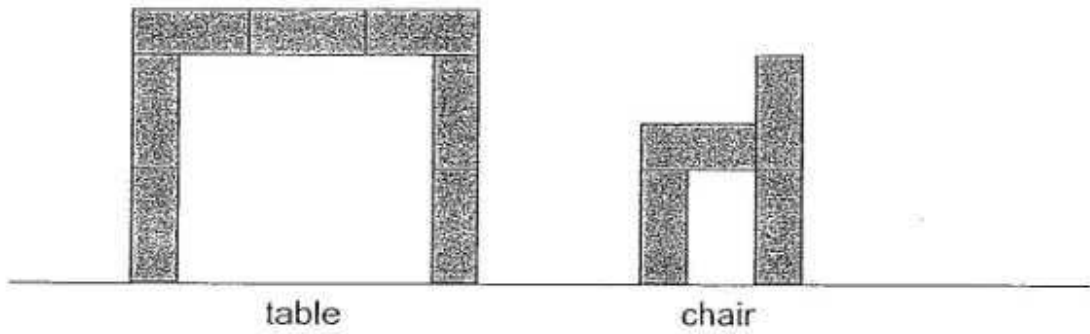
**Work out the problem sums below. All working, statements and answers must be clearly shown.**



39. Martin has 15 red marbles, 8 blue marbles and 2 green marbles.  
How many marbles does he have altogether?

40. Cuili bought 89 stamps.  
She used 17 of them.  
How many stamps had she left?

41. Peter has \$65.  
He has \$16 more than Moses.  
How much money does Moses have?

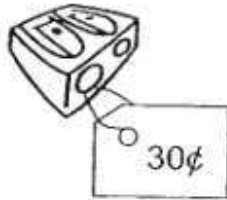
42. The diagrams below are made up of rectangles (  ).




- (a) How many rectangles (  ) are needed to make 3 chairs?
- (b) How many **more** rectangles (  ) are needed to make 3 chairs than 1 table?

43. Ali buys a sharpener, a pencil and a ruler.  
He has 40¢ left.  
How much money does he have at first?

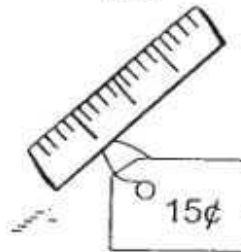
sharpener



pencil



ruler



44. Mr Lim is 47 years old.  
Jack is 28 years younger than Mr Lim.  
How old will Jack be 5 years later?

**End of Paper**

Set by : Ms Myyher Lim  
Vetted by: P1 Maths Committee Teachers

1

2

3

4

5

6

7

8

9

10

11

12

13

14





# ANSWER SHEET

EXAM PAPER 2008

SCHOOL : PEI CHUN PRIMARY SCHOOL  
SUBJECT : PRIMARY 1 MATHEMATICS

TERM : SA 2

1)27      2)thirty-nine      3)fifty-four      4)85      5)46

6)6,16,36,61      7)4      8) 

|  |   |  |
|--|---|--|
|  | ✓ |  |
|--|---|--|

      9)5      10)16

11)5      12)

|     |     |     |
|-----|-----|-----|
| △△△ | △△△ | △△△ |
| △△△ | △△△ | △△△ |
| △△  | △△  | △△  |

13)half past 6      14)half past 11      15)9 o'clock      16)10

17)2      18)28      19)86      20)8      21)2      22)3      23)50

24)32      25)16      26)40      27)crayon      28)1      29)3      30)mani

31)Pam      32)22      33) 

|  |
|--|
|  |
|--|

|  |
|--|
|  |
|--|

      34)5<sup>th</sup>      35)6

36) 

|  |  |  |  |  |  |
|--|--|--|--|--|--|
|  |  |  |  |  |  |
|--|--|--|--|--|--|

      37)\$29

38) 

|   |
|---|
| 8 |
| 7 |
| 6 |

|   |
|---|
| 9 |
|---|

|    |
|----|
| 10 |
|----|

39) $15+8+2=25$   
He has 25 marbles altogether.

40) $89-17=72$   
Cuili has left 72 stamps now.

41) $65-16=49$   
Moses has 49 stamps now.

42)a)  $4 \times 3 = 12$

There are 12 rectangle to make 3 chairs.

b)  $12 - 7 = 5$

5 more rectangle are needed to make 3 chairs than 1 table.

43)  $40 + 30 + 10 + 15 = 95$

He had 95 cent at first.

44)  $47 - 28 + 5 = 24$

Jack will be 24 years old 5 year later.