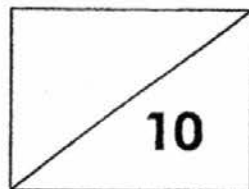



TAO NAN SCHOOL**HOLISTIC ASSESSMENT MATHEMATICS TEST (1) 2016**

Name: _____ ()


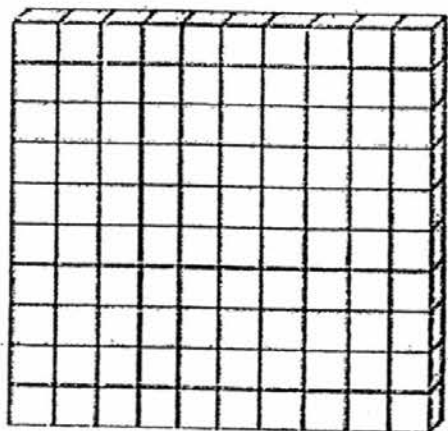
Class : Pr 2 ()

Duration : 25 minutesDate: 23 March 2016

Parent's signature : _____

Read the questions carefully.**Write the correct answers in the spaces provided. (1 mark each)**(1) How many  are there?

Write the number in the box.



(2) Write in words.

640

(3) In **278**, the value of the digit 2 is .

(4) In **476**, the digit 7 is in the place.

(5) **405** = hundreds tens ones

(6) 10 more than 699 is .

(7) Arrange the numbers in order.

Begin with the **smallest**.

243	329	926	298
------------	------------	------------	------------

smallest

- (8) Use the numbers below to form the **greatest 3-digit even** number.



The **greatest 3-digit even** number formed is

(9)

$$\begin{array}{r} 639 \\ + 85 \\ \hline \square \square \square \\ \hline \end{array}$$

(10)

$$\begin{array}{r} 500 \\ - 126 \\ \hline \square \square \square \\ \hline \end{array}$$

End Of Paper