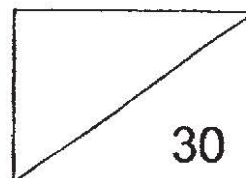


Red Swastika School
Primary 3
Milestone Check 2
Mathematics



Name: _____ ()

Date: _____

Class: _____

Duration: 40 minutes

Section A: 5 Questions (2 marks each)

Choose the correct answer and write its number in the brackets provided.


1. Which item is the heaviest?

Item	Mass
A	1 kg 95 g
B	2050 g
C	2 kg 5 g
D	550 g

- (1) A
(2) B
(3) C
(4) D

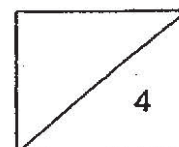
()

2. Jane needs 1 l of water.
The diagram below shows the amount of water she has.
How much more water does she need?

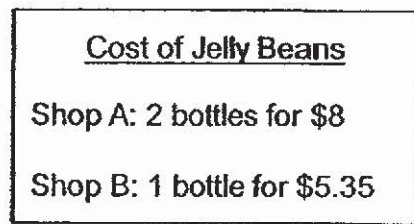


- (1) 35 ml
(2) 265 ml
(3) 735 ml
(4) 1265 ml

()




3. Look at the diagram below.



Banu bought 2 bottles of jelly beans in Shop A while his friend bought 2 bottles of jelly beans in Shop B. How much less did Banu pay for the 2 bottles of jelly beans than his friend?

- (1) \$2.65
 - (2) \$2.70
 - (3) \$10.70
 - (4) \$13.35
- ()

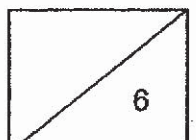
4. For every \$3 spent at a game shop, Tom can earn 5 stamps.
How much does Tom need to spend so that he can earn a total of 20 stamps?



- (1) \$12
 - (2) \$15
 - (3) \$60
 - (4) \$100
- ()

5. A pack of erasers cost \$6.80.
A box of pencils cost \$3.10 more than the pack of easers.
How much do a pack of erasers and a box of pencils cost altogether?


- (1) \$3.70
 - (2) \$9.90
 - (3) \$10.50
 - (4) \$16.70
- ()



Section B: 6 Questions (2 marks each)

Work out the following sums and write the answers in the spaces provided. Give your answers in the units stated.

6. Find the sum of money below.




Ans: \$ _____

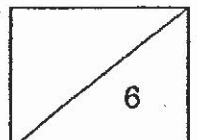
7. 3 km = _____ m + 1305 m

Ans: _____ m


8. Ruz wants to buy a toy which costs \$15.
The diagram below shows the amount of money Ruz has.
How much more money does she need?



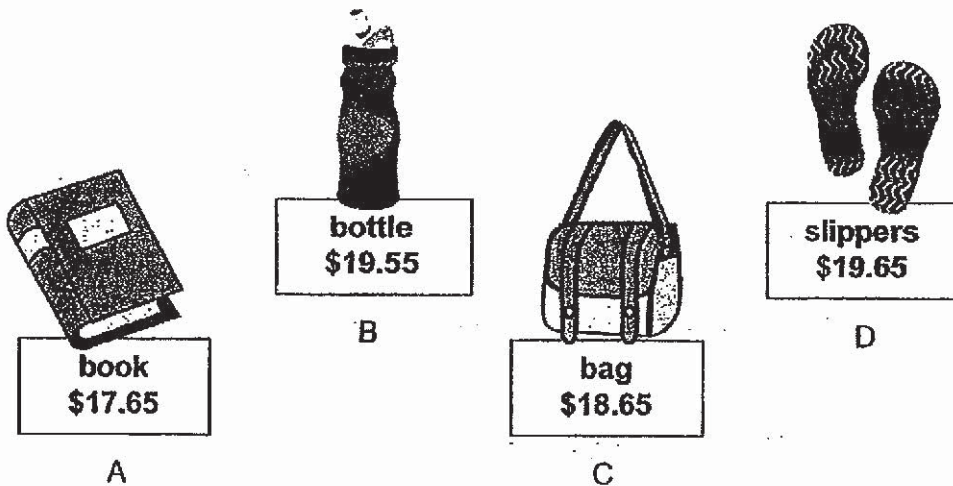
Ans: \$ _____



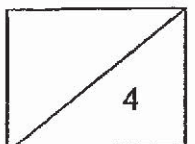
9. Arrange the items according to their masses from the heaviest to lightest.



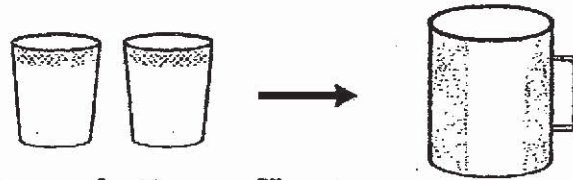
10. I had \$50 at first.
I gave my younger brother \$22.55.
I bought an item below and had \$8.80 left.
Which of the items, A, B, C or D, did I buy?



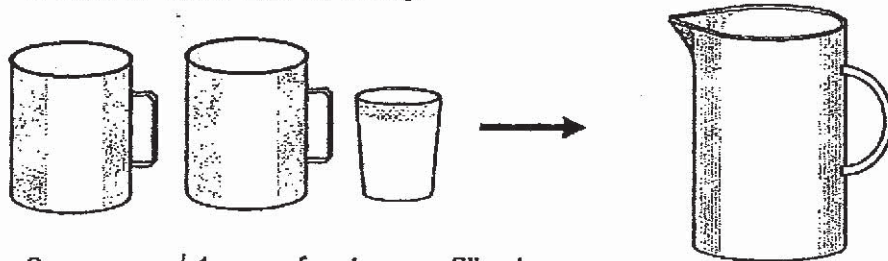
Ans: _____



11.



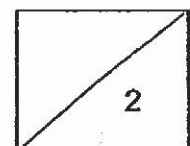
2 cups of water can fill a mug.



2 mugs and 1 cup of water can fill a jug.

How many cups of water can fill 3 jugs completely?

Ans: _____

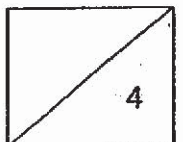


Section C: 2 Questions (4 marks each)


Do the following sums. Show your workings and statements clearly.

- 12 . Siti has 825 ml of juice left after filling 4 bottles.
 Each bottle contains 220 ml of juice.
 How much juice did she have at first? (Give your answer in l and ml.)

Ans: _____



13. Ahmad is 140 cm tall.
Ben is 115 cm tall.



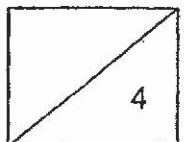
- (a) How tall is Chris?

Ans: _____

- (b) What is the total height of the three boys?
(Give your answer in centimetres.)

Ans: _____

End of Paper



SCHOOL : RED SWASTIKA PRIMARY SCHOOL

LEVEL : PRIMARY 3

SUBJECT : MATH

TERM : 2019 CA2

BOOKLET A

Q 1	Q2	Q3	Q4	Q5
2	3	2	1	4

BOOKLET B

Q6)	\$11.15
Q7)	3km = <u>1645</u> m + 1305m
Q8)	\$15 - \$9.05 = \$5.95
Q9)	Pineapple , banana , pear
Q10)	Item C
Q11)	$5 \times 3 = 15$
Q12)	$220 \times 4 = 880\text{ml}$ to fill up 4 bottles $880 + 825 = 1705 = 1\text{L } 705\text{ml}$
Q13)	$140 - 115 = 25$ $115 - 25 = 90\text{cm}$ b) $140 + 115 + 90 = 345\text{cm}$