

SA1



Rosyth School
Mid-Year Examination 2021
Mathematics
Primary 4

Name : _____ ()

Total  **100**Class : Pr 4 -Duration: 1h 45 minDate : 10 May 2021

Parent's Signature: _____

Instructions to Pupils:

1. Do not turn over this page until you are told to do so.
2. Follow all instructions carefully.
3. Answer all questions.
4. This paper consists of 3 parts: Sections A, B and C.
5. For questions 1 to 15 in Section A, shade your answers in the Optical Answer Sheet (OAS).

	Maximum Marks	Marks Obtained
Section A	30	
Section B	42	
Section C	28	
Total	100	

* This paper consists of 24 printed pages altogether (including the cover page).

This paper is not to be reproduced in part or whole without the permission of the Principal.

Section A (30 marks)

For questions 1 to 15, four options are given. One of them is the correct answer. Make your choice (1, 2, 3 or 4). Shade your answers on the Optical Answer Sheet. Each question carries 2 marks.

All diagrams in this paper are not drawn to scale unless stated otherwise.

1. In which of the following numbers does the digit 4 stand for 400?


- (1) 4695
- (2) 5314
- (3) 6240
- (4) 7489


2. What is the remainder when $8324 \div 7$?

- (1) 1
- (2) 2
- (3) 3
- (4) 4

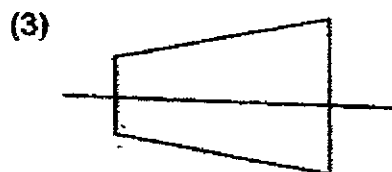

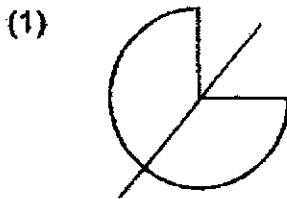
3. $234 \times 5 =$ _____

- (1) 1050
- (2) 1070
- (3) 1150
- (4) 1170

4. What fraction of the shapes in the box are  ?

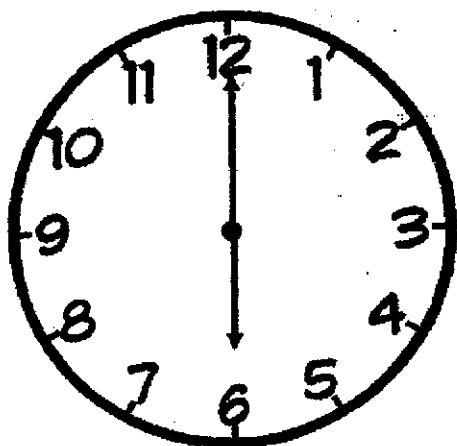


- (1) $\frac{4}{9}$
- (2) $\frac{5}{9}$
- (3) $\frac{4}{5}$
- (4) $\frac{5}{4}$
5. Which of the following figure is not symmetrical?



6. The time now is 6 p.m.

What time will it be if the minute hand moves $\frac{1}{2}$ turn clockwise?



- (1) 5.30 p.m.
- (2) 6.15 p.m.
- (3) 6.30 p.m.
- (4) 7.30 p.m.

7. _____ is a common factor of 14 and 35.

- (1) 7
- (2) 2
- (3) 14
- (4) 35

8. Isa has \$3210. Jim has three times as much as Isa. How much do they have altogether?

- (1) \$1070
- (2) \$3240
- (3) \$9630
- (4) \$12 840

9. How many one-fifths are there in 3 wholes?

(1) $\frac{3}{5}$

(2) $1\frac{2}{3}$

(3) 8

(4) 15

10. Mrs Tan bought $\frac{1}{3}$ kg of flour and Mrs Lee bought $\frac{1}{4}$ kg of flour. How much flour did they buy altogether?

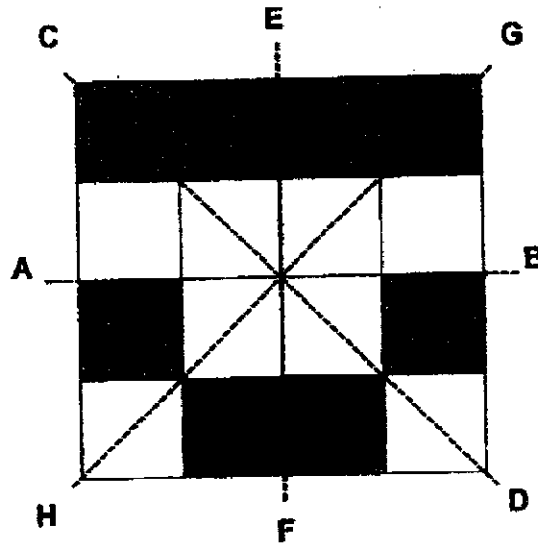
(1) $\frac{1}{12}$ kg

(2) $\frac{2}{7}$ kg

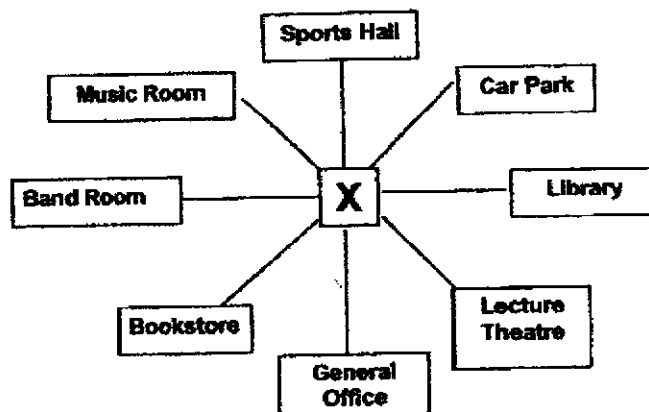
(3) $\frac{7}{12}$ kg

(4) $\frac{2}{3}$ kg

11. Which is the line of symmetry for the figure below?



- (1) Line AB
 (2) Line CD
 (3) Line EF
 (4) Line GH
12. Muthu is standing at point X and is facing the library.
 He turns in an anti-clockwise direction and ends up facing the general office.
 What is the angle of his turn?



- (1) 45°
 (2) 90°
 (3) 180°
 (4) 270°

13. I am a multiple of 4.
The digit in the ones place stands for 8.
The digit in the tens place is 4 times the digit in the hundreds place.
The digit 2 is in the thousands place
What number am I?
- (1) 2148
 - (2) 2418
 - (3) 8142
 - (4) 8241
14. 10 cones were placed at an equal distance apart in a straight line.
The distance between the first and fourth cone is 36 m.
Find the total distance between the first and last cone.
- (1) 9 m
 - (2) 12 m
 - (3) 108 m
 - (4) 120 m
15. There were 54 biscuits in a tin.
Both Peter and his brother ate $\frac{1}{3}$ of the biscuits. Peter ate two times as many biscuits as his brother. How many biscuits did Peter eat?
- (1) 6
 - (2) 12
 - (3) 18
 - (4) 36

Section B (42 marks)

Questions 16 to 36 carry 2 marks each. Write your answers in the spaces provided. Show your workings clearly. For questions which require units, give your answers in the units stated.

16. $72\ 039 = 70\ 000 + 2000 + \underline{\hspace{2cm}} + 9$

What is the missing number?

Ans: _____

17. Round 46 909 to the nearest hundred.

Ans: _____

Do not
write in
this space

18. Find the missing digit in the box.

$$\begin{array}{r}
 1357 \\
 \times \quad 6 \\
 \hline
 8 \boxed{?} 42 \\
 \hline
 \end{array}$$

Do not
write in
this space

Ans: _____

19. Find the product of 349 and 62.

Ans: _____

20. What is the quotient when 6473 is divided by 9?

Do not
write in
this space

Ans: _____

21. Write $\frac{17}{3}$ as a mixed number.

Ans: _____

22. Arrange $\frac{9}{6}$, $1\frac{1}{6}$ and $\frac{2}{3}$ in increasing order.

Ans: _____
(smallest) (greatest)

23. Find the value of $5 - \frac{2}{3}$.
Give your answer as a mixed number in the simplest form.

Do not
write in
this space

Ans: _____

-
24. Find the value of $\frac{2}{5}$ of 55.

Ans: _____

-
25. A number is 12 000 when rounded to the nearest thousand. What is the greatest possible value of the number?

Ans: _____

26. What is the second common multiple of 3 and 5?

Do not
write in
this space

Ans: _____

-
27. A shirt and 3 pairs of pants cost \$295. The shirt costs twice as much as each pair of pants. How much does a pair of pants cost?

Ans: \$ _____

-
28. Dave and Eva had an equal number of beads. After Eva gave 39 beads to Dave, how many more beads did Dave have than Eva?

Ans: _____

29. There are 240 tarts in a box. $\frac{5}{8}$ of them are mango tarts and the rest of them are durian tarts. How many durian tarts are there?

Do not
write in
this space

Ans: _____

-
30. Fiona had some stickers. She gave $\frac{4}{9}$ of the stickers to her cousin. If she had given her cousin 32 stickers, how many stickers did she have at first?

Ans: _____

31. Mrs Tan had $\frac{5}{6}$ m of ribbon. She cut away $\frac{1}{2}$ m. What is the length of the ribbon left? Give your answer as a fraction in its simplest form.

Do not
write in
this space

Ans: _____m

-
32. Zainul bought 16 curry puffs. He ate 3 curry puffs and gave 7 curry puffs to his friends. What fraction of the curry puffs had he left? Give your answer in its simplest form.

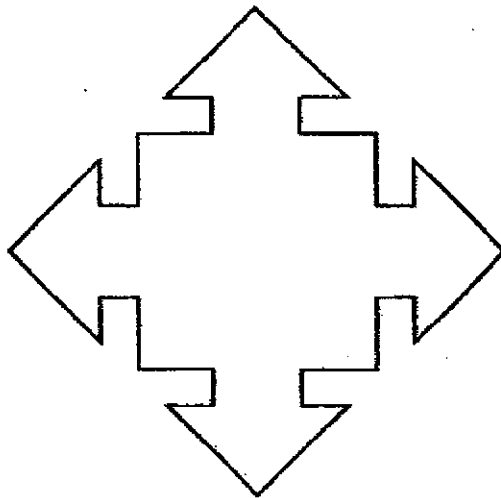
Ans: _____

33. Tom had \$360. He gave $\frac{2}{9}$ of it to charity. How much money had he left?

Do not
write in
this space

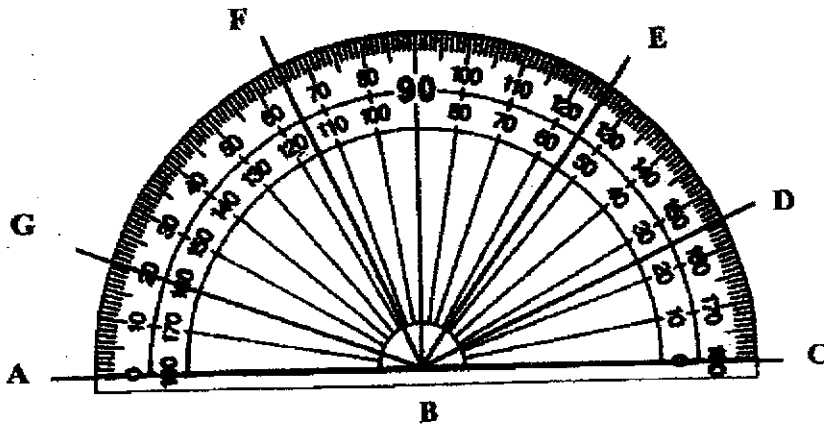
Ans: \$ _____

34. How many line(s) of symmetry are there in the figure below?



Ans: _____

35. Name the angle that is equal to 55° .



Do not write in this space

Ans: _____

36. James had 1 kg of sugar. He used $\frac{3}{8}$ kg of it to make some cookies and $\frac{1}{4}$ kg of it to make cupcakes. How much sugar had he left?

Ans: _____ kg

Section C (28 marks)

Questions 37 to 40 carry 3 marks each. Questions 41 to 44 carry 4 marks each. Show your working clearly and write your answers in the spaces provided. The number of marks available is shown in brackets [] at the end of each question or part-question.

37. The difference between two numbers is 5052. The greater number is four times the smaller number. What is the greater number?

Ans: _____ [3]

Do not
write in
this space

38. Boon Wei saved \$3270 in the past 11 months. He saved \$204 each month in the first 5 months. He saved the same amount each month for the last 6 months. How much did he save each month in the last 6 months?

Do not
write in
this space

Ans: _____ [3]

39. Study the figures below.

(a) Put a ✓ in the box if the figure is symmetric. [1]

Do not write in this space

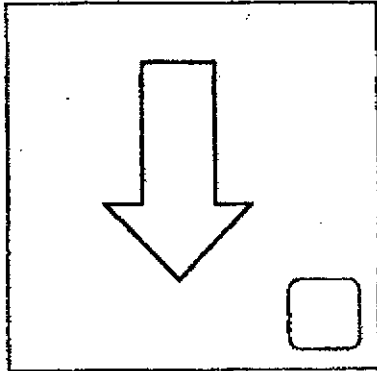


Figure A

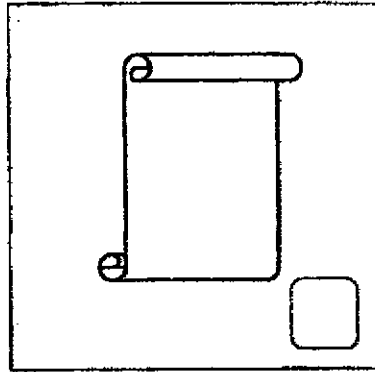
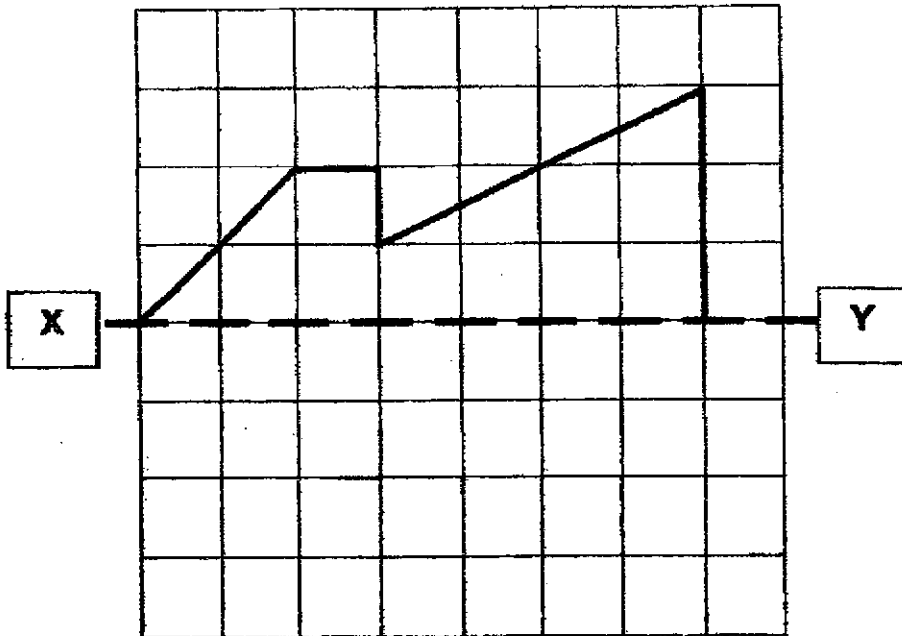


Figure B

(b) Complete the figure below with XY as the line of symmetry. [2]



40. There were two containers, A and B, which contained some sugar. There was $\frac{3}{5}$ kg of sugar in Container A. There was $\frac{1}{3}$ kg more sugar in Container A than Container B. What was the total amount of sugar in both containers?

Do not
write in
this space

Ans: _____

41. There were some beads in a box. $\frac{1}{5}$ of the beads were red, $\frac{7}{10}$ of them were blue and the rest were yellow.


(a) What fraction of the beads were yellow?

(b) If there were 45 yellow beads, how many red and blue beads were there altogether?

Do not
write in
this space

Ans: (a) _____ [2]

(b) _____ [2]



42. Ali and David have a total of 196 coins. Ali and Susan have a total of 676 coins. Susan has five times as many coins as David. How many coins does Ali have?

Do not
write in
this space

_____ [4]

43. Ken had 450 more bookmarks than Lynn. After Lynn gave away 39 bookmarks, Ken had four times as many bookmarks as Lynn. How many bookmarks did Ken have?

Do not
write in
this space

Ans: _____ [4]

44. Timmy wanted to buy some pizzas and ice-cream for a party. One pizza cost \$30 more than a tub of ice-cream. If Timmy bought 2 pizzas and 3 tubs of ice cream for \$110, what was the cost of a pizza?

Do not
write in
this space

Ans: _____

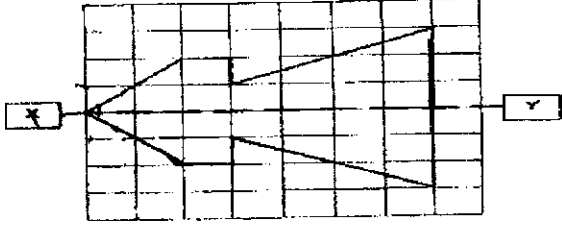
End of paper

ANSWER KEY

YEAR : 2021
 LEVEL : PRIMARY 4
 SCHOOL : ROYSTH SCHOOL
 SUBJECT : MATHEMATICS
 TERM : MID-YEAR EXAMINATION

Q1	4	Q2	1	Q3	4	Q4	1	Q5	4
Q6	3	Q7	1	Q8	4	Q9	4	Q10	3
Q11	3	Q12	4	Q13	1	Q14	3	Q15	2

Q16	30
Q17	46900
Q18	1
Q19	21638
Q20	719
Q21	$5\frac{2}{3}$
Q22	$\frac{2}{3}, 1\frac{19}{66}$
Q23	$4\frac{1}{3}$
Q24	$55 \div 5 = 11$ $11 \times 2 = 22$
Q25	12499
Q26	30
Q27	\$59
Q28	78
Q29	$240 \div 8 = 30$ $30 \times 3 = 90$
Q30	$32 \div 4 = 8$ $8 \times 9 = 72$
Q31	$\begin{array}{r} 5 \\ 6 \overline{) 12} \\ \underline{1 } \\ 2 \\ 10 \\ \underline{12 } \\ 4 \\ \underline{4 } \\ 0 \end{array}$ $\begin{array}{r} 10 \\ 12 \overline{) 120} \\ \underline{12 } \\ 0 \end{array}$ $\begin{array}{r} 10 \\ 12 \overline{) 120} \\ \underline{12 } \\ 0 \end{array}$
Q32	$16 - 3 - 7 = 6$ $\frac{6}{16} = \frac{3}{8}$
Q33	$9u \rightarrow 360$ $1u \rightarrow 360 \div 9 = 40$ $7u \rightarrow 40 \times 7 = \280

Q34	4
Q35	\angle CBF
Q36	$\frac{1}{4} = \frac{2}{8}$ $\frac{3}{8} + \frac{2}{8} = \frac{5}{8}$ $1 - \frac{5}{8} = \frac{3}{8} \text{ kg}$
Q37	$3u \rightarrow 5052$ $1u \rightarrow 5052 \div 3 = 1684$ greater number $\rightarrow 1684 \times 4 = 6736$
Q38	$204 \times 5 = 1020$ $6m \rightarrow 3270 - 1020 = 2250$ $1m \rightarrow 2250 \div 6 = \375
Q39	a) Figure A <input checked="" type="checkbox"/> b) 
Q40	$\frac{3}{5} = \frac{9}{15}$ $\frac{1}{3} = \frac{5}{15}$ $\frac{9}{15} + \frac{5}{15} = \frac{14}{15}$ $1 - \frac{14}{15} = \frac{1}{15} \text{ kg}$
Q41	$\frac{1}{5} = \frac{2}{10}$ $\frac{7}{10} + \frac{2}{10} = \frac{9}{10}$ $1 - \frac{9}{10} = \frac{1}{10} \text{ (a)}$ $45 \times 9 = 405$ a) $\frac{1}{10}$ b) 405 beads
Q42	$4u \rightarrow 676 - 196 = 480$ $1u \rightarrow 480 \div 4 = 120$ $A \rightarrow 196 - 120 = 76$
Q43	$3u \rightarrow 450 + 39 = 489$ $1u \rightarrow 489 \div 3 = 163$ Ken $\rightarrow 163 + 39 + 450 = 652$
Q44	$30 \times 2 = 60$ $5u \rightarrow 110 - 60 = 50$ $1u \rightarrow 50 \div 5 = 10$ $P \rightarrow 10 + 30 = \40