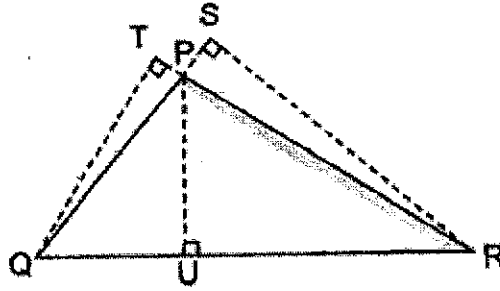


- 4) In the figure below, PRQ is a triangle. If PR is the base of triangle PRQ, what is its height?



- 1) PQ 2) PU
3) QT 4) QR

Section B

Questions 5 to 8 carry 2 marks each. Show your working in the space provided below each question. Write your answers in the spaces provided. (8 marks)

- 5a) 5 pizzas were shared equally among 4 children. What fraction of the pizzas did each child get?

Ans: (a) _____

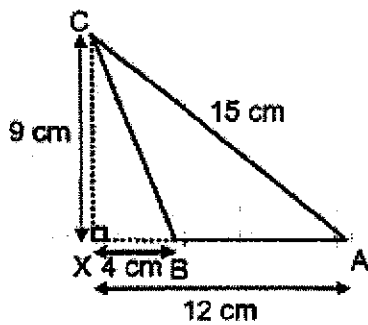
- b) Find the value of $\frac{2}{5} \times 19$. Give your answer in its simplest form.

Ans: (b) _____

- 6) Mrs Raja has $4\frac{5}{12}$ m of blue ribbon. She has $1\frac{1}{2}$ m more blue ribbon than red ribbon. How much red ribbon does Mrs Raja have?

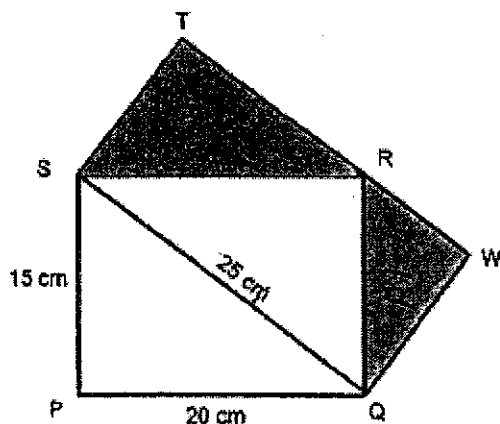
Ans: _____ m

- 7) Find the area of Triangle ABC.



Ans: _____ cm²

- 8) In the figure below, PQRS and SQWT are rectangles and TRW is a straight line. Find the area of the shaded part.



Ans: _____ cm²

END OF PAPER

SINGAPORE CHINESE GIRLS' SCHOOL (PRIMARY)
 PRIMARY 5 MATHEMATICS
 TERM 2 WEIGHTED ASSESSMENT
 FRACTIONS, AREA OF TRIANGLES & VOLUME

Name: _____ ()

Date: _____

Class: Primary 5

Duration: 25 minutes

Calculators are allowed for this paper.**Section C**

For questions 9 to 12, show your working clearly in the space provided below each question. All steps should be clearly shown. Write your answers in the spaces provided. The number of marks for each question is indicated in brackets [] at the end of each question or part question. (14 marks)

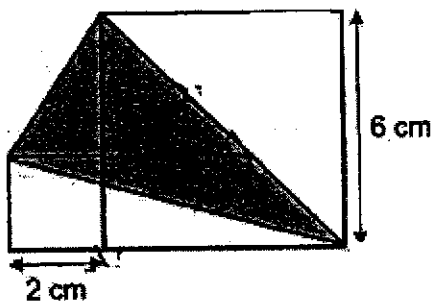
- 9) Mr Tan had 2850 apples and pears. After he sold $\frac{1}{3}$ of the apples and $\frac{2}{5}$ of the pears, he had an equal number of apples and pears left. How many apples did he have at first?

Ans: _____ [3]

- 10) Lina has some white, black and red buttons in her shop. There are 360 white buttons. $\frac{1}{5}$ of the remaining buttons are black and rest of the buttons are red. If $\frac{2}{5}$ of the buttons are red buttons, how many buttons are there altogether?

Ans: _____ [3]

- 11) The figure shows two squares and a shaded triangle. The big square has a length of 6 cm while the small square has a length of 2 cm. Find the shaded area.



Ans: _____ [4]

- 12) Alex spent $\frac{1}{6}$ of his money on a book and $\frac{2}{5}$ of the remaining money on some food. His father then gave him another \$30 and he had \$6 more than what he had at first. How much money did Alex have at first?

Ans: _____ [4]

END OF PAPER

Please check your work

SCHOOL : SINGAPORE CHINESE GIRLS PRIMARY SCHOOL
 LEVEL : PRIMARY 5
 SUBJECT : MATH
 TERM : 2021 WA2

SECTION A

| | | | |
|-----|----|----|----|
| Q 1 | Q2 | Q3 | Q4 |
| 2 | 2 | 4 | 3 |

SECTION B

| | | | | | | | | |
|-------|---|----|----|----|---|----|----|----|
| Q 5a) | $1\frac{1}{4}$ | | | | | | | |
| Q5b) | $7\frac{3}{5}$ | | | | | | | |
| Q6 | $4 \times 12 = 48$ $48 + 5 = 53$ $\frac{53}{12} - \frac{18}{12} = \frac{35}{12} = 2\frac{11}{12}$ | | | | | | | |
| Q7 | Area of ABC $\rightarrow \frac{1}{2} \times 4 \times 9 = 36$ | | | | | | | |
| Q8 | $15 \times 20 = 300$ $300 \div 2 = 150$ $\frac{1}{2} \times 12 \times 25 = 150$ (SRQ) $150 \times 2 = 300$ $300 \div 25 = 12$ $25 \times 12 = 300$ (SQWT) $300 - 150 = 150$ | | | | | | | |
| Q9 | <table border="1" style="margin-left: 20px;"> <tr> <td>Q</td> <td>3U</td> <td>3U</td> </tr> <tr> <td>P</td> <td>2U</td> <td>2U</td> <td>2U</td> </tr> </table> <p>LCM of 2 and 3: 6 Before: Apples: $3U \times 3 = 9U$ Pears: $2U \times 5 = 10U$ Total: 19U</p> <p>$19U \rightarrow 2850$ $1U \rightarrow 2850 \div 19 = 150$ $9U \rightarrow 150 \times 9 = 1350$ apples</p> | Q | 3U | 3U | P | 2U | 2U | 2U |
| Q | 3U | 3U | | | | | | |
| P | 2U | 2U | 2U | | | | | |
| Q10 | <table border="1" style="width: 100%; height: 20px;"> <tr> <td></td> <td></td> <td></td> <td></td> <td></td> <td></td> </tr> </table> | | | | | | | |
| | | | | | | | | |

| | | | | | | | | | | | | |
|------------|---|------|--|--|--|------|--|------|------|-----|-------|----|
| | <p>360 White 2U 2U 2U 2U 2U</p> <p style="text-align: center;">(black) ← (white) →</p> <table border="1" style="margin: 10px auto; width: 50%; height: 20px;"> <tr> <td style="width: 20%;"></td> <td style="width: 20%;"></td> <td style="width: 20%;"></td> <td style="width: 20%;"></td> <td style="width: 20%;"></td> </tr> </table> <p> $5 \times 2 = 10$ Total $\rightarrow 5 \times 4 = 20$ $20U - 10U = 10U$ $10U \rightarrow 360$ $1U \rightarrow 360 \div 10 = 36$ $20U \rightarrow 36 \times 20 = 720$ </p> | | | | | | | | | | | |
| | | | | | | | | | | | | |
| Q11 | <p> $\frac{1}{2} \times 6 \times 6 = 18$ $\frac{1}{2} \times 8 \times 2 = 8$ Total $\rightarrow 18 + 8 = 26$ $6 \times 6 = 36$ $2 \times 2 = 4$ $\frac{1}{2} \times 2 \times 4 = 4$ Total $\rightarrow 36 + 4 + 4 = 44$ $44 - 26 = 18\text{cm}^2$ </p> | | | | | | | | | | | |
| Q12 | <table border="1" style="margin: 10px auto; width: 80%; text-align: center;"> <tr> <td style="width: 20%;">Book</td> <td style="width: 15%;"></td> <td style="width: 15%;"></td> <td style="width: 15%;"></td> <td style="width: 15%;"></td> <td style="width: 15%;"></td> <td style="width: 15%;">\$30</td> </tr> </table> <p style="text-align: center;">← Food →</p> <table border="1" style="margin: 10px auto; width: 60%;"> <tr> <td style="width: 80%;">Left</td> <td style="width: 20%; text-align: center;">\$6</td> </tr> <tr> <td>Start</td> <td style="text-align: center;">6U</td> </tr> </table> <p> $3U + 30 = 6U + 6$ $30 - 6 = 6U - 3U$ $3U \rightarrow 24$ $1U \rightarrow 24 \div 3 = 8$ $6U \rightarrow 8 \times 6 = \\48 </p> | Book | | | | | | \$30 | Left | \$6 | Start | 6U |
| Book | | | | | | \$30 | | | | | | |
| Left | \$6 | | | | | | | | | | | |
| Start | 6U | | | | | | | | | | | |