




**NAVAL BASE SECONDARY SCHOOL
PRELIMINARY EXAMINATION, 2022**



Name _____ () Class _____

ADDITIONAL MATHEMATICS

4049/01

Paper 1

29 August 2022

Candidates answer on the Question Paper
No Additional Materials are required

2 hours 15 minutes

READ THESE INSTRUCTIONS FIRST

Write your name, class and index number in the spaces at the top of this page.

Write in dark blue or black pen.

You may use an HB pencil for any diagrams or graphs

Do not use staples, paper clips, glue or correction fluid.

Answer all questions.

Give non-exact numerical answers correct to 3 significant figures, or 1 decimal place in the case of angles in degrees, unless a different level of accuracy is specified in the question.

The use of an approved scientific calculator is expected, where appropriate.

You are reminded of the need for clear presentation in your answers.

At the end of the examination, fasten all your work securely together.

The number of marks is given in brackets [] at the end of each question or part question.

The total number of marks for this paper is **90**.

<i>Item</i>	<i>For Examiner's Use</i>
<i>Presentation</i>	
<i>Accuracy</i>	
<i>Units</i>	
<i>Total</i>	
<i>Parent's Signature</i>	

This paper consists of **22** printed pages and **2** blank pages.

[Turn over

2

Mathematical Formulae**1. ALGEBRA***Quadratic Equation*For the equation $ax^2 + bx + c = 0$,

$$x = \frac{-b \pm \sqrt{b^2 - 4ac}}{2a}$$

Binomial expansion

$$(a + b)^n = a^n + \binom{n}{1}a^{n-1}b + \binom{n}{2}a^{n-2}b^2 + \dots + \binom{n}{r}a^{n-r}b^r + \dots + b^n,$$

where n is a positive integer and $\binom{n}{r} = \frac{n!}{r!(n-r)!} = \frac{n(n-1)\dots(n-r+1)}{r!}$

2. TRIGONOMETRY*Identities*

$$\sin^2 A + \cos^2 A = 1$$

$$\sec^2 A = 1 + \tan^2 A$$

$$\operatorname{cosec}^2 A = 1 + \cot^2 A$$

$$\sin(A \pm B) = \sin A \cos B \pm \cos A \sin B$$

$$\cos(A \pm B) = \cos A \cos B \mp \sin A \sin B$$

$$\tan(A \pm B) = \frac{\tan A \pm \tan B}{1 \mp \tan A \tan B}$$

$$\sin 2A = 2 \sin A \cos A$$

$$\cos 2A = \cos^2 A - \sin^2 A = 2 \cos^2 A - 1 = 1 - 2 \sin^2 A$$

$$\tan 2A = \frac{2 \tan A}{1 - \tan^2 A}$$

Formulae for $\triangle ABC$

$$\frac{a}{\sin A} = \frac{b}{\sin B} = \frac{c}{\sin C}$$

$$a^2 = b^2 + c^2 - 2bc \cos A$$

$$\Delta = \frac{1}{2}bc \sin A$$

[Turn over

3

Answer **all** the questions.

- 1 The line $x + 2y = 3$ intersects the curve $x^2 + 12x + 5y^2 = 18$ at two points.
Find the coordinates of the two points.

[4]

[Turn over

4

2 Express $2x^2 - 3x - 11$ in the form $a(x - h)^2 + k$, where a , h and k are constants.

Hence, state the coordinates of the turning point of the curve $y = 2x^2 - 3x - 11$. [4]

[Turn over

5

- 3 (a) Express $\frac{10x}{3-5x}$ in the form $a + \frac{b}{3-5x}$, where a and b are integers. [2]

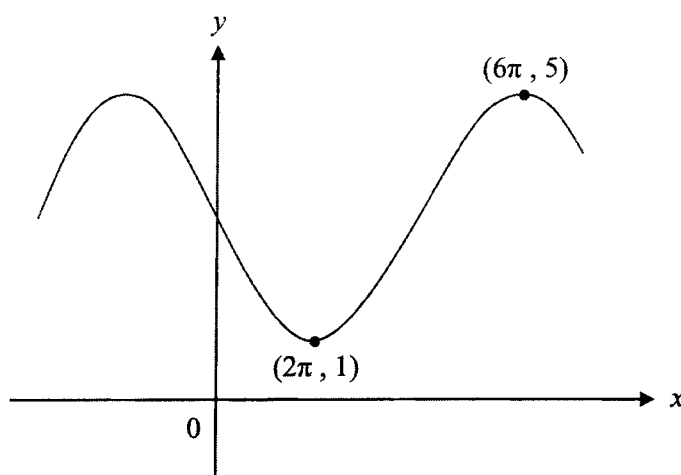
- (b) Hence, integrate $\frac{10x}{3-5x}$ with respect to x . [2]

[Turn over

6

- 4 The diagram shows part of the graph of $y = a \sin \frac{x}{b} + c$.

The graph has a maximum point at $(6\pi, 5)$ and a minimum point at $(2\pi, 1)$.



Determine the values of the constants a , b and c .

[5]

[Turn over

7

- 5 (a) Air is being pumped into a spherical balloon at a constant rate of 12 cm^3 per second. Find the rate at which the radius of the balloon is increasing when the radius is 4 cm.

[The volume of a sphere of radius r is $\frac{4}{3}\pi r^3$] [3]

- (b) When the radius of the balloon stretches beyond 5 cm, it was found that while air is being pumped in, some air also starts to leak out of the balloon.

Given that the radius of the balloon is increasing at a rate of 0.015 cm per second when the radius is 7 cm, find the rate at which air is leaking out of the balloon. [2]

[Turn over

8

6 Express $\frac{14x^2 - 15x - 29}{(x-1)^2(2x+3)}$ in partial fractions.

[6]

[Turn over

9

- 7 A polynomial $f(x)$ is given by $4x^3 - 6x^2 + kx + 3$, where k is a constant.
- (a) Find the value of k given that $f(x)$ leaves a remainder of 14 when divided by $2x - 1$. [2]

- (b) In the case where $k = 2$, the quadratic expression $2x^2 + px + 3$ is a factor of $f(x)$. Find the value of the constant p . [4]

[Turn over

10

8 (a) Solve $3x = \sqrt{1-x} - 1$.

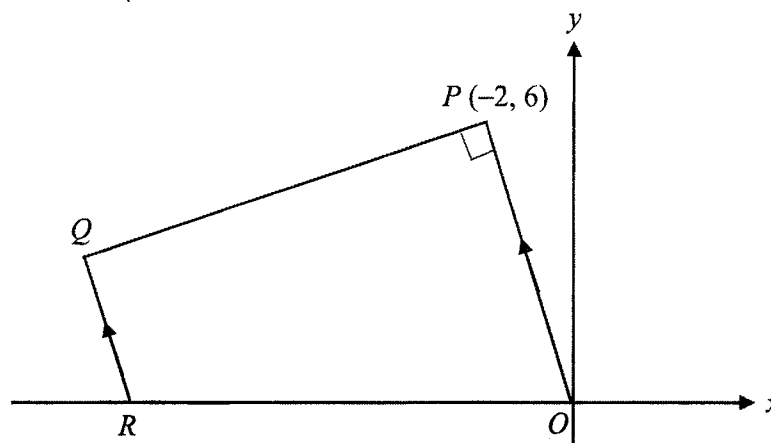
[3]

- (b) A triangle has a base of length $(1+\sqrt{3})$ cm and an area of $(14+8\sqrt{3})$ cm².
Find, **without using a calculator**, the perpendicular height of the triangle, in cm,
in the form $(a+b\sqrt{3})$, where a and b are integers. [4]

[Turn over

11

- 9 In the diagram, $OPQR$ is a trapezium with OP parallel to RQ and OP perpendicular to PQ . The point P has coordinates $(-2, 6)$ and R lies on the x -axis.



- (a) Find the equation of the perpendicular bisector of OP . [3]

[Turn over

12

- (b) Given that point R lies on the perpendicular bisector of OP , show that the coordinates of Q is $(-11, 3)$. [3]

- (c) Find the area of trapezium $OPQR$. [2]

[Turn over

13

10 The equation of a curve is $y = 2x^3 + 6x^2 - 18x + 5$.

- (a) Find the coordinates of the stationary points and determine the nature of these stationary points.

[5]

[Turn over

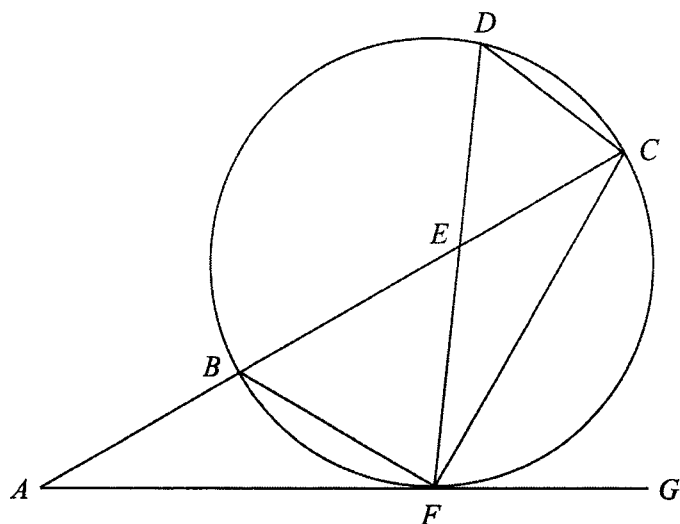
14

- (b) Find the minimum **gradient** of the curve and the value of x when the minimum gradient occurs.

[3]

[Turn over

- 11 In the diagram, BC is a diameter of the circle. ABC is a straight line and AG is a tangent to the circle at point F . The line DF intersects BC at point E .



- (a) Prove that triangles ABF and AFC are similar. [3]

- (b) Hence, show that $AF^2 = AB \times AC$. [1]

[Turn over

16

(c) (i) Name a triangle similar to triangle DEC . [1]

(ii) Given that $3EC = 2EB$, show that $k(BC)^2 = EF \times ED$, where k is a constant to be determined. [3]

[Turn over

17

- 12 (a) Show that the solution of the equation $3^{2x-1} = 2^{3-x}$ is $x = \frac{\lg 24}{\lg 18}$. [3]

- (b) Given that $\log_6 4y = \log_6 3x^2 - 1$, express y in terms of x . [2]

[Turn over

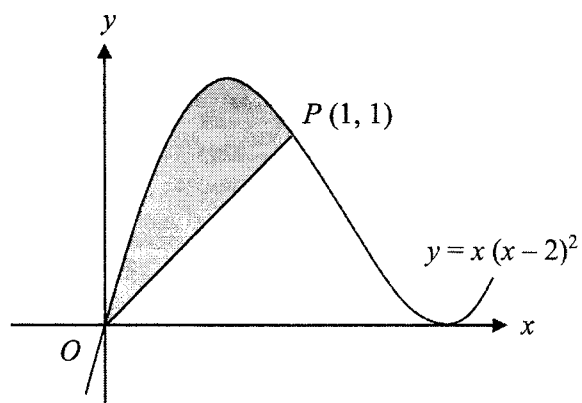
18

- (c) Solve the equation $\log_2 x^2 = 8 \log_x 2$. [3]

[Turn over

19

- 13 The diagram shows part of the curve of $y = x(x-2)^2$, which passes through the point $P(1, 1)$.



- (a) Show that the equation of OP is $y = x$. [2]

- (b) Show that OP is the normal to the curve at P . [2]

[Turn over

20

- (c) Find the area of the shaded region bounded by the curve and the line OP . [4]

[Turn over

21

14 (a) Prove that $(\operatorname{cosec}\theta + \cot\theta)^2 = \frac{1 + \cos\theta}{1 - \cos\theta}$. [4]

[Turn over

22


- (b) Hence, solve the equation $(\operatorname{cosec} 2\theta + \cot 2\theta)^2 (1 - \cos 2\theta) = 2 \cos \theta$ for $0^\circ \leq \theta \leq 360^\circ$.

[5]

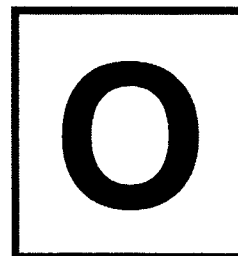
-----END OF PAPER-----

BLANK PAGE

BLANK PAGE



**NAVAL BASE SECONDARY SCHOOL
PRELIMINARY EXAMINATION, 2022**



Name _____ () Class _____

ADDITIONAL MATHEMATICS

4049/02

Paper 2

30 August 2022

Candidates answer on the Question Paper
No Additional Materials are required

2 hours 15 minutes

READ THESE INSTRUCTIONS FIRST

Write your name, class and index number in the spaces at the top of this page.

Write in dark blue or black pen.

You may use an HB pencil for any diagrams or graphs

Do not use staples, paper clips, glue or correction fluid.

Answer **all** questions.

Give non-exact numerical answers correct to 3 significant figures, or 1 decimal place in the case of angles in degrees, unless a different level of accuracy is specified in the question.

The use of an approved scientific calculator is expected, where appropriate.

You are reminded of the need for clear presentation in your answers.

At the end of the examination, fasten all your work securely together.

The number of marks is given in brackets [] at the end of each question or part question.

The total number of marks for this paper is **90**.

<i>Item</i>	<i>For Examiner's Use</i>
<i>Presentation</i>	
<i>Accuracy</i>	
<i>Units</i>	
<i>Total</i>	
<i>Parent's Signature</i>	

This paper consists of **18** printed pages and **2** blank pages.

[Turn over

Mathematical Formulae**1. ALGEBRA***Quadratic Equation*

For the equation $ax^2 + bx + c = 0$,

$$x = \frac{-b \pm \sqrt{b^2 - 4ac}}{2a}$$

Binomial expansion

$$(a + b)^n = a^n + \binom{n}{1}a^{n-1}b + \binom{n}{2}a^{n-2}b^2 + \dots + \binom{n}{r}a^{n-r}b^r + \dots + b^n,$$

where n is a positive integer and $\binom{n}{r} = \frac{n!}{r!(n-r)!} = \frac{n(n-1)\dots(n-r+1)}{r!}$

2. TRIGONOMETRY*Identities*

$$\sin^2 A + \cos^2 A = 1$$

$$\sec^2 A = 1 + \tan^2 A$$

$$\operatorname{cosec}^2 A = 1 + \cot^2 A$$

$$\sin(A \pm B) = \sin A \cos B \pm \cos A \sin B$$

$$\cos(A \pm B) = \cos A \cos B \mp \sin A \sin B$$

$$\tan(A \pm B) = \frac{\tan A \pm \tan B}{1 \mp \tan A \tan B}$$

$$\sin 2A = 2 \sin A \cos A$$

$$\cos 2A = \cos^2 A - \sin^2 A = 2 \cos^2 A - 1 = 1 - 2 \sin^2 A$$

$$\tan 2A = \frac{2 \tan A}{1 - \tan^2 A}$$

Formulae for $\triangle ABC$

$$\frac{a}{\sin A} = \frac{b}{\sin B} = \frac{c}{\sin C}$$

$$a^2 = b^2 + c^2 - 2bc \cos A$$

$$\Delta = \frac{1}{2}bc \sin A$$

[Turn over

3

Answer **all** the questions.

- 1 Solve the equation $3^{2y+1} - 3^{y+2} + 3 = 3^y$. [4]

[Turn over

4

- 2 Show that $x+2$ is a solution of the equation $2x^3 + 5x^2 + x - 2 = 0$ and hence solve the equation completely.

[5]

[Turn over

5

3 (a) Differentiate $4xe^{3x}$ with respect to x . [3]

(b) Hence, evaluate $\int_0^3 6xe^{3x} dx$, giving your answer in exact form. [4]

[Turn over

6

- 4 In the expansion of $\left(x^2 - \frac{m}{2x}\right)^{12}$, where m is a positive constant, the independent term of x is 126 720.

(a) Show that $m = 4$. [4]

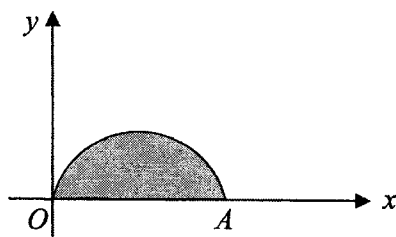
(b) Hence, find the coefficient of x^9 in the expansion of $\left(x^2 - \frac{m}{2x}\right)^{12} (8x^9 + 5)$. [3]

[Turn over

7

- 5 (a) Show that $\frac{d}{dx}(x \sin x + \cos x) = x \cos x$. [3]

- (b) The diagram shows part of the curve $y = x \cos x$.



- (i) Find the coordinates of the point A. [3]

- (ii) Calculate the area of the shaded region leaving your answer in exact form. [2]

[Turn over

8

- 6 (a) (i) Find the range of values of k for which the expression $2x^2 - 7x + k$ is positive for all real values of x . [3]

- (ii) Hence, find the range of values of x for which $\frac{(3x-2)(x-4)}{2x^2-7x+8} < 0$. [3]

[Turn over

- (b) (i) Find the range of values of p for which the equation $px^2 + x + p(x+1) = 0$ has real and distinct roots. [3]

- (ii) State the value(s) of p for which the curve $y = px^2 + x + p(x+1)$ is tangent to the x -axis. [1]

10

- 7 The table below shows experimental values of two variables x and y , which are connected by an equation of the form $\frac{a}{y} = \frac{b}{x} + 1$, where a and b are constants.

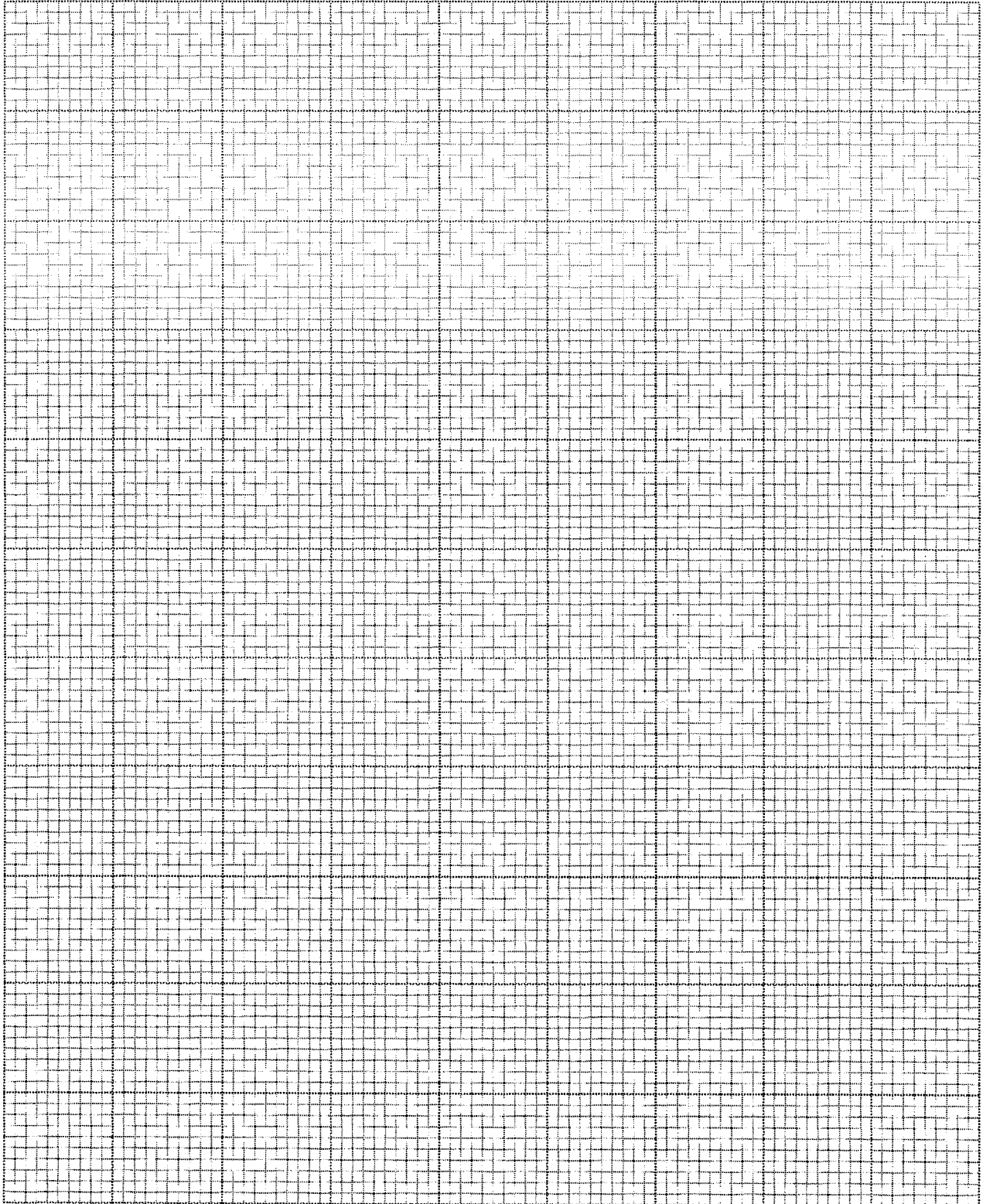
x	1.25	2	2.5	5
y	1	1.51	1.82	3.08

- (a) Plot $\frac{1}{y}$ against $\frac{1}{x}$ and draw a straight line graph. [3]

[Grid provided on page 11]

- (b) Use your graph to estimate the value of a and of b . [3]

[Turn over



[Turn over

It is found that the values of $\frac{1}{x}$ are rather small. Another straight line graph is proposed by using x as the horizontal axis.

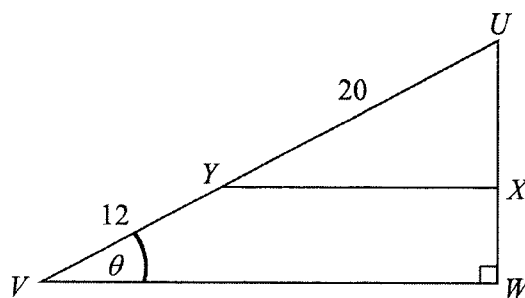
(c) State the variable in the vertical axis for this proposed new line. [2]

(d) Explain how the values of a and b can be found using this proposed new line. [2]

[Turn over

13

- 8 The diagram shows a pair of similar triangles YUX and VUW . Point Y lies on the straight line VU such that $VY = 12$ cm and $YU = 20$ cm. Angle $UVW = \theta$ where $0^\circ \leq \theta \leq 90^\circ$ and UW is perpendicular to VW .



- (a) Show that L cm, the perimeter of the trapezium $VYXW$, is given by $L = 12 \sin \theta + 52 \cos \theta + 12$. [3]

- (b) Express L in the form $12 + R \sin(\theta + \alpha)$ where $R > 0$ and $0^\circ < \alpha < 90^\circ$. [3]

[Turn over

(c) State the maximum value of L and the corresponding value of θ . [3]

(d) Find the value of θ when $L = 30$. [3]

[Turn over

15

- 9 The velocity, $v \text{ ms}^{-1}$, of a particle moving in a straight line, t seconds after passing a fixed point O , is given by $v = \frac{3}{t+1} - \frac{t+1}{3}$. It is given that the particle comes instantaneously at rest at point A .

(a) Find the time taken to reach the point A . [3]

(b) Calculate the distance OA . [5]

[Turn over

16

- (c) Show that the particle is again at O at some instant during the fifth second after first passing through O . [3]

- (d) Find the acceleration of the particle when $t = 5$. [2]

[Turn over

17

10 The equation of a circle, S_1 , with centre C is given by $x^2 + y^2 - 8x - 16y + 55 = 0$.

(a) Find the coordinates of C and the radius of the circle S_1 . [3]

(b) Find the equation of the tangent to S_1 at $A(7, 12)$. [3]

The tangent cuts the x -axis at point B .

(c) State the coordinates of B . [1]

[Turn over

18

A second circle, S_2 , with centre D , passes through C , A and B .

(d) Show that D has coordinates $\left(\frac{27}{2}, 4\right)$ and hence find the equation of S_2 . [5]

(e) Determine whether D lies inside or outside S_1 . [2]

[Turn over

BLANK PAGE

BLANK PAGE