

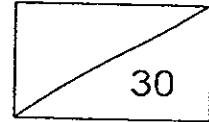
Nan Hua Primary School
Primary 1 Mathematics Worksheet
Revision Worksheet 1

Name: _____ ()

Class: Primary 1 ()

Date: _____

Marks:

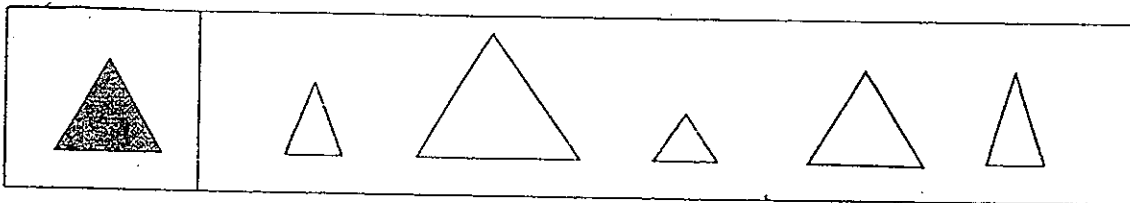


Section A: (12 x 1 mark)

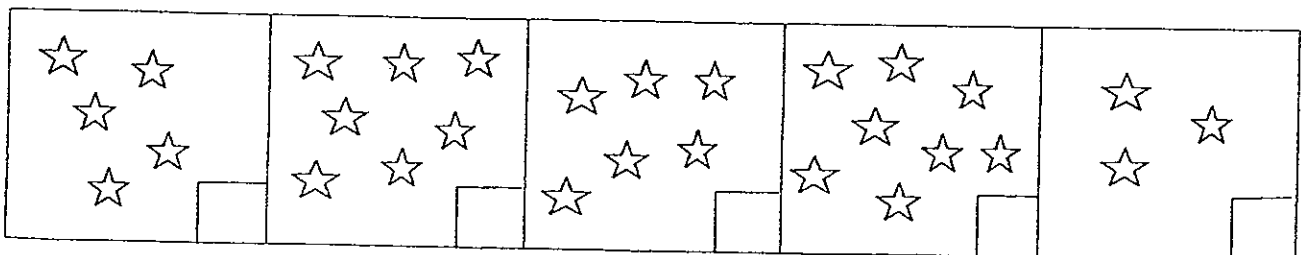
1. Write in word.

18	
-----------	--

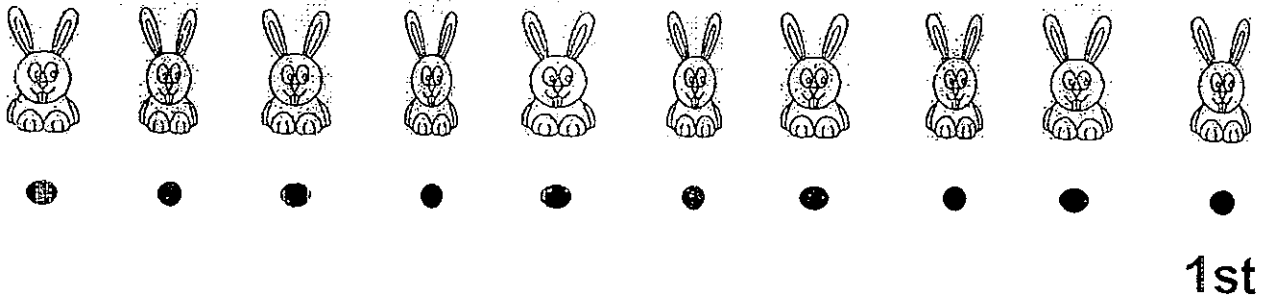
2. **Colour** the shape which is the **same size** as the shaded one.




3. **Tick (✓)** the boxes that have **more than 6 stars**.



4. **Match** the ordinal numbers to the correct rabbit.

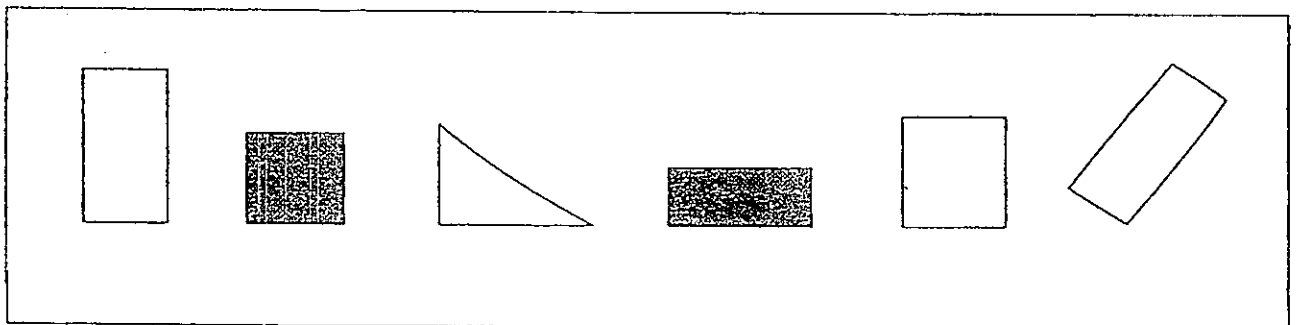



fifth


ninth

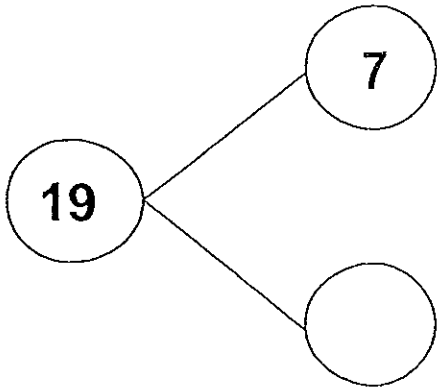
5. One shape does not belong to the group.

Circle the shape.



For questions 6 to 10, fill in the blanks.

6.



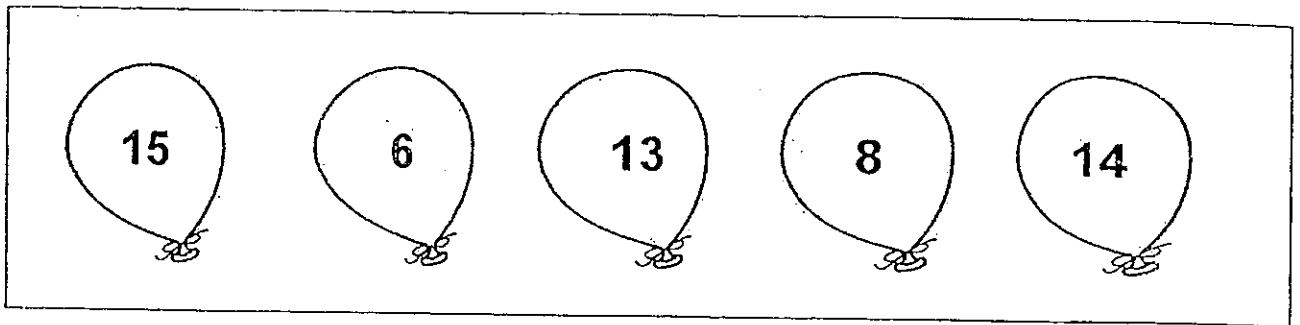
7. 16 comes just before _____.

8. 14 is 5 more than _____.

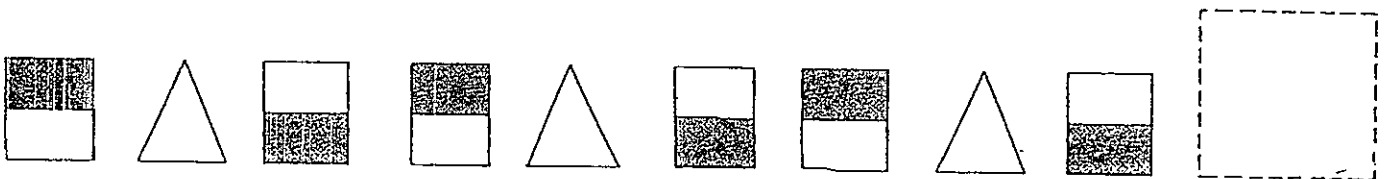
9. _____ is 6 less than 17.

10. $15 - \square = 7$

11. Colour the two balloons that make 20.




12. Draw the shape that comes next in the pattern.



Section B: (7 x 2 marks)

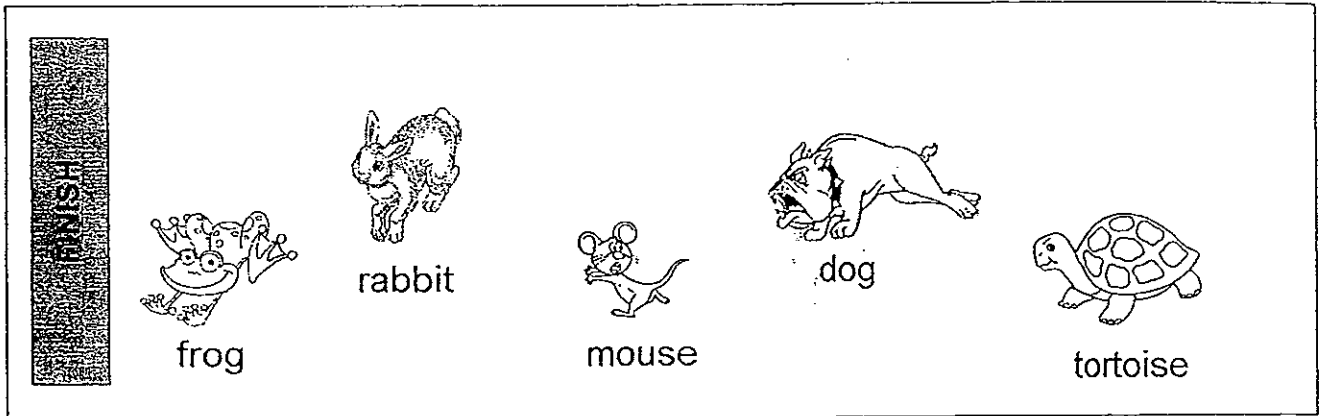
13. Look at the diagram below and fill in the blanks.



a) Bottle _____ is 7th from the right.

b) Bottle C is _____ from the left.

14. Look at the diagram below and fill in the blanks.




a) The _____ is **after** the rabbit.

b) The _____ is **between** the mouse and the last animal.

15. Look at the diagram below and fill in the blanks.

Each stands for 1 unit.



a) The son is about _____ units tall.

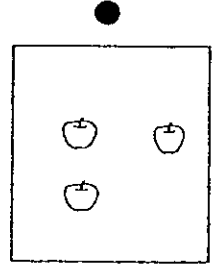

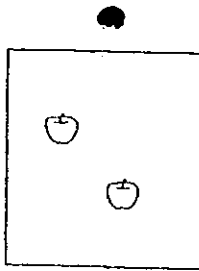
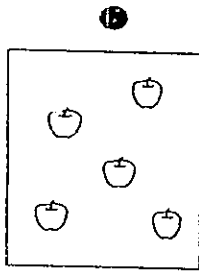

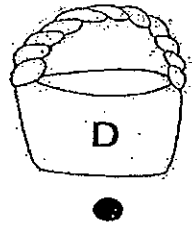
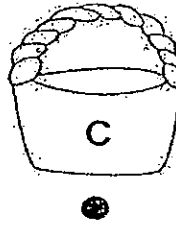
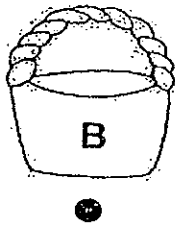
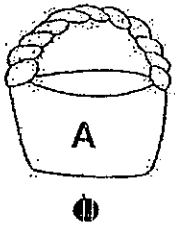
b) The father is about _____ units **taller** than the son.

16a) Draw lines to match each basket to the correct number of apples.

Basket A has 5 apples.


Basket B has 2 more apples than Basket A.

Basket C has 3 fewer apples than Basket A.




b) Basket D has the **same** number of apples as Basket A.

Draw the number of apples in Basket D in the box below.



17. Look at the diagram below and fill in the blanks.

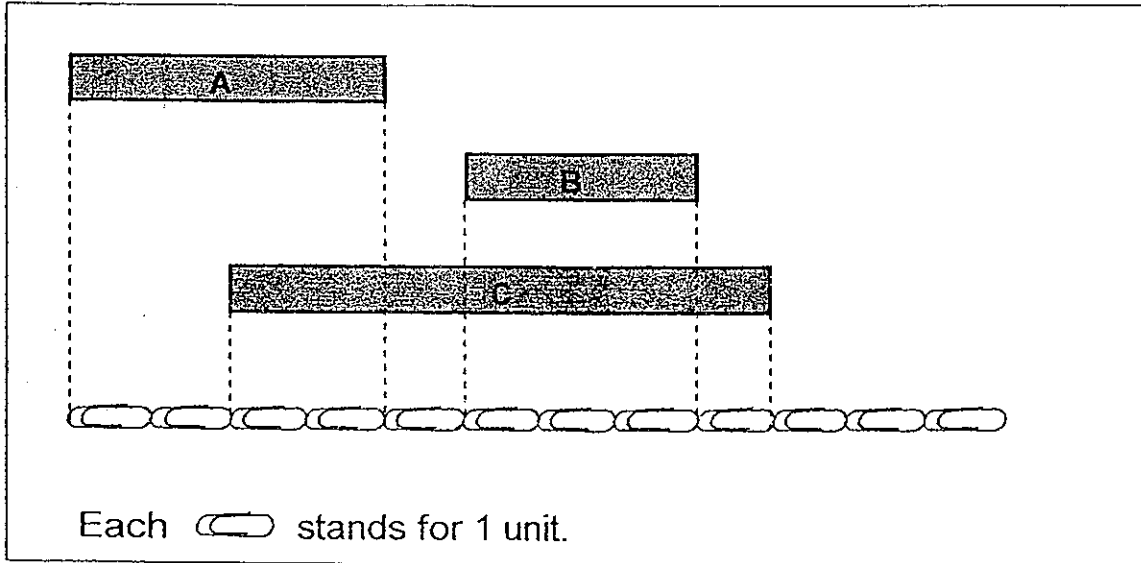
Each  stands for 1 unit.




a) Ribbon B is _____ units long.

b) Ribbon _____ is as long as Ribbon _____.

18. Look at the diagram below.




Arrange Papers A, B and C from the longest to the shortest.



longest

19. Tick the box(es) with answer(s) smaller than 14.



Section C: (1 x 4 marks)


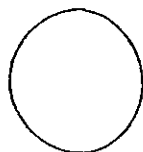

Read the following story sum carefully.

Complete the number equation and answer statement.


20. There are 20 fish in a fish tank.

Mr Lim takes 7 fish out of the tank.

How many fish are there in the tank now?



=



There are _____ fish in the tank now.

End of paper

ANSWER SHEET

EXAM PAPER 2013

SCHOOL : NAN HUA PRIMARY SCHOOL

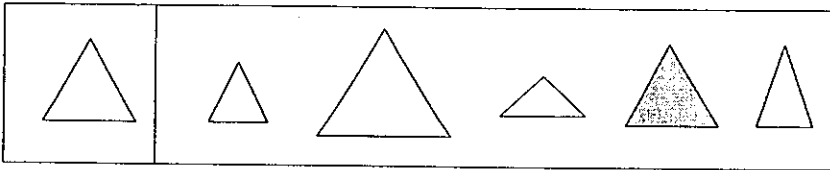
SUBJECT : PRIMARY 1 MATHEMATICS

TERM : TEST 1 (Revision Worksheet 1)

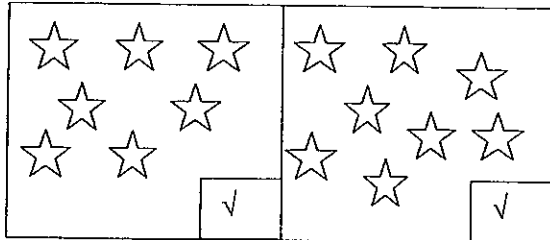
Section A

Q1) eighteen

Q2)

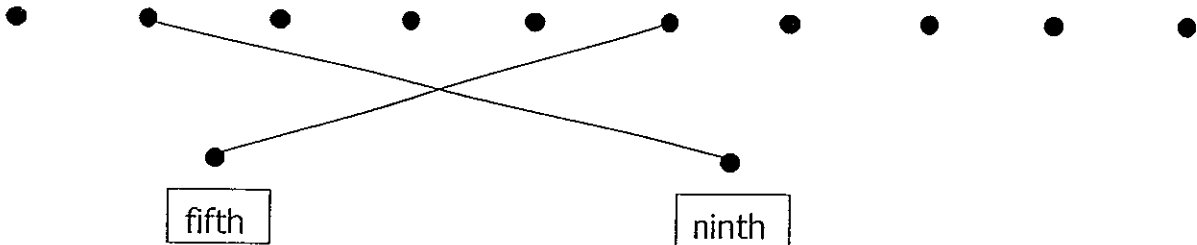


Q3)




Q4)

10 th	9 th	8 th	7 th	6 th	5 th	4 th	3 rd	2 nd	1 st
------------------	-----------------	-----------------	-----------------	-----------------	-----------------	-----------------	-----------------	-----------------	-----------------



Q5)



Q6) 12

Q7) 17

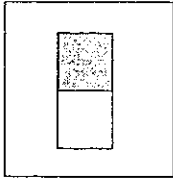
Q8) 9

Q9) 11

Q10) 8

Q11) 6, 14

Q12)



Section B

Q13) a) B

b) third

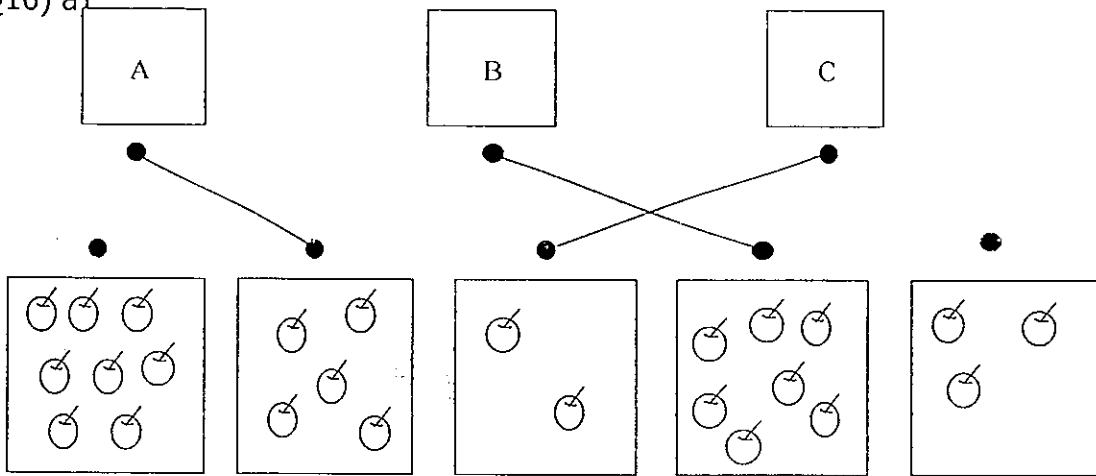
Q14) a) mouse

b) dog

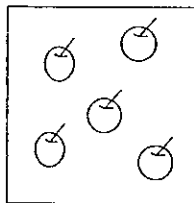
Q15) a) 5

b) 6

Q16) a)



b)



Q17) a) 6

b) A; E

Q18) C, A, B

Q19) $20 - 7$; $18 - 6$

Section C

Q20) $20 - 7 = 13$ fishes

