

TAO NAN SCHOOL

HOLISTIC ASSESSMENT MATHEMATICS REVIEW (3) 2013

Name: _____ ()

Class : Pr 2 () Duration : 35 minutes

Date: _____

Parent's signature : _____

MR 3
15

Section A (6 x 1 mark)

Questions 1 to 6 carry 1 mark each.

For each question, four options are given.

One of them is the correct answer.

Make your choice (1, 2, 3 or 4) and write it in the brackets provided.

1. $508 - 69 =$ _____.

(1) 561

(2) 464

(3) 439

(4) 349

()

2. 6×4 is _____ more than $40 \div 5$.

(1) 8

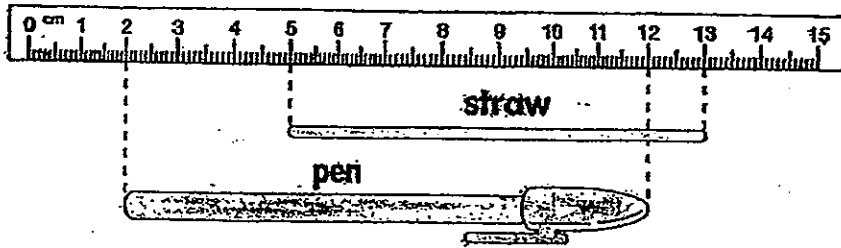
(2) 16

(3) 24

(4) 32

()

3. The pen is longer than the straw by _____ cm.



- (1) 1
- (2) 2
- (3) 8
- (4) 10

()

4.

$$\text{butterfly} \times \text{butterfly} = 100$$

$$\text{caterpillar} + \text{caterpillar} = 18$$

$$\text{butterfly} \times \text{caterpillar} = \boxed{}$$

The answer in the box is _____

- (1) 9
- (2) 10
- (3) 19
- (4) 90

()

5. Mrs Lee puts 32 cookies equally into 4 boxes.
There are _____ cookies in each box.

(1) 8

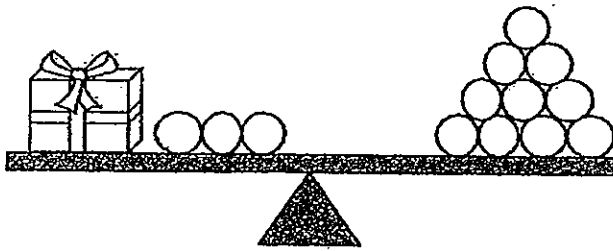
(2) 7

(3) 6


(4) 5

()

6.



The mass of each ○ is 5 kg.

What is the mass of the  ?

(1) 10

(2) 15

(3) 35

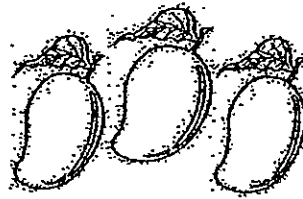
(4) 50

()

Section B (5 x 1 mark)

Questions 7 to 11 carry 1 mark each.

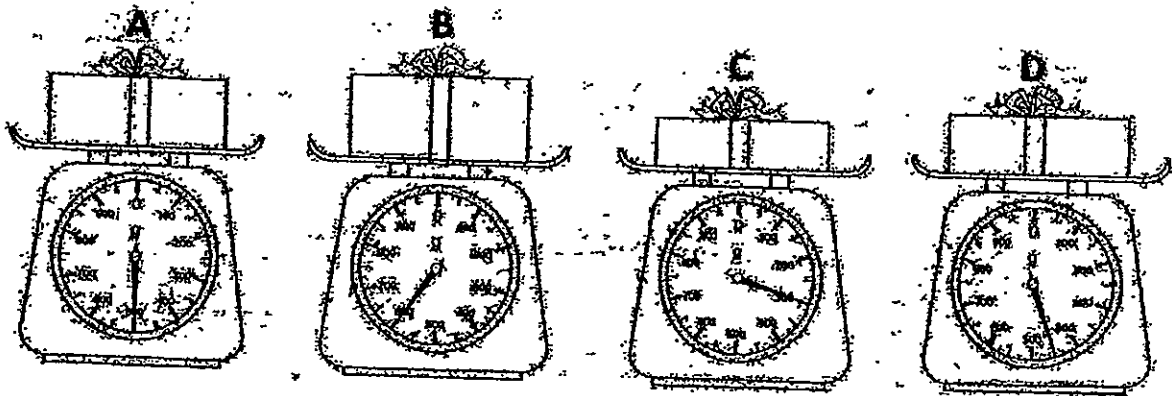
7. At a supermarket, mangoes were sold at 3 for \$4.
Mrs Wong paid \$12 for some mangoes.



3 for \$4

She bought _____ mangoes.

8.



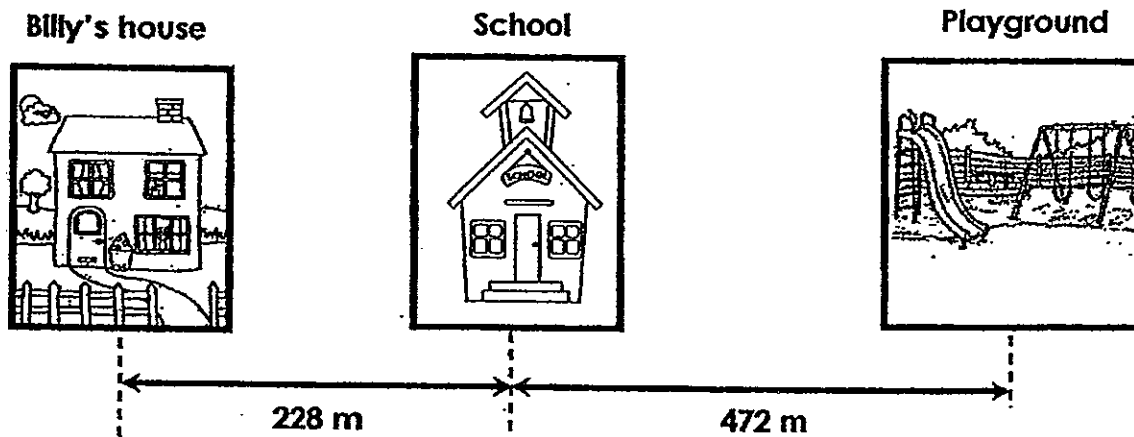
The difference between the heaviest and the lightest
box is _____ g.

9. 10 children attended a baking class.
Each child baked the same number of cupcakes.
They baked 40 cupcakes altogether.



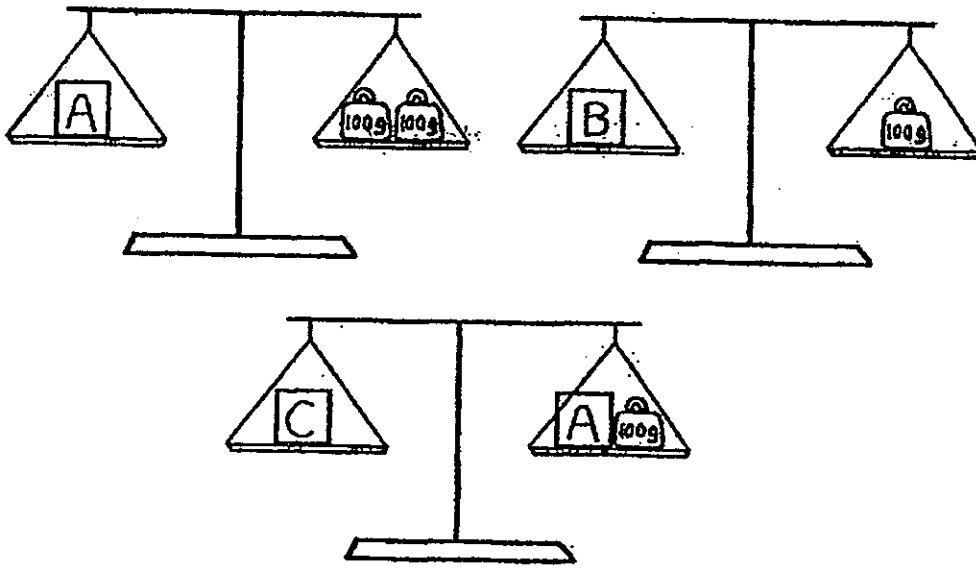
Each child baked _____ cupcakes.

- 10.



Billy's house is _____ m from the playground.

11. Which is the heaviest box ?



Box _____ is the heaviest.

Section C (4 marks)

Show your working and number sentences clearly.

12. Mr Chong bought 5 bags of tomatoes and 4 bags of onions.
Their total mass is 36kg.

(a) The mass of each bag of onions is 4kg.
What is the total mass of the onions ?

The total mass of the onions is _____ kg

(b) What is the mass of 1 bag of tomatoes ?

Each bag of tomatoes is _____ kg.



ANSWER SHEET

EXAM PAPER 2013

SCHOOL : TAO NAN SCHOOL

SUBJECT : PRIMARY 2 MATHEMATICS

TERM : TEST 3 (HOLISTIC ASSESSMENT)

Q1	Q2	Q3	Q4	Q5	Q6
3	2	2	4	1	3

Section B

Q7) 9

Q8) 300g

Q9) 4

Q10) 700m

Q11) C

Section C

Q12

a) $4 \times 4 = 16$

b) $36 - 16 = 20$

$20 \div 5 = 4$

